

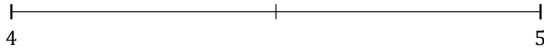
Rounding Mixed Numbers (A)

Name: _____

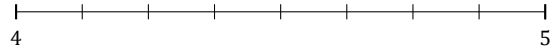
Date: _____

Round each mixed number to the nearest whole. Round up if it's a tie.

1. $4\frac{1}{2} \approx$



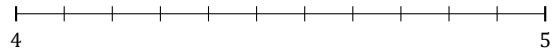
2. $4\frac{6}{8} \approx$



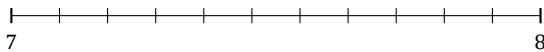
3. $6\frac{2}{5} \approx$



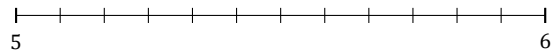
4. $4\frac{5}{11} \approx$




5. $7\frac{4}{11} \approx$



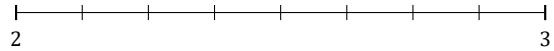
6. $5\frac{8}{12} \approx$




7. $6\frac{4}{7} \approx$



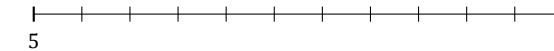
8. $2\frac{4}{8} \approx$



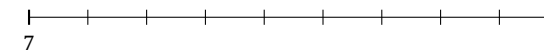
9. $6\frac{2}{3} \approx$



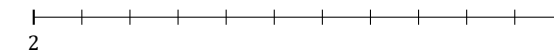
10. $5\frac{9}{11} \approx$



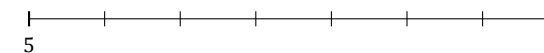
11. $7\frac{8}{9} \approx$



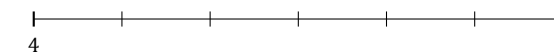
12. $2\frac{1}{11} \approx$



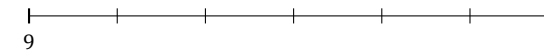
13. $5\frac{1}{7} \approx$



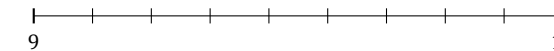
14. $4\frac{5}{6} \approx$



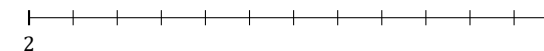
15. $9\frac{4}{6} \approx$



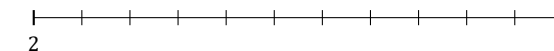
16. $9\frac{7}{9} \approx$



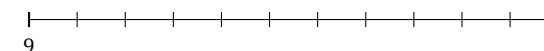
17. $2\frac{6}{12} \approx$



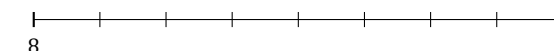
18. $2\frac{7}{11} \approx$



19. $9\frac{3}{11} \approx$



20. $8\frac{7}{8} \approx$



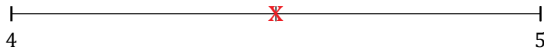
Rounding Mixed Numbers (A) Answers

Name: _____

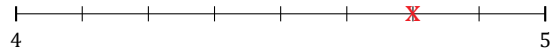
Date: _____

Round each mixed number to the nearest whole. Round up if it's a tie.

1. $4\frac{1}{2} \simeq 5$



2. $4\frac{6}{8} \simeq 5$



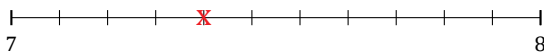
3. $6\frac{2}{5} \simeq 6$



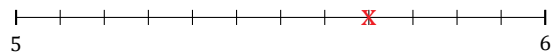
4. $4\frac{5}{11} \simeq 4$




5. $7\frac{4}{11} \simeq 7$



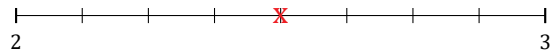
6. $5\frac{8}{12} \simeq 6$




7. $6\frac{4}{7} \simeq 7$



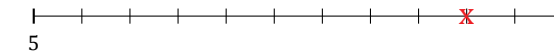
8. $2\frac{4}{8} \simeq 3$



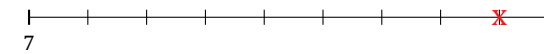
9. $6\frac{2}{3} \simeq 7$



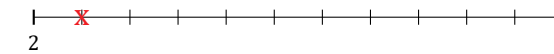
10. $5\frac{9}{11} \simeq 6$



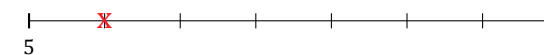
11. $7\frac{8}{9} \simeq 8$



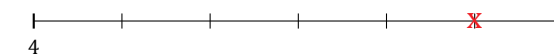
12. $2\frac{1}{11} \simeq 2$



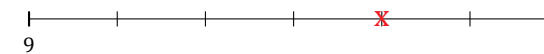
13. $5\frac{1}{7} \simeq 5$



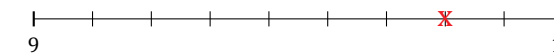
14. $4\frac{5}{6} \simeq 5$



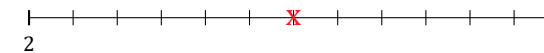
15. $9\frac{4}{6} \simeq 10$



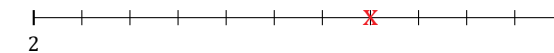
16. $9\frac{7}{9} \simeq 10$



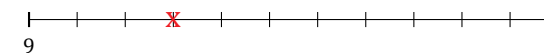
17. $2\frac{6}{12} \simeq 3$



18. $2\frac{7}{11} \simeq 3$



19. $9\frac{3}{11} \simeq 9$



20. $8\frac{7}{8} \simeq 9$

