

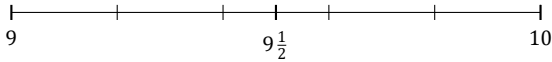
Rounding Mixed Numbers (I)

Name: _____

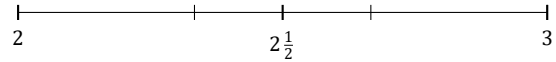
Date: _____

Round each mixed number to the nearest half. Round up if it's a tie.

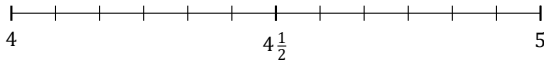
1. $9\frac{3}{5} \approx$



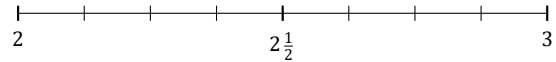
2. $2\frac{1}{3} \approx$



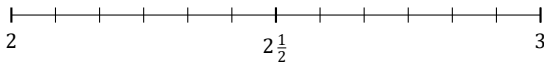
3. $4\frac{11}{12} \approx$



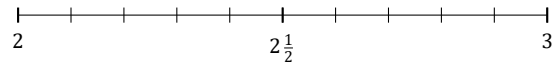
4. $2\frac{6}{8} \approx$



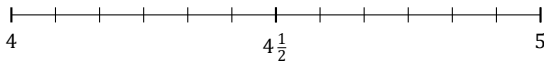
5. $2\frac{7}{12} \approx$



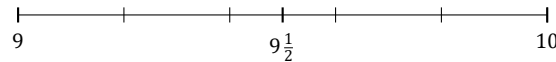
6. $2\frac{8}{10} \approx$



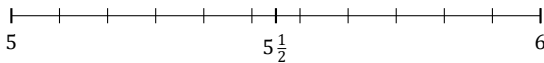
7. $4\frac{3}{12} \approx$



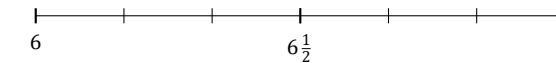
8. $9\frac{1}{5} \approx$



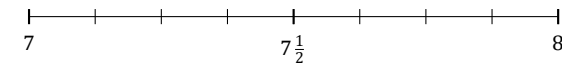
9. $5\frac{3}{11} \approx$



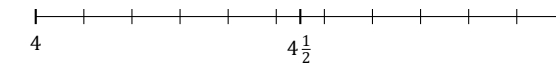
10. $6\frac{3}{6} \approx$



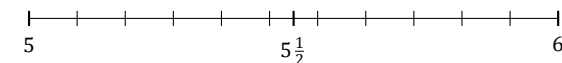
11. $7\frac{2}{8} \approx$



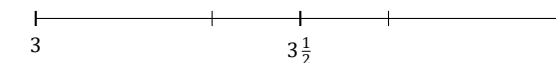
12. $4\frac{10}{11} \approx$



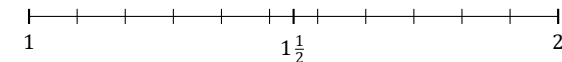
13. $5\frac{2}{11} \approx$



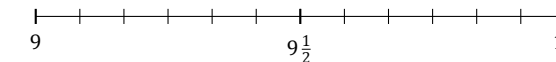
14. $3\frac{2}{3} \approx$



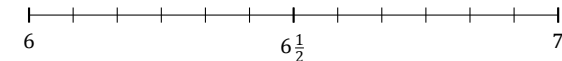
15. $1\frac{5}{11} \approx$



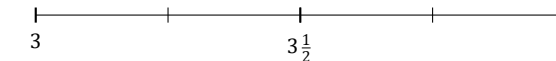
16. $9\frac{5}{12} \approx$



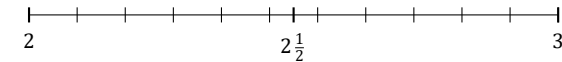
17. $6\frac{8}{12} \approx$



18. $3\frac{1}{4} \approx$



19. $2\frac{9}{11} \approx$



20. $8\frac{6}{7} \approx$

