

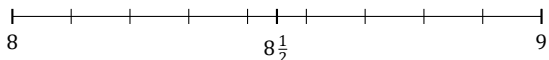
Rounding Mixed Numbers (E)

Name: _____

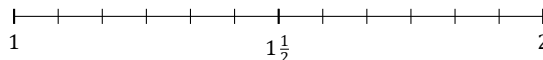
Date: _____

Round each mixed number to the nearest half. Round up if it's a tie.

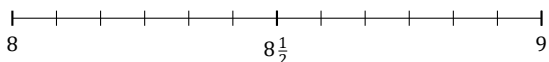
1. $8\frac{8}{9} \approx$



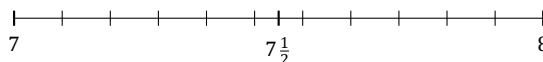
2. $1\frac{7}{12} \approx$



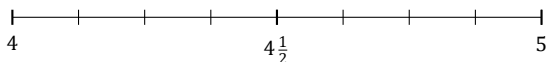
3. $8\frac{2}{12} \approx$



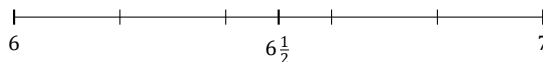
4. $7\frac{10}{11} \approx$



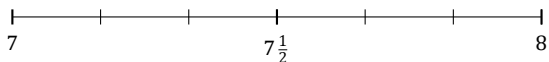
5. $4\frac{5}{8} \approx$



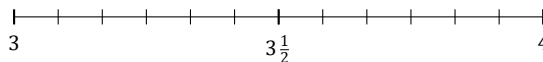
6. $6\frac{1}{5} \approx$



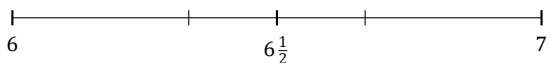
7. $7\frac{3}{6} \approx$



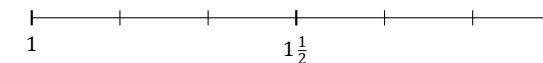
8. $3\frac{4}{12} \approx$



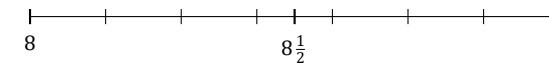
9. $6\frac{2}{3} \approx$



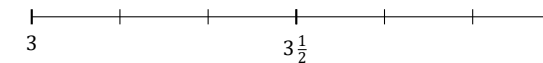
10. $1\frac{2}{6} \approx$



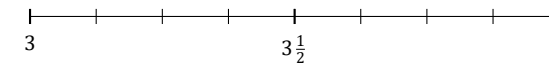
11. $8\frac{4}{7} \approx$



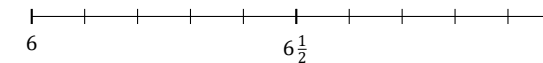
12. $3\frac{5}{6} \approx$



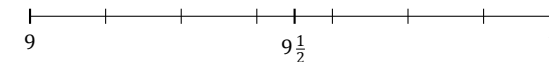
13. $3\frac{3}{8} \approx$



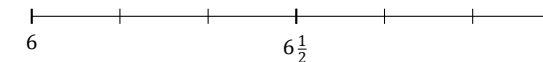
14. $6\frac{9}{10} \approx$



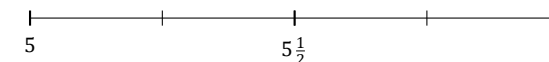
15. $9\frac{2}{7} \approx$



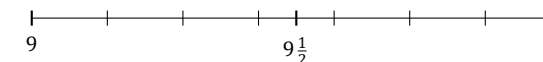
16. $6\frac{4}{6} \approx$



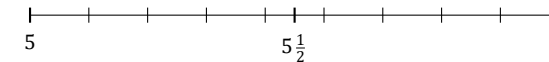
17. $5\frac{3}{4} \approx$



18. $9\frac{3}{7} \approx$



19. $5\frac{5}{9} \approx$



20. $3\frac{1}{10} \approx$

