

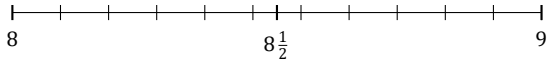
Rounding Mixed Numbers (C)

Name: _____

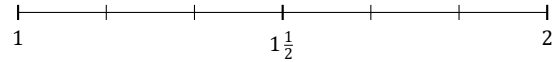
Date: _____

Round each mixed number to the nearest half. Round up if it's a tie.

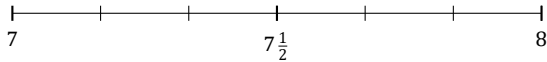
1. $8\frac{5}{11} \approx$



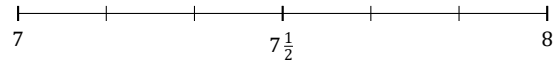
2. $1\frac{4}{6} \approx$



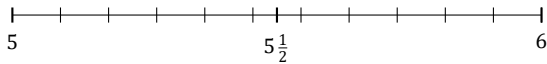
3. $7\frac{1}{6} \approx$



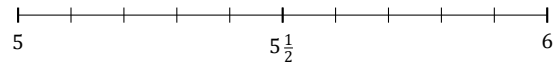
4. $7\frac{5}{6} \approx$



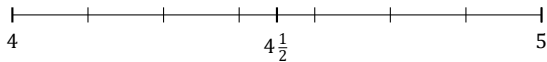
5. $5\frac{4}{11} \approx$



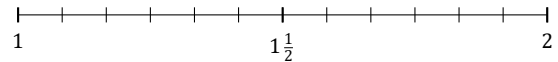
6. $5\frac{7}{10} \approx$



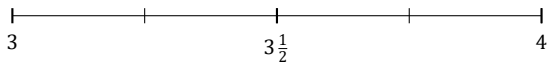
7. $4\frac{1}{7} \approx$



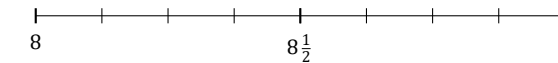
8. $1\frac{4}{12} \approx$



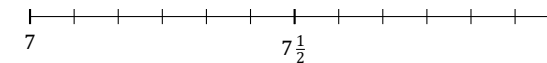
9. $3\frac{3}{4} \approx$



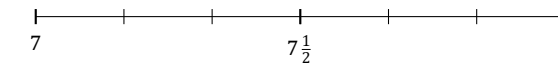
10. $8\frac{6}{8} \approx$



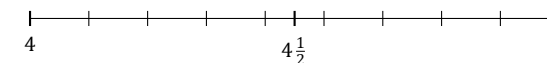
11. $7\frac{1}{12} \approx$



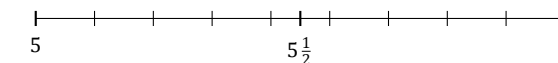
12. $7\frac{3}{6} \approx$



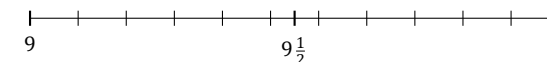
13. $4\frac{4}{9} \approx$



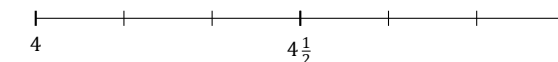
14. $5\frac{8}{9} \approx$



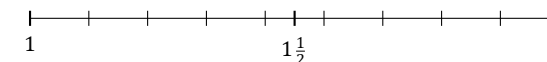
15. $9\frac{7}{11} \approx$



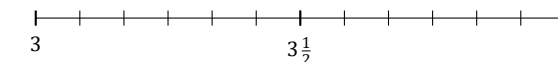
16. $4\frac{2}{6} \approx$



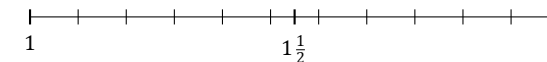
17. $1\frac{5}{9} \approx$



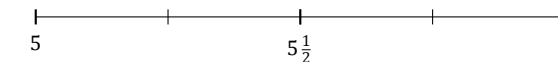
18. $3\frac{8}{12} \approx$



19. $1\frac{1}{11} \approx$



20. $5\frac{2}{4} \approx$



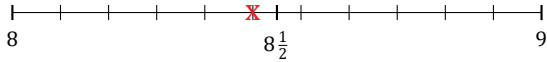
Rounding Mixed Numbers (C) Answers

Name: _____

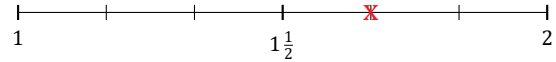
Date: _____

Round each mixed number to the nearest half. Round up if it's a tie.

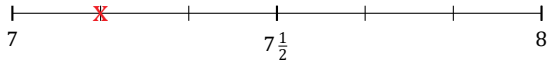
1. $8\frac{5}{11} \approx 8\frac{1}{2}$



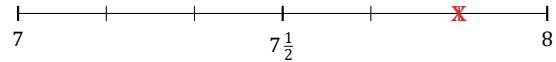
2. $1\frac{4}{6} \approx 1\frac{1}{2}$



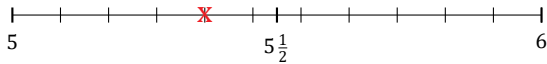
3. $7\frac{1}{6} \approx 7$



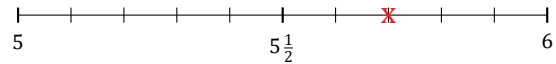
4. $7\frac{5}{6} \approx 8$



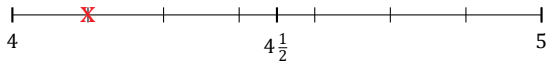
5. $5\frac{4}{11} \approx 5\frac{1}{2}$



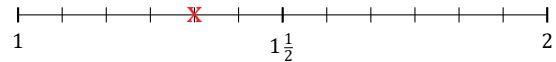
6. $5\frac{7}{10} \approx 5\frac{1}{2}$



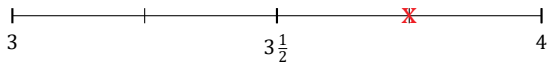
7. $4\frac{1}{7} \approx 4$



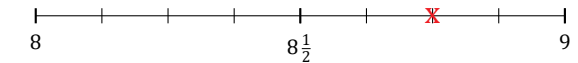
8. $1\frac{4}{12} \approx 1\frac{1}{2}$



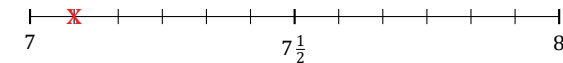
9. $3\frac{3}{4} \approx 4$



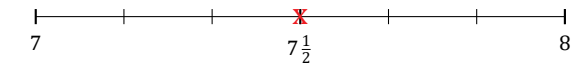
10. $8\frac{6}{8} \approx 9$



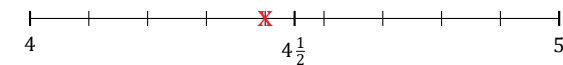
11. $7\frac{1}{12} \approx 7$



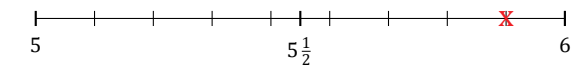
12. $7\frac{3}{6} \approx 7\frac{1}{2}$



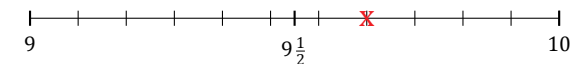
13. $4\frac{4}{9} \approx 4\frac{1}{2}$



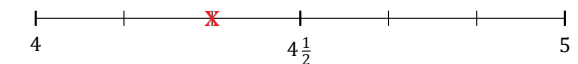
14. $5\frac{8}{9} \approx 6$



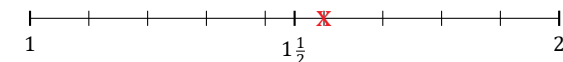
15. $9\frac{7}{11} \approx 9\frac{1}{2}$



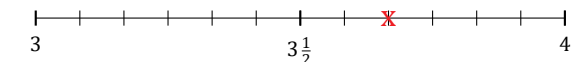
16. $4\frac{2}{6} \approx 4\frac{1}{2}$



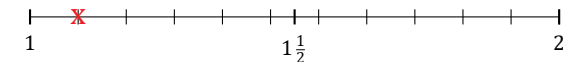
17. $1\frac{5}{9} \approx 1\frac{1}{2}$



18. $3\frac{8}{12} \approx 3\frac{1}{2}$



19. $1\frac{1}{11} \approx 1$



20. $5\frac{2}{4} \approx 5\frac{1}{2}$

