

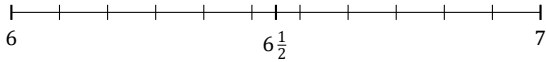
Rounding Mixed Numbers (B)

Name: _____

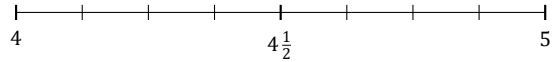
Date: _____

Round each mixed number to the nearest half. Round up if it's a tie.

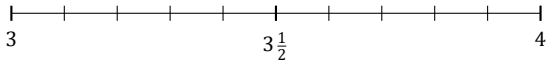
1. $6\frac{9}{11} \approx$



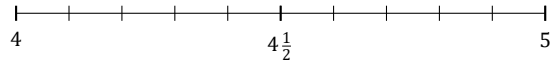
2. $4\frac{3}{8} \approx$



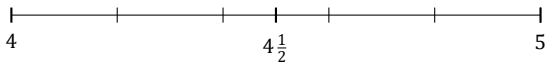
3. $3\frac{6}{10} \approx$



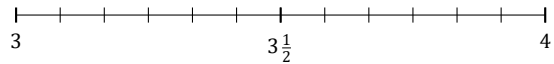
4. $4\frac{3}{10} \approx$



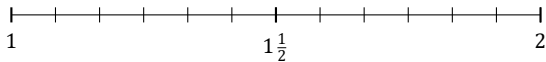
5. $4\frac{1}{5} \approx$



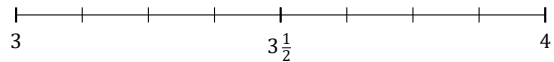
6. $3\frac{7}{12} \approx$



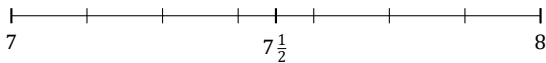
7. $1\frac{9}{12} \approx$



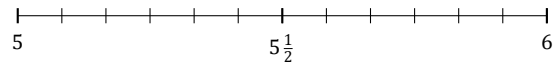
8. $3\frac{4}{8} \approx$



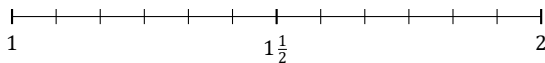
9. $7\frac{3}{7} \approx$



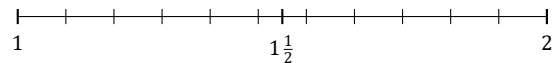
10. $5\frac{4}{12} \approx$



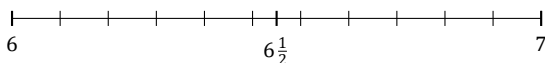
11. $1\frac{10}{12} \approx$



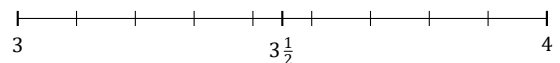
12. $1\frac{7}{11} \approx$



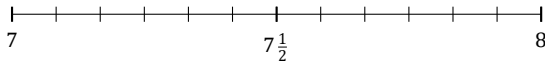
13. $6\frac{10}{11} \approx$



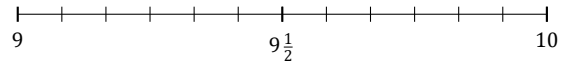
14. $3\frac{8}{9} \approx$



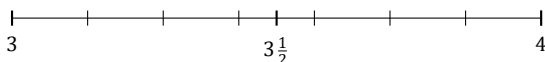
15. $7\frac{2}{12} \approx$



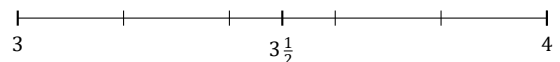
16. $9\frac{8}{12} \approx$



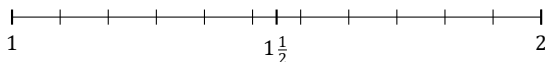
17. $3\frac{4}{7} \approx$



18. $3\frac{4}{5} \approx$



19. $1\frac{5}{11} \approx$



20. $2\frac{1}{11} \approx$

