

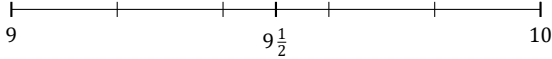
# Rounding Mixed Numbers (A)

Name: \_\_\_\_\_

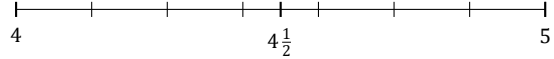
Date: \_\_\_\_\_

Round each mixed number to the nearest half. Round up if it's a tie.

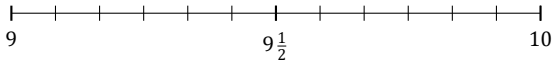
1.  $9\frac{4}{5} \approx$



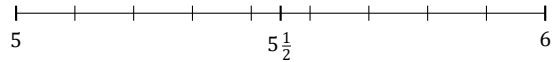
2.  $4\frac{6}{7} \approx$



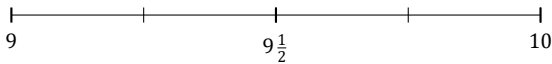
3.  $9\frac{3}{12} \approx$



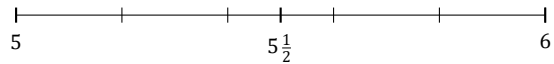
4.  $5\frac{7}{9} \approx$



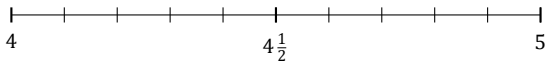
5.  $9\frac{2}{4} \approx$



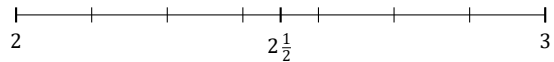
6.  $5\frac{2}{5} \approx$



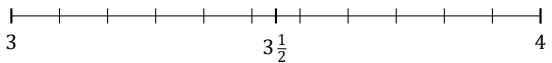
7.  $4\frac{7}{10} \approx$



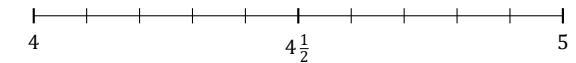
8.  $2\frac{4}{7} \approx$



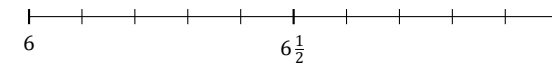
9.  $3\frac{5}{11} \approx$



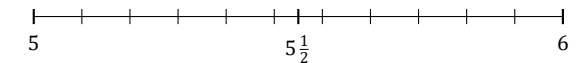
10.  $4\frac{4}{10} \approx$



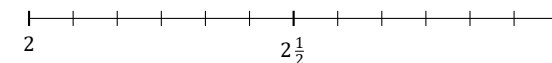
11.  $6\frac{9}{10} \approx$



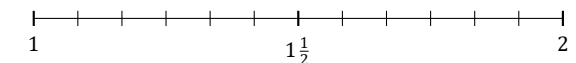
12.  $5\frac{8}{11} \approx$



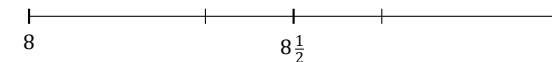
13.  $2\frac{9}{12} \approx$



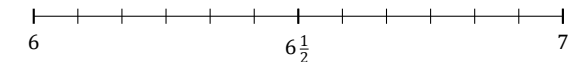
14.  $1\frac{10}{12} \approx$



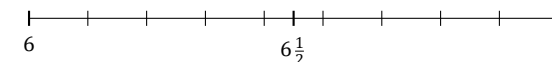
15.  $8\frac{2}{3} \approx$



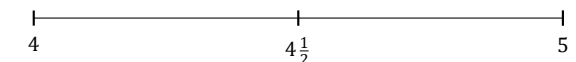
16.  $6\frac{1}{12} \approx$



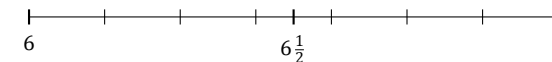
17.  $6\frac{5}{9} \approx$



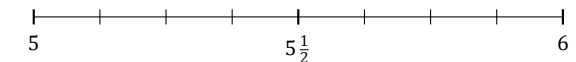
18.  $4\frac{1}{2} \approx$



19.  $6\frac{3}{7} \approx$



20.  $5\frac{7}{8} \approx$



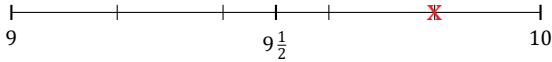
# Rounding Mixed Numbers (A) Answers

Name: \_\_\_\_\_

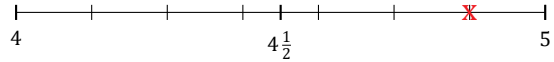
Date: \_\_\_\_\_

Round each mixed number to the nearest half. Round up if it's a tie.

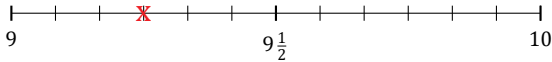
1.  $9\frac{4}{5} \simeq 10$



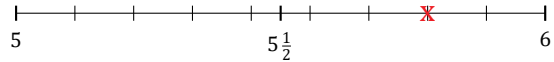
2.  $4\frac{6}{7} \simeq 5$



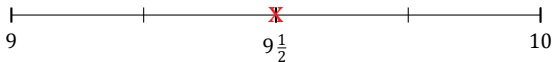
3.  $9\frac{3}{12} \simeq 9\frac{1}{2}$



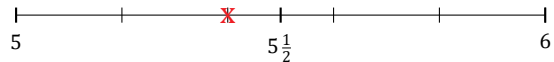
4.  $5\frac{7}{9} \simeq 6$



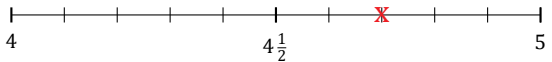
5.  $9\frac{2}{4} \simeq 9\frac{1}{2}$



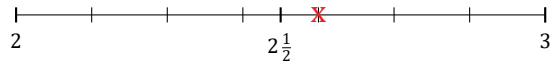
6.  $5\frac{2}{5} \simeq 5\frac{1}{2}$



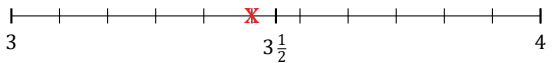
7.  $4\frac{7}{10} \simeq 4\frac{1}{2}$



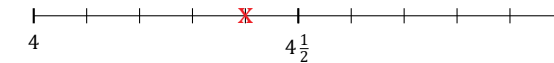
8.  $2\frac{4}{7} \simeq 2\frac{1}{2}$



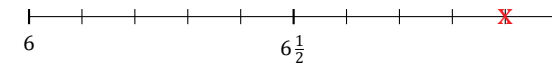
9.  $3\frac{5}{11} \simeq 3\frac{1}{2}$



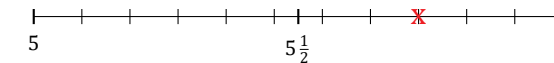
10.  $4\frac{4}{10} \simeq 4\frac{1}{2}$



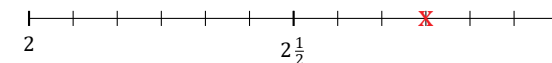
11.  $6\frac{9}{10} \simeq 7$



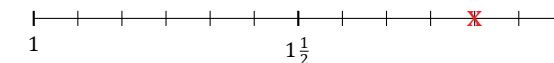
12.  $5\frac{8}{11} \simeq 5\frac{1}{2}$



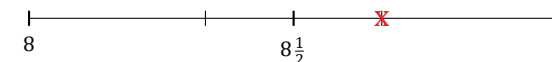
13.  $2\frac{9}{12} \simeq 3$



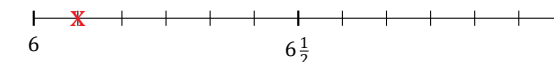
14.  $1\frac{10}{12} \simeq 2$



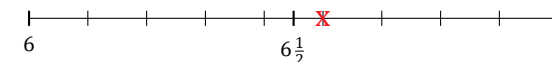
15.  $8\frac{2}{3} \simeq 8\frac{1}{2}$



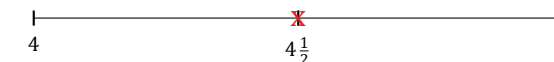
16.  $6\frac{1}{12} \simeq 6$



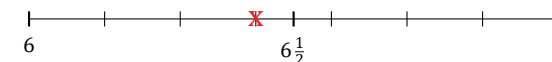
17.  $6\frac{5}{9} \simeq 6\frac{1}{2}$



18.  $4\frac{1}{2} \simeq 4\frac{1}{2}$



19.  $6\frac{3}{7} \simeq 6\frac{1}{2}$



20.  $5\frac{7}{8} \simeq 6$

