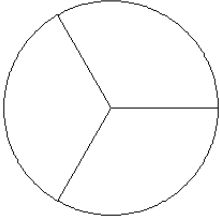


Fraction Models (J)

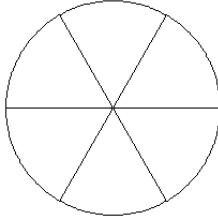
Color sections of each circle to model each fraction.

1.



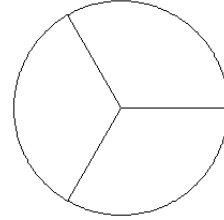
$$\frac{3}{3}$$

2.



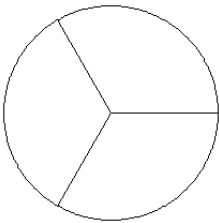
$$\frac{2}{6}$$

3.



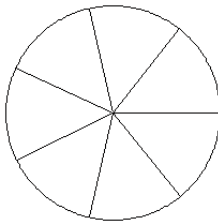
$$\frac{1}{3}$$

4.



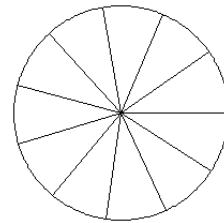
$$\frac{1}{3}$$

5.



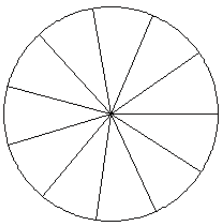
$$\frac{3}{7}$$

6.



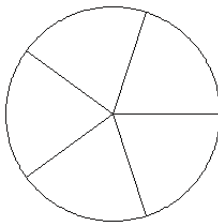
$$\frac{3}{11}$$

7.



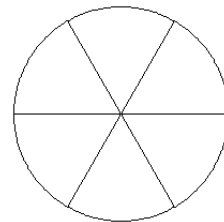
$$\frac{8}{11}$$

8.



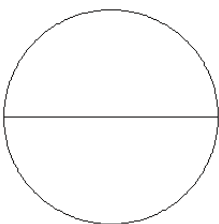
$$\frac{1}{5}$$

9.



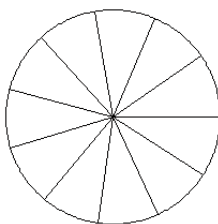
$$\frac{1}{6}$$

10.



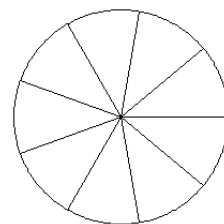
$$\frac{1}{2}$$

11.



$$\frac{5}{11}$$

12.

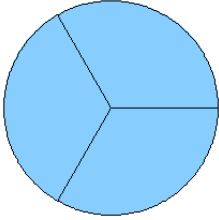


$$\frac{5}{9}$$

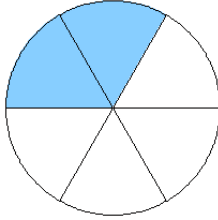
Fraction Models (J) Answers

Color sections of each circle to model each fraction.

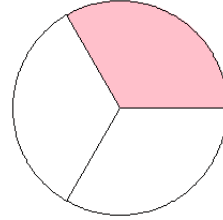
1.



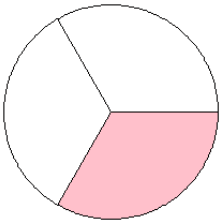
2.



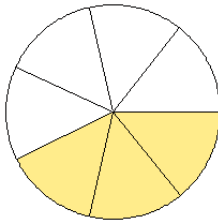
3.



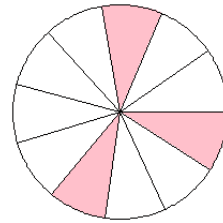
4.



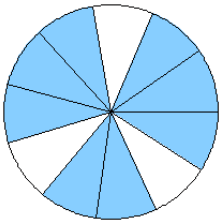
5.



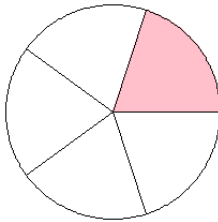
6.



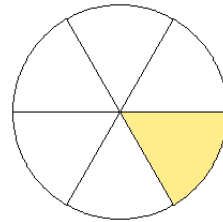
7.



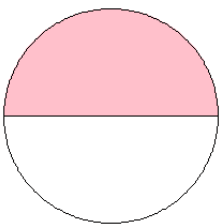
8.



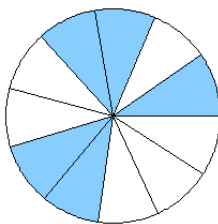
9.



10.



11.



12.

