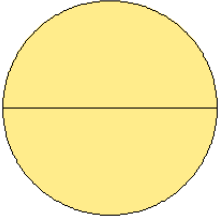


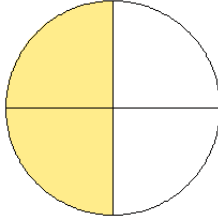
Fraction Models (H)

What fraction is shown in each model?

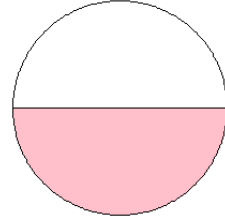
1.



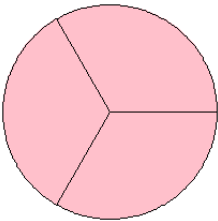
2.



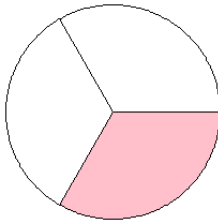
3.



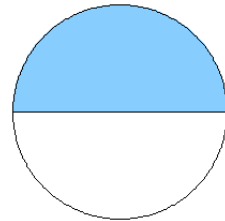
4.



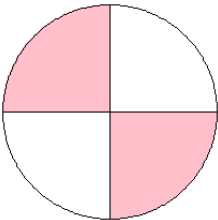
5.



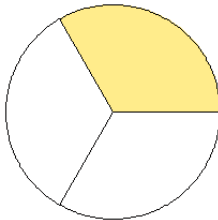
6.



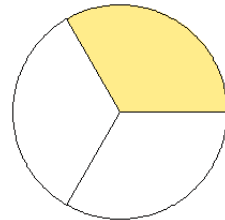
7.



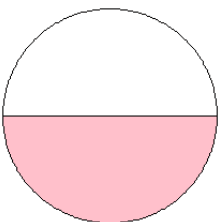
8.



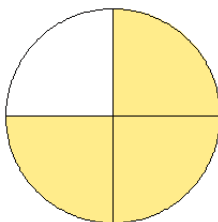
9.



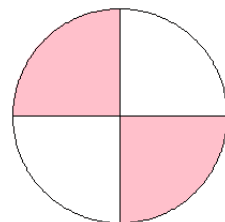
10.



11.



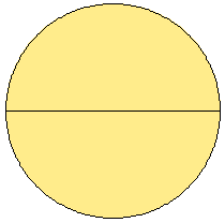
12.



Fraction Models (H) Answers

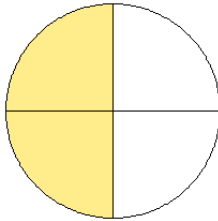
What fraction is shown in each model?

1.



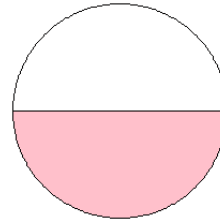
$$= \frac{2}{2}$$

2.



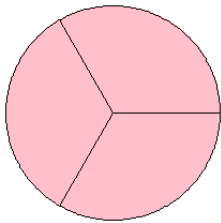
$$= \frac{2}{4}$$

3.



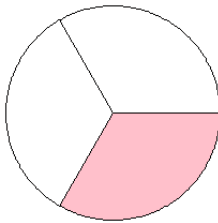
$$= \frac{1}{2}$$

4.



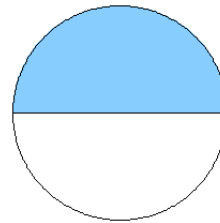
$$= \frac{3}{3}$$

5.



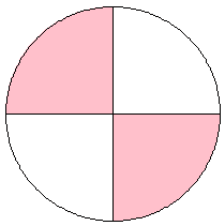
$$= \frac{1}{3}$$

6.



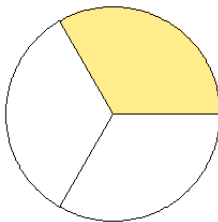
$$= \frac{1}{2}$$

7.



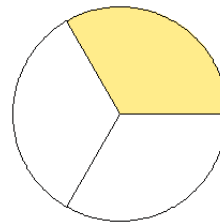
$$= \frac{2}{4}$$

8.



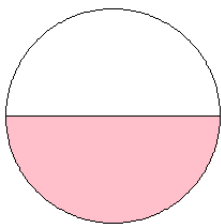
$$= \frac{1}{3}$$

9.



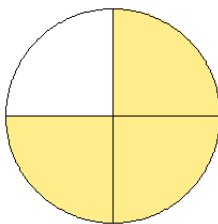
$$= \frac{1}{3}$$

10.



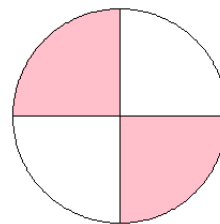
$$= \frac{1}{2}$$

11.



$$= \frac{3}{4}$$

12.



$$= \frac{2}{4}$$