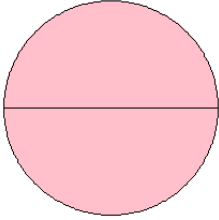


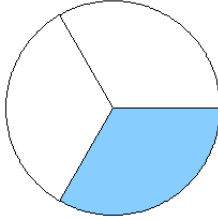
# Fraction Models (E)

What fraction is shown in each model?

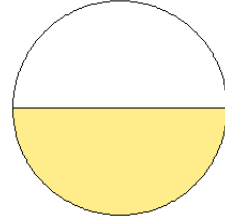
1.



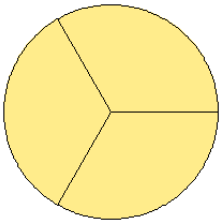
2.



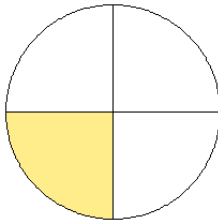
3.



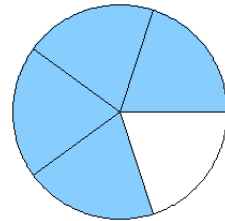
4.



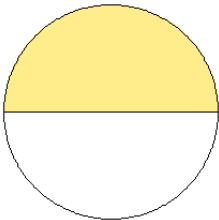
5.



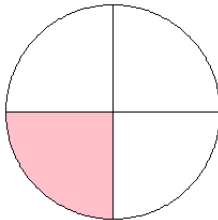
6.



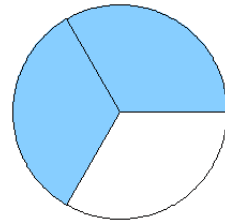
7.



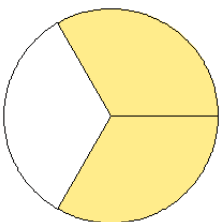
8.



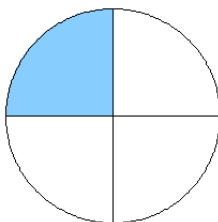
9.



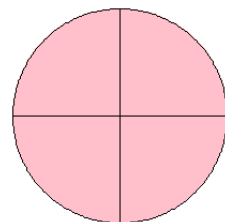
10.



11.



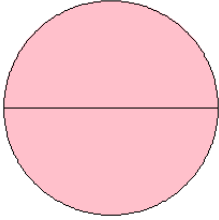
12.



# Fraction Models (E) Answers

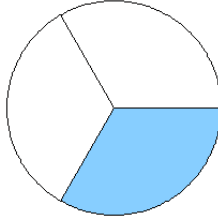
What fraction is shown in each model?

1.



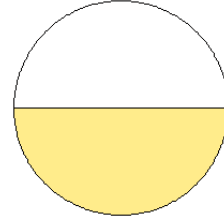
$$= \frac{2}{2}$$

2.



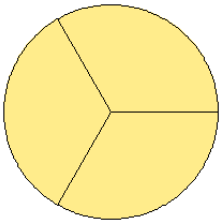
$$= \frac{1}{3}$$

3.



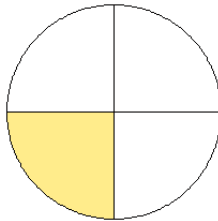
$$= \frac{1}{2}$$

4.



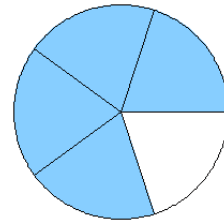
$$= \frac{3}{3}$$

5.



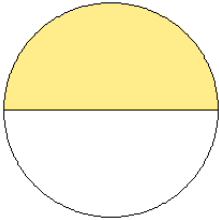
$$= \frac{1}{4}$$

6.



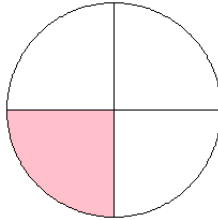
$$= \frac{4}{5}$$

7.



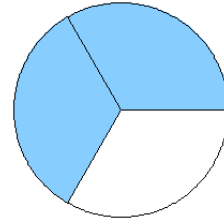
$$= \frac{1}{2}$$

8.



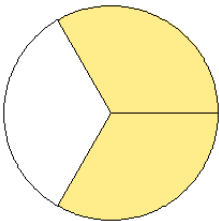
$$= \frac{1}{4}$$

9.



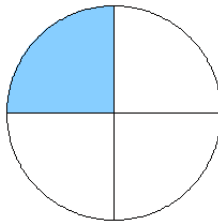
$$= \frac{2}{3}$$

10.



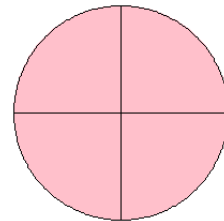
$$= \frac{2}{3}$$

11.



$$= \frac{1}{4}$$

12.



$$= \frac{4}{4}$$