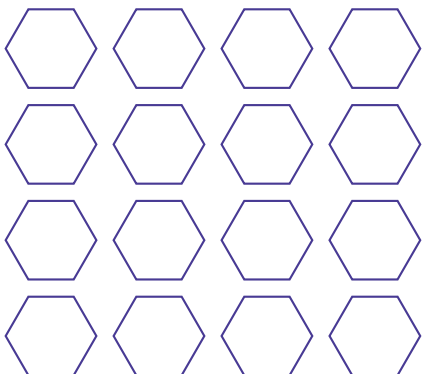


# Coloring Fractions (G)

Color each group of shapes to represent each fraction.


1.

$$\frac{3}{4}$$




2.

$$\frac{1}{4}$$



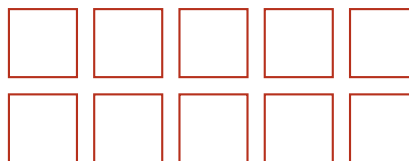
3.

$$\frac{2}{3}$$




4.

$$\frac{1}{2}$$



5.

$$\frac{1}{3}$$



6.

$$\frac{2}{3}$$

