



Modeling Fourths (C)


Instructions: Write the correct numerator.




$$\frac{4}{4}$$




$$\frac{3}{4}$$



$$\frac{2}{4}$$




$$\frac{3}{4}$$



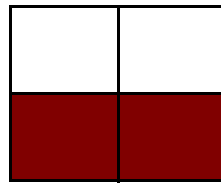
$$\frac{4}{4}$$



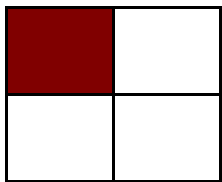
$$\frac{4}{4}$$



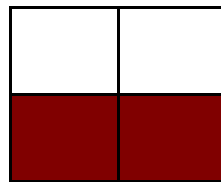
$$\frac{3}{4}$$



$$\frac{2}{4}$$



$$\frac{1}{4}$$



$$\frac{2}{4}$$



$$\frac{2}{4}$$



$$\frac{4}{4}$$