



Modeling Fifths (A)

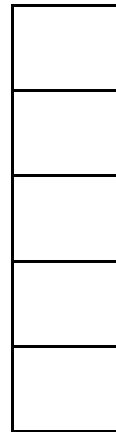
Instructions: Model the fraction by coloring or shading. Try coloring similar fractions in different ways.




$$\frac{2}{5}$$




$$\frac{3}{5}$$



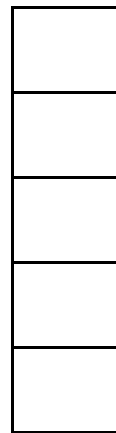
$$\frac{3}{5}$$




$$\frac{3}{5}$$




$$\frac{4}{5}$$



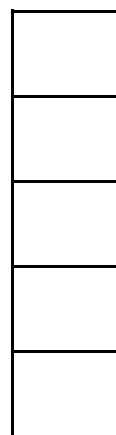
$$\frac{1}{5}$$



$$\frac{3}{5}$$



$$\frac{1}{5}$$



$$\frac{2}{5}$$