
The Easter Basket - (A)

Instruction : First, answer each question. Second, draw a bunny beside each even answer and a candy beside each odd answer.

	4
+	1

	6
÷	3

	0
+	1

	9
-	1

	8
÷	2

	9
-	2

	7
-	6

	2
x	3

	9
÷	3

	4
+	5



- How many candies were in the baskets?
How many bunnies were in the baskets?
Were there more candies or bunnies?
How many candies and bunnies were there all together?

The Easter Basket - (A) Answers

Instruction : First, answer each question. Second, draw a bunny beside each even answer and a candy beside each odd answer.

4
+ 1
5

6
÷ 3
2

0
+ 1
1

9
- 1
8

8
÷ 2
4


9
- 2
7

7
- 6
1

2
x 3
6

9
÷ 3
3

4
+ 5
9



- How many candies were in the baskets? 6
- How many bunnies were in the baskets? 4
- Were there more candies or bunnies? candies
- How many candies and bunnies were there all together? 10

The Easter Basket - (B)

Instruction : First, answer each question. Second, draw a bunny beside each even answer and a candy beside each odd answer.

	14
+	1

	18
÷	3

	19
+	1

	19
-	1

	18
÷	2


	13
-	2

	17
-	14

	8
x	2

	15
÷	3

	9
+	11



- How many candies were in the baskets?
How many bunnies were in the baskets?
Were there more candies or bunnies?
How many candies and bunnies were there all together?

The Easter Basket - (B) Answers

Instruction : First, answer each question. Second, draw a bunny beside each even answer and a candy beside each odd answer.

	14
+	1
	15

	18
÷	3
	6

	19
+	1
	20

	19
-	1
	18

	18
÷	2
	9


	13
-	2
	11

	17
-	14
	3

	8
x	2
	16

	15
÷	3
	5

	9
+	11
	20



- How many candies were in the baskets? 5
How many bunnies were in the baskets? 5
Were there more candies or bunnies? equal
How many candies and bunnies were there all together? 10

The Easter Basket - (C)

Instruction : Answer each question. Each even answer counts as 6 bunnies and each odd answer counts as 4 candies.

	24
+	13

	36
÷	4

	17
+	29

	39
-	21

	39
÷	13


	37
-	22

	50
-	39

	7
x	6

	34
÷	17

	29
+	17



- How many candies were in the baskets?
How many bunnies were in the baskets?
Were there more candies or bunnies?
How many candies and bunnies were there all together?

The Easter Basket - (C) Answers

Instruction : Answer each question. Each even answer counts as 6 bunnies and each odd answer counts as 4 candies.

	24
+	13
	37

	36
÷	4
	9

	17
+	29
	46

	39
-	21
	18

	39
÷	13
	3


	37
-	22
	15

	50
-	39
	11

	7
x	6
	42

	34
÷	17
	2

	29
+	17
	46



- How many candies were in the baskets? 20
How many bunnies were in the baskets? 30
Were there more candies or bunnies? bunnies
How many candies and bunnies were there all together? 50

The Easter Basket - (D)

Instruction : Answer each question. Each even answer counts as 12 bunnies and each odd answer counts as 7 candies.

	39
+	24

	76
÷	19

	41
+	34

	59
-	39

	81
÷	27


	37
-	22

	57
-	19

	39
x	2

	92
÷	23

	79
+	17



- How many candies were in the baskets?
How many bunnies were in the baskets?
Were there more candies or bunnies?
How many candies and bunnies were there all together?

The Easter Basket - (D) Answers

Instruction : Answer each question. Each even answer counts as 12 bunnies and each odd answer counts as 7 candies.

	39
+	24
	63

	76
÷	19
	4

	41
+	34
	75

	59
-	39
	20

	81
÷	27
	3


	37
-	22
	15

	57
-	19
	38

	39
x	2
	78

	92
÷	23
	4

	79
+	17
	96



- | | |
|---|---------|
| How many candies were in the baskets? | 28 |
| How many bunnies were in the baskets? | 72 |
| Were there more candies or bunnies? | bunnies |
| How many candies and bunnies were there all together? | 100 |

The Easter Basket - (E)

Instruction : Answer each question. Each even answer counts as 39 bunnies and each odd answer counts as 157 candies.

	435
+	325

	916
÷	229

	324
+	355

	987
-	649

	876
÷	73


	875
-	799

	981
-	197

	79
x	12

	897
÷	13

	574
+	399



- How many candies were in the baskets?
How many bunnies were in the baskets?
Were there more candies or bunnies?
How many candies and bunnies were there all together?

The Easter Basket - (E) Answers

Instruction : Answer each question. Each even answer counts as 39 bunnies and each odd answer counts as 157 candies.

	435
+	325
	760

	916
÷	229
	4

	324
+	355
	679

	987
-	649
	338

	876
÷	73
	12


	875
-	799
	76

	981
-	197
	784

	79
x	12
	948

	897
÷	13
	69

	574
+	399
	973



- How many candies were in the baskets? 471
How many bunnies were in the baskets? 273
Were there more candies or bunnies? candies
How many candies and bunnies were there all together? 744