



# Easter Eggs in a Basket (E)


Put Easter eggs with sums greater than 25 in the basket.



$$\begin{array}{r} 20 \\ + 7 \\ \hline \end{array}$$



$$\begin{array}{r} 14 \\ + 12 \\ \hline \end{array}$$



$$\begin{array}{r} 10 \\ + 23 \\ \hline \end{array}$$



$$\begin{array}{r} 16 \\ + 4 \\ \hline \end{array}$$



$$\begin{array}{r} 10 \\ + 24 \\ \hline \end{array}$$


$$\begin{array}{r} 16 \\ + 25 \\ \hline \end{array}$$



$$\begin{array}{r} 14 \\ + 12 \\ \hline \end{array}$$



$$\begin{array}{r} 21 \\ + 19 \\ \hline \end{array}$$



$$\begin{array}{r} 5 \\ + 12 \\ \hline \end{array}$$



$$\begin{array}{r} 18 \\ + 13 \\ \hline \end{array}$$



$$\begin{array}{r} 24 \\ + 18 \\ \hline \end{array}$$



$$\begin{array}{r} 22 \\ + 11 \\ \hline \end{array}$$



$$\begin{array}{r} 2 \\ + 3 \\ \hline \end{array}$$



$$\begin{array}{r} 5 \\ + 15 \\ \hline \end{array}$$



$$\begin{array}{r} 13 \\ + 11 \\ \hline \end{array}$$


$$\begin{array}{r} 22 \\ + 15 \\ \hline \end{array}$$


$$\begin{array}{r} 6 \\ + 25 \\ \hline \end{array}$$


$$\begin{array}{r} 23 \\ + 22 \\ \hline \end{array}$$


$$\begin{array}{r} 4 \\ + 20 \\ \hline \end{array}$$



$$\begin{array}{r} 16 \\ + 4 \\ \hline \end{array}$$





How many Easter eggs go in the basket?


# Easter Eggs in a Basket (E) Answers


Put Easter eggs with sums greater than 25 in the basket.



$$\begin{array}{r} 20 \\ + 7 \\ \hline 27 \end{array}$$



$$\begin{array}{r} 14 \\ + 12 \\ \hline 26 \end{array}$$



$$\begin{array}{r} 10 \\ + 23 \\ \hline 33 \end{array}$$



$$\begin{array}{r} 16 \\ + 4 \\ \hline 20 \end{array}$$



$$\begin{array}{r} 10 \\ + 24 \\ \hline 34 \end{array}$$



$$\begin{array}{r} 16 \\ + 25 \\ \hline 41 \end{array}$$



$$\begin{array}{r} 14 \\ + 12 \\ \hline 26 \end{array}$$



$$\begin{array}{r} 21 \\ + 19 \\ \hline 40 \end{array}$$



$$\begin{array}{r} 5 \\ + 12 \\ \hline 17 \end{array}$$



$$\begin{array}{r} 18 \\ + 13 \\ \hline 31 \end{array}$$



$$\begin{array}{r} 24 \\ + 18 \\ \hline 42 \end{array}$$



$$\begin{array}{r} 22 \\ + 11 \\ \hline 33 \end{array}$$



$$\begin{array}{r} 2 \\ + 3 \\ \hline 5 \end{array}$$



$$\begin{array}{r} 5 \\ + 15 \\ \hline 20 \end{array}$$



$$\begin{array}{r} 13 \\ + 11 \\ \hline 24 \end{array}$$


$$\begin{array}{r} 22 \\ + 15 \\ \hline 37 \end{array}$$


$$\begin{array}{r} 6 \\ + 25 \\ \hline 31 \end{array}$$


$$\begin{array}{r} 23 \\ + 22 \\ \hline 45 \end{array}$$


$$\begin{array}{r} 4 \\ + 20 \\ \hline 24 \end{array}$$


$$\begin{array}{r} 16 \\ + 4 \\ \hline 20 \end{array}$$



How many Easter eggs go in the basket?

13