



Easter Eggs in a Basket (A)


Put Easter eggs with sums greater than 999 in the basket.



$$\begin{array}{r} 280 \\ + 764 \\ \hline \end{array}$$


$$\begin{array}{r} 272 \\ + 746 \\ \hline \end{array}$$



$$\begin{array}{r} 507 \\ + 197 \\ \hline \end{array}$$



$$\begin{array}{r} 411 \\ + 101 \\ \hline \end{array}$$


$$\begin{array}{r} 325 \\ + 707 \\ \hline \end{array}$$



$$\begin{array}{r} 887 \\ + 216 \\ \hline \end{array}$$


$$\begin{array}{r} 583 \\ + 944 \\ \hline \end{array}$$



$$\begin{array}{r} 466 \\ + 460 \\ \hline \end{array}$$



$$\begin{array}{r} 758 \\ + 961 \\ \hline \end{array}$$


$$\begin{array}{r} 515 \\ + 504 \\ \hline \end{array}$$



$$\begin{array}{r} 231 \\ + 767 \\ \hline \end{array}$$



$$\begin{array}{r} 196 \\ + 849 \\ \hline \end{array}$$



$$\begin{array}{r} 633 \\ + 316 \\ \hline \end{array}$$



$$\begin{array}{r} 207 \\ + 965 \\ \hline \end{array}$$


$$\begin{array}{r} 790 \\ + 473 \\ \hline \end{array}$$


$$\begin{array}{r} 797 \\ + 295 \\ \hline \end{array}$$


$$\begin{array}{r} 132 \\ + 445 \\ \hline \end{array}$$


$$\begin{array}{r} 633 \\ + 965 \\ \hline \end{array}$$


$$\begin{array}{r} 638 \\ + 804 \\ \hline \end{array}$$


$$\begin{array}{r} 464 \\ + 356 \\ \hline \end{array}$$



How many Easter eggs go in the basket?