




# Easter Eggs in a Basket (A)

Put Easter eggs with sums greater than 999 in the basket.



$$\begin{array}{r} 280 \\ + 764 \\ \hline \end{array}$$



$$\begin{array}{r} 272 \\ + 746 \\ \hline \end{array}$$



$$\begin{array}{r} 507 \\ + 197 \\ \hline \end{array}$$



$$\begin{array}{r} 411 \\ + 101 \\ \hline \end{array}$$



$$\begin{array}{r} 325 \\ + 707 \\ \hline \end{array}$$



$$\begin{array}{r} 887 \\ + 216 \\ \hline \end{array}$$



$$\begin{array}{r} 583 \\ + 944 \\ \hline \end{array}$$



$$\begin{array}{r} 466 \\ + 460 \\ \hline \end{array}$$



$$\begin{array}{r} 758 \\ + 961 \\ \hline \end{array}$$


$$\begin{array}{r} 515 \\ + 504 \\ \hline \end{array}$$



$$\begin{array}{r} 231 \\ + 767 \\ \hline \end{array}$$



$$\begin{array}{r} 196 \\ + 849 \\ \hline \end{array}$$



$$\begin{array}{r} 633 \\ + 316 \\ \hline \end{array}$$



$$\begin{array}{r} 207 \\ + 965 \\ \hline \end{array}$$


$$\begin{array}{r} 790 \\ + 473 \\ \hline \end{array}$$


$$\begin{array}{r} 797 \\ + 295 \\ \hline \end{array}$$


$$\begin{array}{r} 132 \\ + 445 \\ \hline \end{array}$$


$$\begin{array}{r} 633 \\ + 965 \\ \hline \end{array}$$


$$\begin{array}{r} 638 \\ + 804 \\ \hline \end{array}$$



$$\begin{array}{r} 464 \\ + 356 \\ \hline \end{array}$$




How many Easter eggs go in the basket?


# Easter Eggs in a Basket (A) Answers


Put Easter eggs with sums greater than 999 in the basket.


$$\begin{array}{r} 280 \\ + 764 \\ \hline 1044 \end{array}$$


$$\begin{array}{r} 272 \\ + 746 \\ \hline 1018 \end{array}$$


$$\begin{array}{r} 507 \\ + 197 \\ \hline 704 \end{array}$$


$$\begin{array}{r} 411 \\ + 101 \\ \hline 512 \end{array}$$



$$\begin{array}{r} 325 \\ + 707 \\ \hline 1032 \end{array}$$



$$\begin{array}{r} 887 \\ + 216 \\ \hline 1103 \end{array}$$



$$\begin{array}{r} 583 \\ + 944 \\ \hline 1527 \end{array}$$



$$\begin{array}{r} 466 \\ + 460 \\ \hline 926 \end{array}$$


$$\begin{array}{r} 758 \\ + 961 \\ \hline 1719 \end{array}$$



$$\begin{array}{r} 515 \\ + 504 \\ \hline 1019 \end{array}$$



$$\begin{array}{r} 231 \\ + 767 \\ \hline 998 \end{array}$$



$$\begin{array}{r} 196 \\ + 849 \\ \hline 1045 \end{array}$$



$$\begin{array}{r} 633 \\ + 316 \\ \hline 949 \end{array}$$


$$\begin{array}{r} 207 \\ + 965 \\ \hline 1172 \end{array}$$



$$\begin{array}{r} 790 \\ + 473 \\ \hline 1263 \end{array}$$


$$\begin{array}{r} 797 \\ + 295 \\ \hline 1092 \end{array}$$


$$\begin{array}{r} 132 \\ + 445 \\ \hline 577 \end{array}$$


$$\begin{array}{r} 633 \\ + 965 \\ \hline 1598 \end{array}$$


$$\begin{array}{r} 638 \\ + 804 \\ \hline 1442 \end{array}$$


$$\begin{array}{r} 464 \\ + 356 \\ \hline 820 \end{array}$$



How many Easter eggs go in the basket?

13