





Easter Eggs in a Basket (G)


Put Easter eggs with sums greater than 9 in the basket.



$$\begin{array}{r} 4 \\ + 2 \\ \hline \end{array}$$



$$\begin{array}{r} 8 \\ + 4 \\ \hline \end{array}$$


$$\begin{array}{r} 9 \\ + 6 \\ \hline \end{array}$$


$$\begin{array}{r} 9 \\ + 4 \\ \hline \end{array}$$


$$\begin{array}{r} 3 \\ + 3 \\ \hline \end{array}$$


$$\begin{array}{r} 2 \\ + 9 \\ \hline \end{array}$$


$$\begin{array}{r} 5 \\ + 5 \\ \hline \end{array}$$


$$\begin{array}{r} 3 \\ + 1 \\ \hline \end{array}$$


$$\begin{array}{r} 6 \\ + 1 \\ \hline \end{array}$$


$$\begin{array}{r} 1 \\ + 2 \\ \hline \end{array}$$



$$\begin{array}{r} 5 \\ + 6 \\ \hline \end{array}$$



$$\begin{array}{r} 7 \\ + 7 \\ \hline \end{array}$$



$$\begin{array}{r} 9 \\ + 7 \\ \hline \end{array}$$



$$\begin{array}{r} 6 \\ + 6 \\ \hline \end{array}$$


$$\begin{array}{r} 9 \\ + 5 \\ \hline \end{array}$$


$$\begin{array}{r} 1 \\ + 6 \\ \hline \end{array}$$


$$\begin{array}{r} 9 \\ + 4 \\ \hline \end{array}$$


$$\begin{array}{r} 8 \\ + 6 \\ \hline \end{array}$$


$$\begin{array}{r} 3 \\ + 7 \\ \hline \end{array}$$


$$\begin{array}{r} 9 \\ + 3 \\ \hline \end{array}$$



How many Easter eggs go in the basket?