




Easter Eggs in a Basket (D)


Put Easter eggs with sums greater than 9 in the basket.



$$\begin{array}{r} 3 \\ + 6 \\ \hline \end{array}$$



$$\begin{array}{r} 4 \\ + 4 \\ \hline \end{array}$$


$$\begin{array}{r} 4 \\ + 3 \\ \hline \end{array}$$


$$\begin{array}{r} 6 \\ + 7 \\ \hline \end{array}$$


$$\begin{array}{r} 8 \\ + 6 \\ \hline \end{array}$$



$$\begin{array}{r} 9 \\ + 3 \\ \hline \end{array}$$


$$\begin{array}{r} 5 \\ + 4 \\ \hline \end{array}$$



$$\begin{array}{r} 4 \\ + 6 \\ \hline \end{array}$$


$$\begin{array}{r} 6 \\ + 3 \\ \hline \end{array}$$



$$\begin{array}{r} 9 \\ + 9 \\ \hline \end{array}$$



$$\begin{array}{r} 9 \\ + 1 \\ \hline \end{array}$$



$$\begin{array}{r} 9 \\ + 8 \\ \hline \end{array}$$



$$\begin{array}{r} 5 \\ + 6 \\ \hline \end{array}$$



$$\begin{array}{r} 9 \\ + 1 \\ \hline \end{array}$$


$$\begin{array}{r} 4 \\ + 1 \\ \hline \end{array}$$


$$\begin{array}{r} 3 \\ + 8 \\ \hline \end{array}$$


$$\begin{array}{r} 6 \\ + 6 \\ \hline \end{array}$$


$$\begin{array}{r} 2 \\ + 9 \\ \hline \end{array}$$


$$\begin{array}{r} 1 \\ + 9 \\ \hline \end{array}$$



$$\begin{array}{r} 6 \\ + 3 \\ \hline \end{array}$$





How many Easter eggs go in the basket?


Easter Eggs in a Basket (D) Answers


Put Easter eggs with sums greater than 9 in the basket.



$$\begin{array}{r} 3 \\ + 6 \\ \hline 9 \end{array}$$



$$\begin{array}{r} 4 \\ + 4 \\ \hline 8 \end{array}$$



$$\begin{array}{r} 4 \\ + 3 \\ \hline 7 \end{array}$$



$$\begin{array}{r} 6 \\ + 7 \\ \hline 13 \end{array}$$



$$\begin{array}{r} 8 \\ + 6 \\ \hline 14 \end{array}$$



$$\begin{array}{r} 9 \\ + 3 \\ \hline 12 \end{array}$$



$$\begin{array}{r} 5 \\ + 4 \\ \hline 9 \end{array}$$



$$\begin{array}{r} 4 \\ + 6 \\ \hline 10 \end{array}$$



$$\begin{array}{r} 6 \\ + 3 \\ \hline 9 \end{array}$$



$$\begin{array}{r} 9 \\ + 9 \\ \hline 18 \end{array}$$



$$\begin{array}{r} 9 \\ + 1 \\ \hline 10 \end{array}$$



$$\begin{array}{r} 9 \\ + 8 \\ \hline 17 \end{array}$$



$$\begin{array}{r} 5 \\ + 6 \\ \hline 11 \end{array}$$



$$\begin{array}{r} 9 \\ + 1 \\ \hline 10 \end{array}$$



$$\begin{array}{r} 4 \\ + 1 \\ \hline 5 \end{array}$$


$$\begin{array}{r} 3 \\ + 8 \\ \hline 11 \end{array}$$


$$\begin{array}{r} 6 \\ + 6 \\ \hline 12 \end{array}$$


$$\begin{array}{r} 2 \\ + 9 \\ \hline 11 \end{array}$$


$$\begin{array}{r} 1 \\ + 9 \\ \hline 10 \end{array}$$


$$\begin{array}{r} 6 \\ + 3 \\ \hline 9 \end{array}$$



How many Easter eggs go in the basket?

13