

# Easter Rabbit Frequencies (I)






Name: \_\_\_\_\_

Date: \_\_\_\_\_

Score: \_\_\_\_\_

Determine the frequency, relative frequency and percentage (one place) of each item.



Item	Frequency	Relative Frequency	Percentage
			
			
			
			
			

# Easter Rabbit Frequencies (I) Answers

Name: \_\_\_\_\_

Date: \_\_\_\_\_

Score: \_\_\_\_\_

Determine the frequency, relative frequency and percentage (one place) of each item.



Item	Frequency	Relative Frequency	Percentage
	49	$\frac{49}{180}$	27.2%
	27	$\frac{27}{180} = \frac{3}{20}$	15%
	31	$\frac{31}{180}$	17.2%
	54	$\frac{54}{180} = \frac{3}{10}$	30%
	19	$\frac{19}{180}$	10.6%