

Easter Rabbit Frequencies (D)






Name: _____

Date: _____

Score: _____

Determine the frequency, relative frequency and percentage (one place) of each item.



Item	Frequency	Relative Frequency	Percentage
			
			
			
			
			


Easter Rabbit Frequencies (D) Answers






Name: _____

Date: _____

Score: _____

Determine the frequency, relative frequency and percentage (one place) of each item.



Item	Frequency	Relative Frequency	Percentage
	40	$\frac{40}{180} = \frac{2}{9}$	22.2%
	39	$\frac{39}{180} = \frac{13}{60}$	21.7%
	31	$\frac{31}{180}$	17.2%
	28	$\frac{28}{180} = \frac{7}{45}$	15.6%
	42	$\frac{42}{180} = \frac{7}{30}$	23.3%