

# Easter Rabbit Frequencies (C)






Name: \_\_\_\_\_

Date: \_\_\_\_\_

Score: \_\_\_\_\_

Determine the frequency, relative frequency and percentage (one place) of each item.



Item	Frequency	Relative Frequency	Percentage
			
			
			
			
			

# Easter Rabbit Frequencies (C) Answers

Name: \_\_\_\_\_

Date: \_\_\_\_\_

Score: \_\_\_\_\_

Determine the frequency, relative frequency and percentage (one place) of each item.



Item	Frequency	Relative Frequency	Percentage
	28	$\frac{28}{180} = \frac{7}{45}$	15.6%
	23	$\frac{23}{180}$	12.8%
	9	$\frac{9}{180} = \frac{1}{20}$	5%
	69	$\frac{69}{180} = \frac{23}{60}$	38.3%
	51	$\frac{51}{180} = \frac{17}{60}$	28.3%