



Easter Egg Ratios (J)

Find the Easter egg ratio for each set of eggs.


1.  :  = :




2.  :  = :



3.  :  = :



4.  :  = :




Bonus: Simplify each ratio if necessary.

Happy Easter from Math-Drills.Com!



Easter Egg Ratios (J) Answers


Find the Easter egg ratio for each set of eggs.

1.  :  = 9 : 3




Simplified: 3 : 1

2.  :  = 23 : 33






Simplified: 23 : 33

3.  :  = 4 : 5



Simplified: 4 : 5

4.  :  = 9 : 11



Simplified: 9 : 11

Bonus: Simplify each ratio if necessary.

Happy Easter from Math-Drills.Com!