



# Easter Egg Ratios (E)

Find the Easter egg ratio for each set of eggs.


1.  :  =     :     




2.  :  =     :     



3.  :  =     :     



4.  :  =     :     





Bonus: Simplify each ratio if necessary.

Happy Easter from Math-Drills.Com!

# Easter Egg Ratios (E) Answers


Find the Easter egg ratio for each set of eggs.

1.  :  = 13 : 11






Simplified: 13 : 11

2.  :  = 5 : 10






Simplified: 1 : 2

3.  :  = 23 : 33



Simplified: 23 : 33

4.  :  = 10 : 10



Simplified: 1 : 1

Bonus: Simplify each ratio if necessary.

Happy Easter from Math-Drills.Com!