



Easter Egg Ratios (A)

Find the Easter egg ratio for each set of eggs.


1.  :  = : :




2.  :  = : :



3.  :  = : :



4.  :  = : :




Bonus: Simplify each ratio if necessary.

Happy Easter from Math-Drills.Com!

Easter Egg Ratios (A) Answers


Find the Easter egg ratio for each set of eggs.

1.  :  = 10 : 5






Simplified: 2 : 1

2.  :  = 16 : 9






Simplified: 16 : 9

3.  :  = 21 : 27



Simplified: 7 : 9

4.  :  = 20 : 16



Simplified: 5 : 4

Bonus: Simplify each ratio if necessary.

Happy Easter from Math-Drills.Com!