




















# Easter Egg Map (J)

What is the grid reference of each Easter egg?

	A	B	C	D	E	F	G	H	I
1									
2									
3									
4									
5									
6									
7									
8									
9									

How many Easter eggs are there?

\_\_\_\_\_

How many  Easter eggs are there?

\_\_\_\_\_

How many blanks are there?

\_\_\_\_\_

Happy Easter from Math-Drills.Com!

# Easter Egg Map (J) Answers

What is the grid reference of each Easter egg?

	A	B	C	D	E	F	G	H	I
1									
2						F2			I2
3	A3			D3					I3
4								H4	
5		B5				F5			
6	A6			D6			G6		
7		B7	C7			F7			I7
8	A8			D8		F8			
9							G9		

How many Easter eggs are there?

19

How many  Easter eggs are there?

3

How many blanks are there?

62

Happy Easter from Math-Drills.Com!