
















Easter Egg Map (G)

What is the grid reference of each Easter egg?

	A	B	C	D	E	F	G	H	I
1									
2									
3									
4									
5									
6									
7									
8									
9									

How many Easter eggs are there?

How many  Easter eggs are there?

How many blanks are there?

Happy Easter from Math-Drills.Com!

Easter Egg Map (G) Answers

What is the grid reference of each Easter egg?

	A	B	C	D	E	F	G	H	I
1						F1			
2			C2					H2	
3				D3					
4						F4		H4	
5			C5						
6		B6				F6		H6	
7				D7				H7	I7
8	A8		C8						
9									

How many Easter eggs are there?

15

How many  Easter eggs are there?

4

How many blanks are there?

66

Happy Easter from Math-Drills.Com!