


















Easter Egg Map (F)

What is the grid reference of each Easter egg?

	A	B	C	D	E	F	G	H	I
1									
2									
3									
4									
5									
6									
7									
8									
9									

How many Easter eggs are there?

How many  Easter eggs are there?

How many blanks are there?

Happy Easter from Math-Drills.Com!

Easter Egg Map (F) Answers

What is the grid reference of each Easter egg?

	A	B	C	D	E	F	G	H	I
1		B1			E1	F1		H1	
2									
3		B3							
4	A4							H4	I4
5			C5						I5
6								H6	I6
7			C7						
8			C8	D8					
9					E9				I9

How many Easter eggs are there?

17

How many  Easter eggs are there?

1

How many blanks are there?

64

Happy Easter from Math-Drills.Com!