

















Easter Egg Map (D)

What is the grid reference of each Easter egg?

	A	B	C	D	E	F	G	H	I
1									
2									
3									
4									
5									
6									
7									
8									
9									

How many Easter eggs are there?

How many  Easter eggs are there?

How many blanks are there?

Happy Easter from Math-Drills.Com!

Easter Egg Map (D) Answers

What is the grid reference of each Easter egg?

	A	B	C	D	E	F	G	H	I
1				D1	E1			H1	
2				D2	E2		G2	H2	I2
3							G3		
4					E4				I4
5				D5				H5	
6						F6	G6		
7									I7
8									
9									

How many Easter eggs are there?

16

How many  Easter eggs are there?

4

How many blanks are there?

65

Happy Easter from Math-Drills.Com!