


















Easter Egg Map (C)

What is the grid reference of each Easter egg?

	A	B	C	D	E	F	G	H	I
1									
2									
3									
4									
5									
6									
7									
8									
9									

How many Easter eggs are there?

How many  Easter eggs are there?

How many blanks are there?

Happy Easter from Math-Drills.Com!

Easter Egg Map (C) Answers

What is the grid reference of each Easter egg?

	A	B	C	D	E	F	G	H	I
1						F1			
2		B2					G2		
3				D3		F3			
4				D4		F4	G4	H4	
5		B5				F5			
6						F6			
7								H7	I7
8						F8			
9					E9		G9		

How many Easter eggs are there?

17

How many  Easter eggs are there?

2

How many blanks are there?

64

Happy Easter from Math-Drills.Com!