












# Easter Egg Map (A)

What is the grid reference of each Easter egg?

	A	B	C	D	E	F	G	H	I
1									
2									
3									
4									
5									
6									
7									
8									
9									

How many Easter eggs are there?

\_\_\_\_\_

How many  Easter eggs are there?

\_\_\_\_\_

How many blanks are there?

\_\_\_\_\_

Happy Easter from Math-Drills.Com!

# Easter Egg Map (A) Answers

What is the grid reference of each Easter egg?

	A	B	C	D	E	F	G	H	I
1									
2				D2					
3	A3								
4							G4		
5		B5						H5	
6									
7							G7	H7	
8									I8
9	A9					F9	G9		

How many Easter eggs are there?

11

How many  Easter eggs are there?

3

How many blanks are there?

70

Happy Easter from Math-Drills.Com!