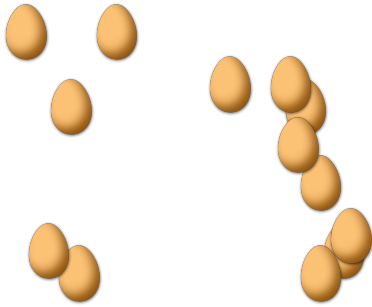


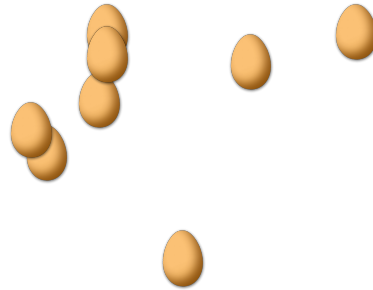
COUNTING EASTER EGGS (A)

Count how many Easter eggs there are in each group.


1. There are _____ Easter eggs in the group below.



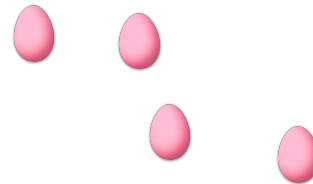
2. There are _____ Easter eggs in the group below.



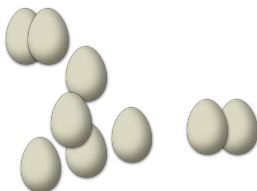
3. There are _____ Easter eggs in the group below.



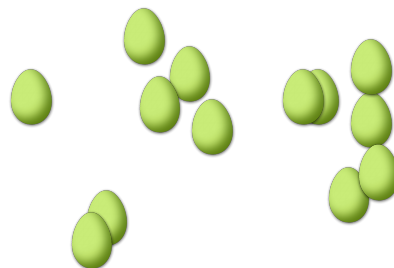
4. There are _____ Easter eggs in the group below.



5. There are _____ Easter eggs in the group below.



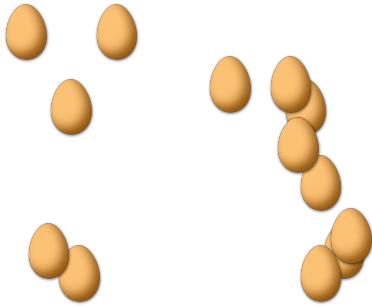
6. There are _____ Easter eggs in the group below.



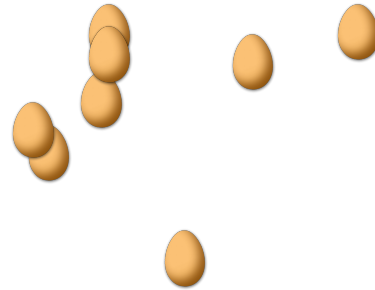
COUNTING EASTER EGGS (A) ANSWERS

Count how many Easter eggs there are in each group.


1. There are 13 Easter eggs in the group below.



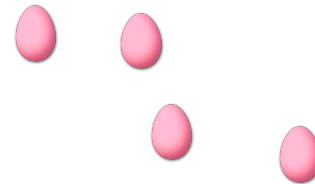
2. There are 8 Easter eggs in the group below.



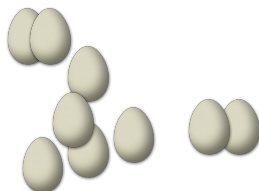
3. There are 5 Easter eggs in the group below.



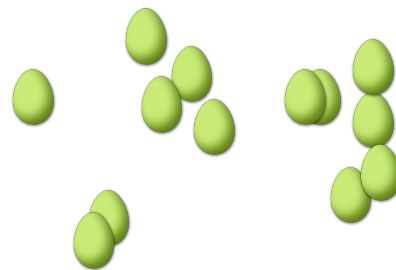
4. There are 4 Easter eggs in the group below.



5. There are 9 Easter eggs in the group below.



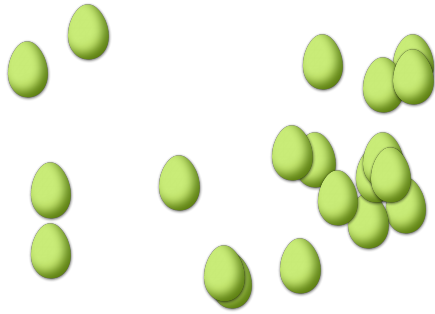
6. There are 13 Easter eggs in the group below.




COUNTING EASTER EGGS (3)

Count how many Easter eggs there are in each group.

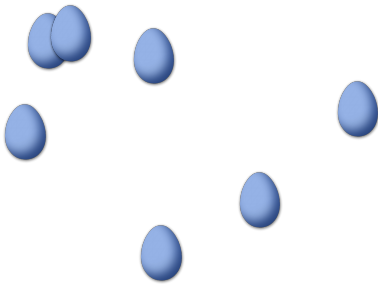
1. There are _____ Easter eggs in the group below.



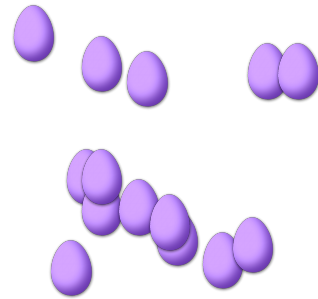
2. There are _____ Easter eggs in the group below.



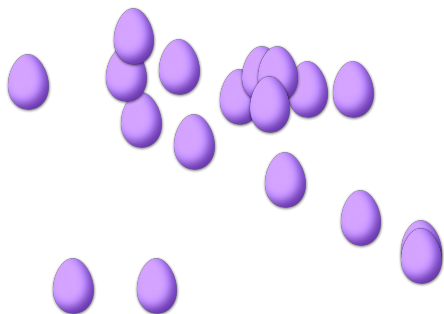
3. There are _____ Easter eggs in the group below.




4. There are _____ Easter eggs in the group below.



5. There are _____ Easter eggs in the group below.



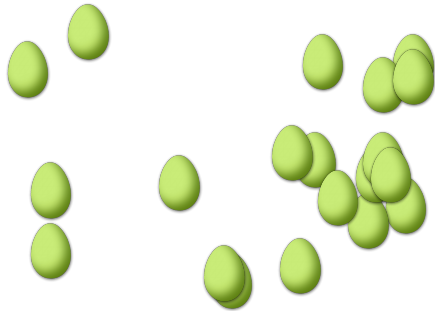
6. There are _____ Easter eggs in the group below.




COUNTING EASTER EGGS (B) ANSWERS

Count how many Easter eggs there are in each group.

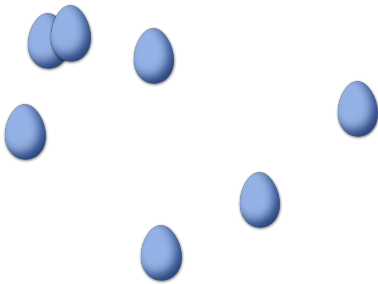
1. There are 20 Easter eggs in the group below.



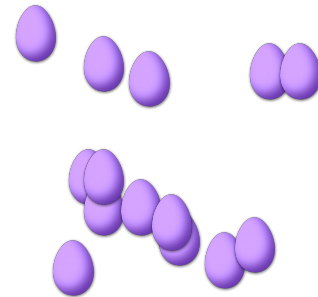
2. There are 15 Easter eggs in the group below.



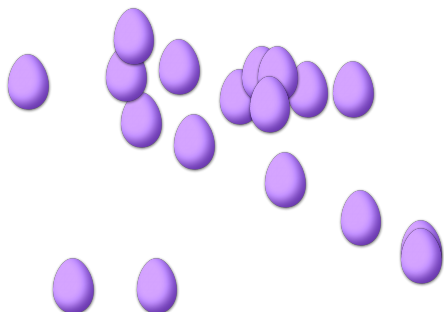
3. There are 7 Easter eggs in the group below.




4. There are 14 Easter eggs in the group below.



5. There are 18 Easter eggs in the group below.



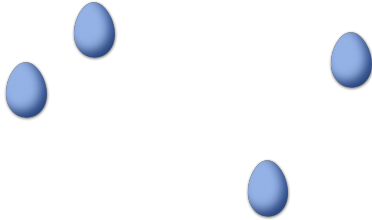
6. There are 14 Easter eggs in the group below.



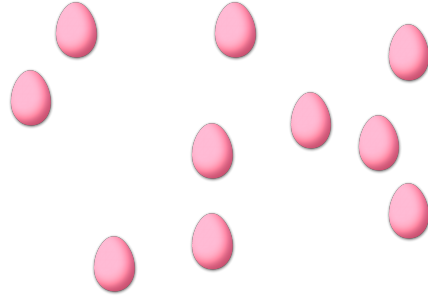
COUNTING EASTER EGGS (C)

Count how many Easter eggs there are in each group.


1. There are _____ Easter eggs in the group below.



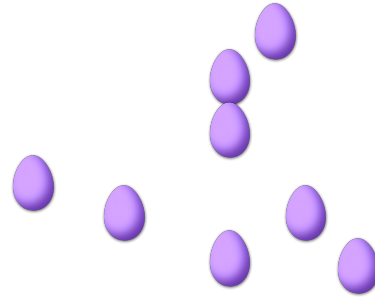
2. There are _____ Easter eggs in the group below.



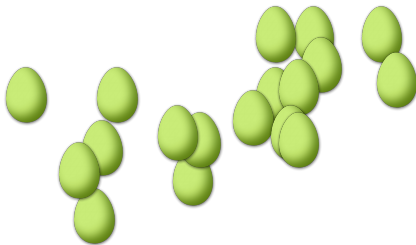
3. There are _____ Easter eggs in the group below.




4. There are _____ Easter eggs in the group below.



5. There are _____ Easter eggs in the group below.



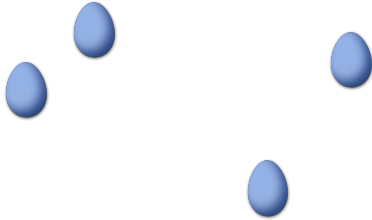
6. There are _____ Easter eggs in the group below.



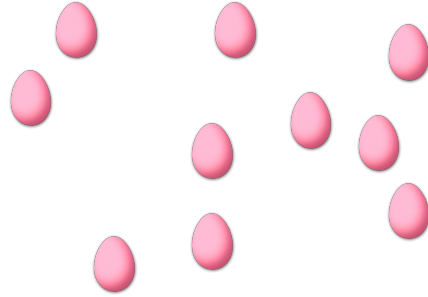
COUNTING EASTER EGGS (C) ANSWERS

Count how many Easter eggs there are in each group.


1. There are 4 Easter eggs in the group below.



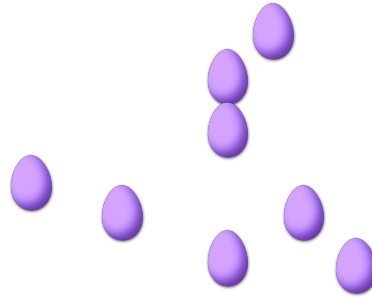
2. There are 10 Easter eggs in the group below.



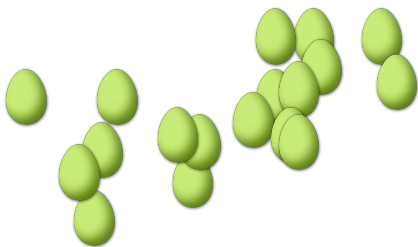
3. There are 4 Easter eggs in the group below.



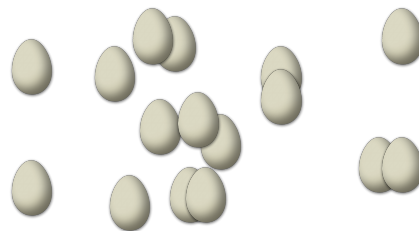
4. There are 8 Easter eggs in the group below.



5. There are 18 Easter eggs in the group below.



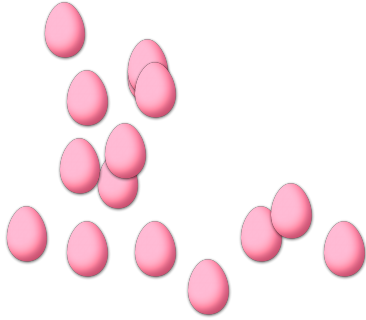
6. There are 16 Easter eggs in the group below.




COUNTING EASTER EGGS (D)

Count how many Easter eggs there are in each group.

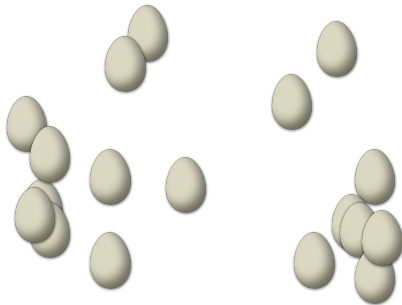
1. There are ____ Easter eggs in the group below.




2. There are ____ Easter eggs in the group below.




3. There are ____ Easter eggs in the group below.



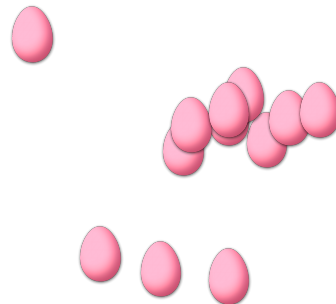
4. There are ____ Easter eggs in the group below.



5. There are ____ Easter eggs in the group below.



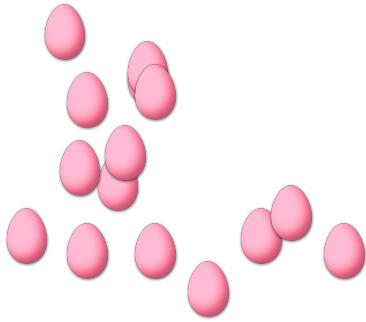
6. There are ____ Easter eggs in the group below.




COUNTING EASTER EGGS (D) ANSWERS

Count how many Easter eggs there are in each group.

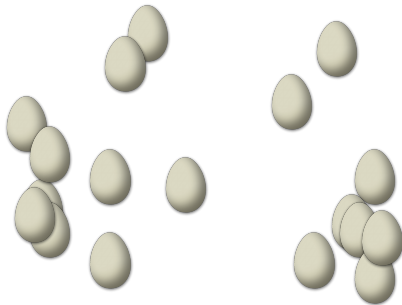
1. There are 15 Easter eggs in the group below.




2. There are 9 Easter eggs in the group below.




3. There are 18 Easter eggs in the group below.



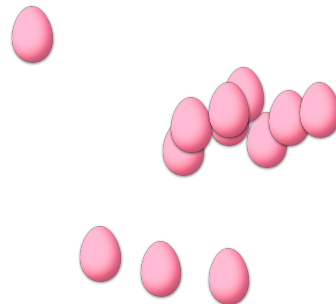
4. There are 16 Easter eggs in the group below.



5. There are 13 Easter eggs in the group below.



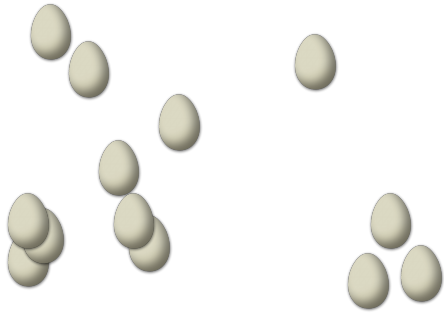
6. There are 12 Easter eggs in the group below.



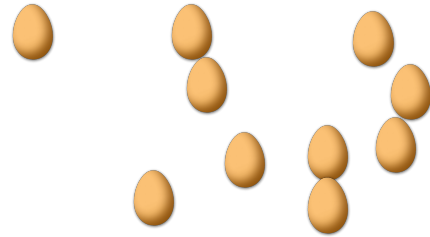
COUNTING EASTER EGGS

Count how many Easter eggs there are in each group.


1. There are _____ Easter eggs in the group below.



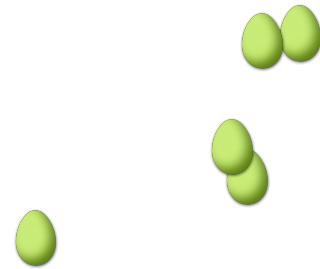
2. There are _____ Easter eggs in the group below.



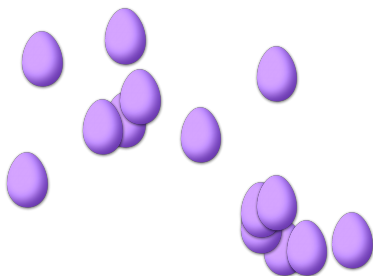
3. There are _____ Easter eggs in the group below.




4. There are _____ Easter eggs in the group below.



5. There are _____ Easter eggs in the group below.



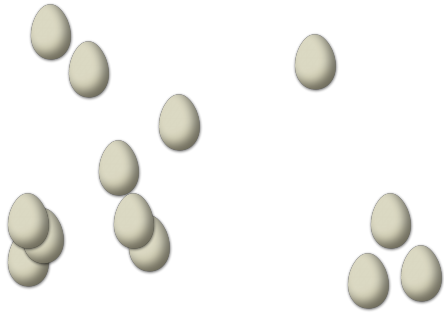
6. There are _____ Easter eggs in the group below.



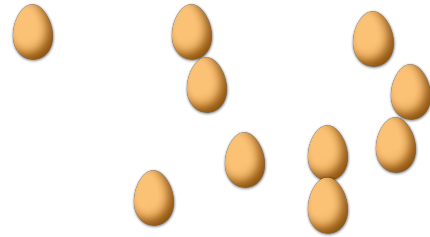
COUNTING EASTER EGGS (E) ANSWERS

Count how many Easter eggs there are in each group.


1. There are 13 Easter eggs in the group below.



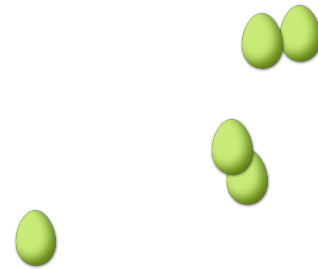
2. There are 10 Easter eggs in the group below.



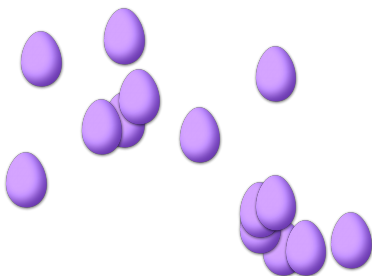
3. There are 7 Easter eggs in the group below.




4. There are 5 Easter eggs in the group below.



5. There are 14 Easter eggs in the group below.



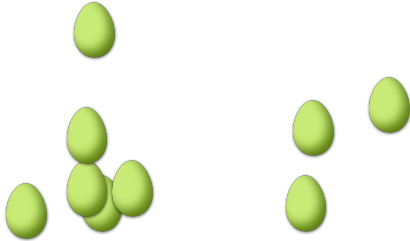
6. There are 8 Easter eggs in the group below.



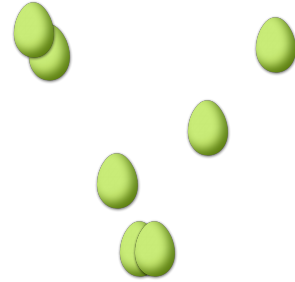
COUNTING EASTER EGGS (F)

Count how many Easter eggs there are in each group.

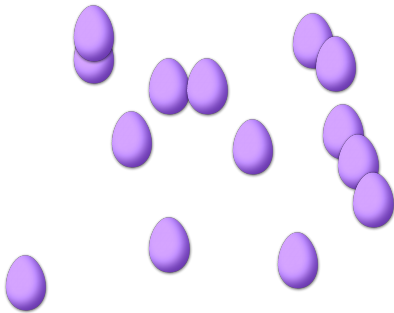
1. There are _____ Easter eggs in the group below.



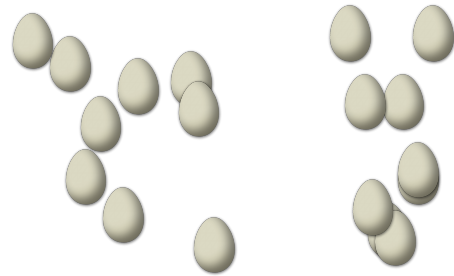
2. There are _____ Easter eggs in the group below.




3. There are _____ Easter eggs in the group below.



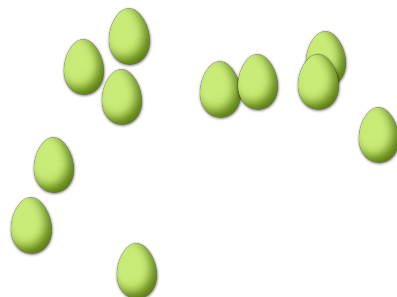
4. There are _____ Easter eggs in the group below.



5. There are _____ Easter eggs in the group below.



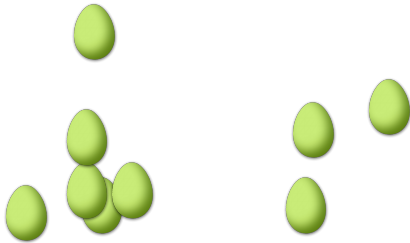
6. There are _____ Easter eggs in the group below.



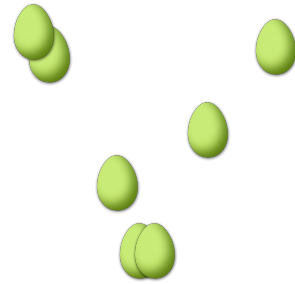
COUNTING EASTER EGGS (F) ANSWERS

Count how many Easter eggs there are in each group.

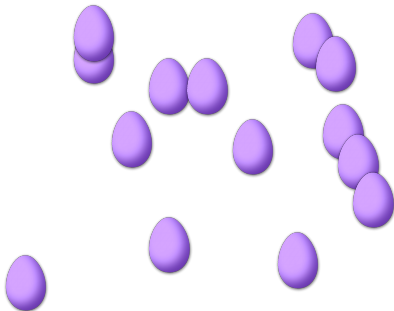
1. There are 9 Easter eggs in the group below.



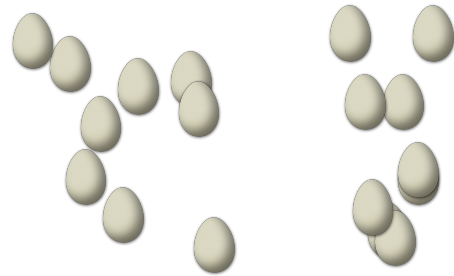
2. There are 7 Easter eggs in the group below.




3. There are 14 Easter eggs in the group below.



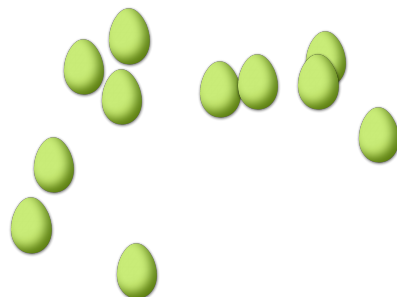
4. There are 18 Easter eggs in the group below.



5. There are 7 Easter eggs in the group below.



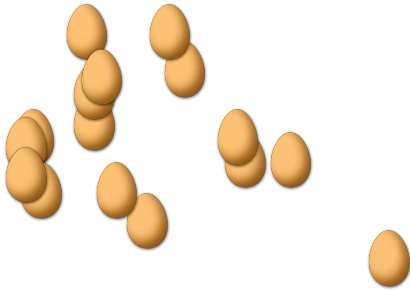
6. There are 11 Easter eggs in the group below.



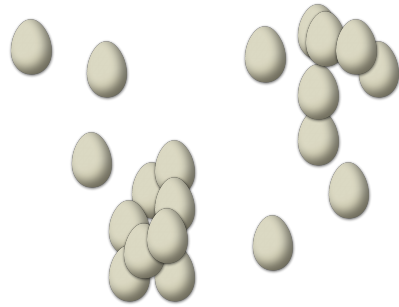
COUNTING EASTER EGGS (G)

Count how many Easter eggs there are in each group.

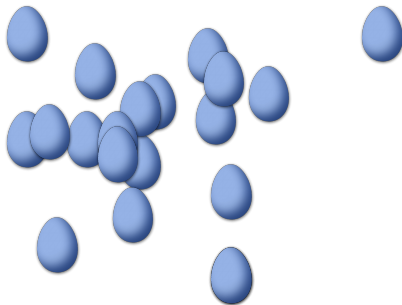
1. There are _____ Easter eggs in the group below.



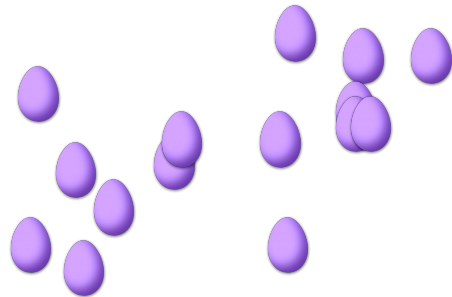
2. There are _____ Easter eggs in the group below.



3. There are _____ Easter eggs in the group below.




4. There are _____ Easter eggs in the group below.



5. There are _____ Easter eggs in the group below.



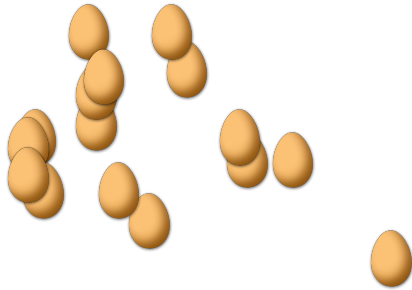
6. There are _____ Easter eggs in the group below.



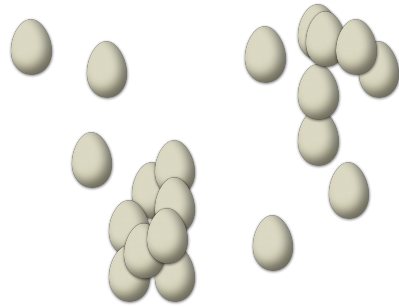
COUNTING EASTER EGGS (G) ANSWERS

Count how many Easter eggs there are in each group.

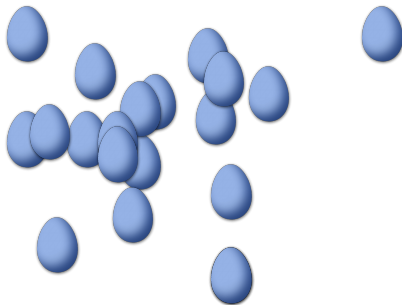
1. There are 16 Easter eggs in the group below.



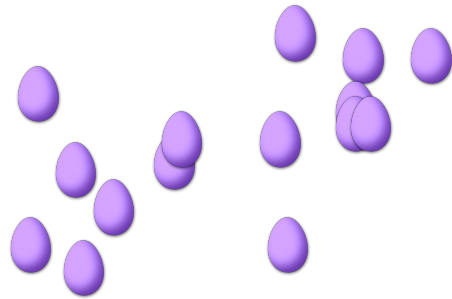
2. There are 20 Easter eggs in the group below.



3. There are 20 Easter eggs in the group below.




4. There are 15 Easter eggs in the group below.



5. There are 4 Easter eggs in the group below.



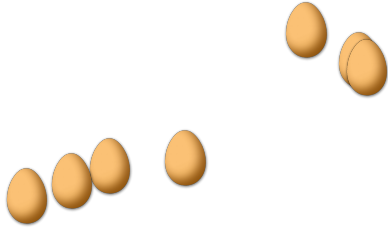
6. There are 12 Easter eggs in the group below.



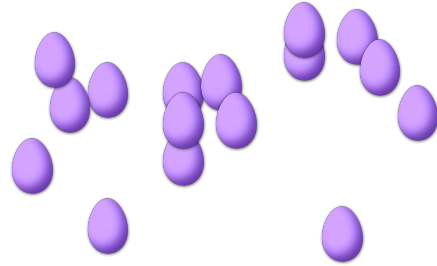
COUNTING EASTER EGGS QD

Count how many Easter eggs there are in each group.

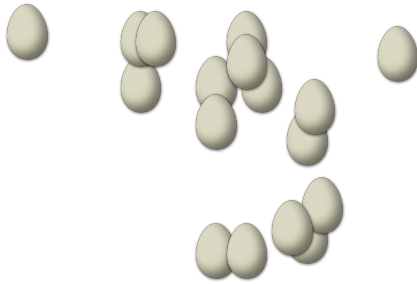
1. There are _____ Easter eggs in the group below.



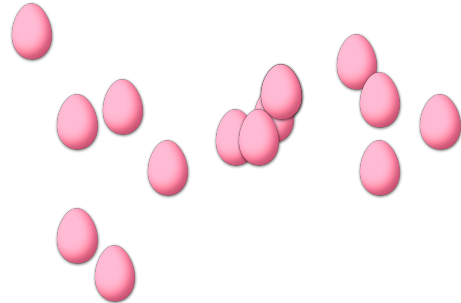
2. There are _____ Easter eggs in the group below.



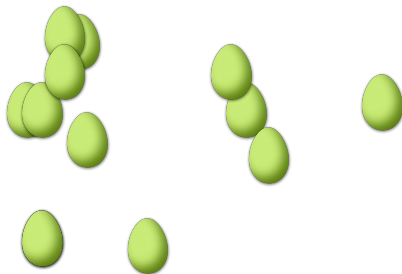
3. There are _____ Easter eggs in the group below.



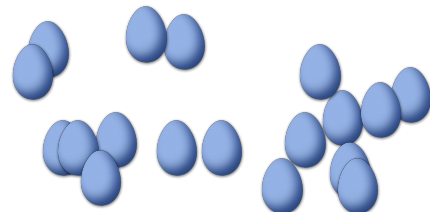
4. There are _____ Easter eggs in the group below.



5. There are _____ Easter eggs in the group below.



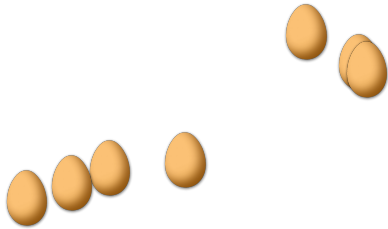
6. There are _____ Easter eggs in the group below.



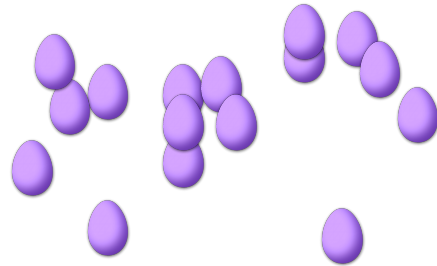
COUNTING EASTER EGGS (H) ANSWERS

Count how many Easter eggs there are in each group.

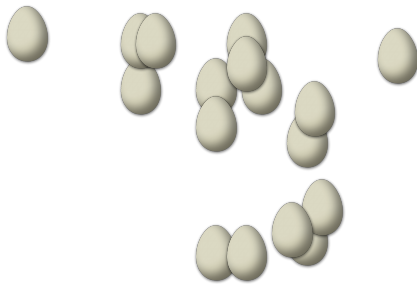
1. There are 7 Easter eggs in the group below.



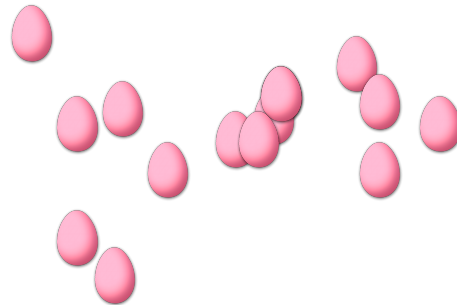
2. There are 16 Easter eggs in the group below.



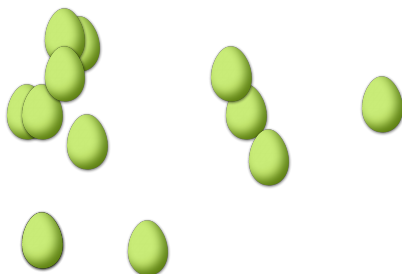
3. There are 17 Easter eggs in the group below.



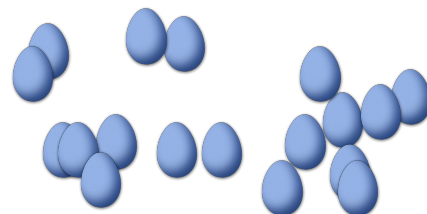
4. There are 15 Easter eggs in the group below.



5. There are 13 Easter eggs in the group below.



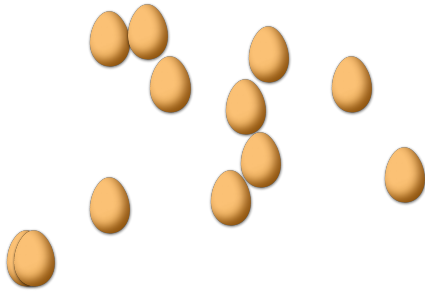
6. There are 18 Easter eggs in the group below.




COUNTING EASTER EGGS ①

Count how many Easter eggs there are in each group.


1. There are _____ Easter eggs in the group below.




2. There are _____ Easter eggs in the group below.



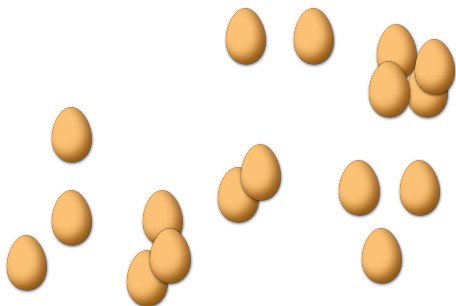
3. There are _____ Easter eggs in the group below.




4. There are _____ Easter eggs in the group below.



5. There are _____ Easter eggs in the group below.



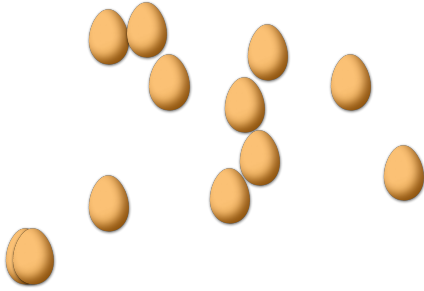
6. There are _____ Easter eggs in the group below.




COUNTING EASTER EGGS CD ANSWERS

Count how many Easter eggs there are in each group.

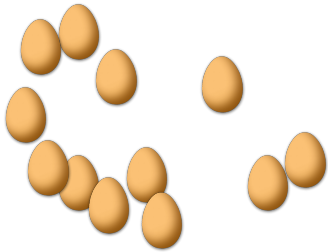
1. There are 12 Easter eggs in the group below.




2. There are 9 Easter eggs in the group below.



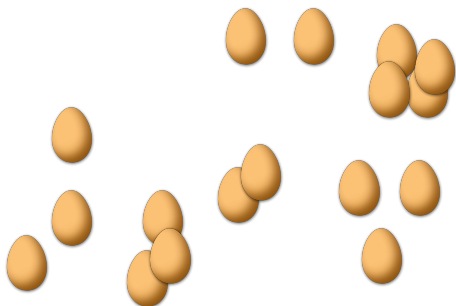
3. There are 12 Easter eggs in the group below.




4. There are 16 Easter eggs in the group below.



5. There are 17 Easter eggs in the group below.



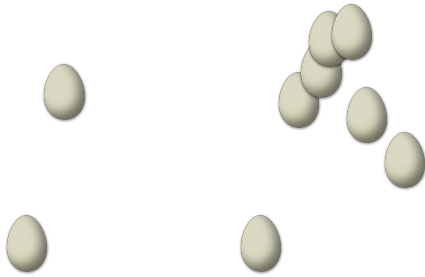
6. There are 17 Easter eggs in the group below.



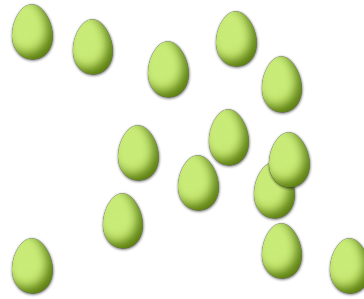
COUNTING EASTER EGGS CD

Count how many Easter eggs there are in each group.

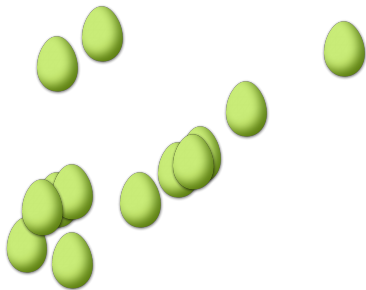
1. There are ____ Easter eggs in the group below.




2. There are ____ Easter eggs in the group below.




3. There are ____ Easter eggs in the group below.




4. There are ____ Easter eggs in the group below.



5. There are ____ Easter eggs in the group below.



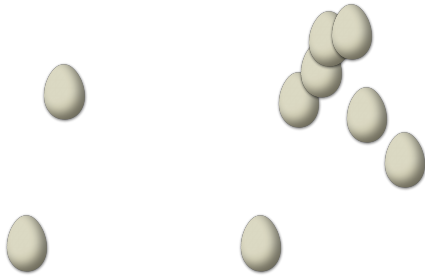
6. There are ____ Easter eggs in the group below.



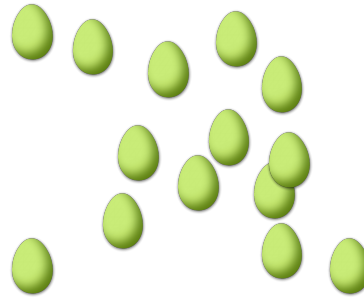
COUNTING EASTER EGGS (D) ANSWERS

Count how many Easter eggs there are in each group.

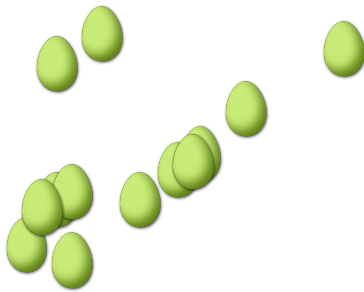
1. There are 9 Easter eggs in the group below.



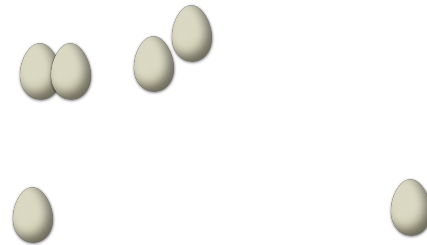
2. There are 14 Easter eggs in the group below.




3. There are 13 Easter eggs in the group below.



4. There are 6 Easter eggs in the group below.



5. There are 18 Easter eggs in the group below.



6. There are 18 Easter eggs in the group below.

