



# COUNTING EASTER EGGS (A)

Count how many Easter eggs there are in each group.


1. There are \_\_\_\_\_ Easter eggs in the group below.



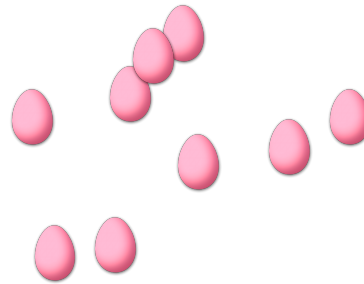
2. There are \_\_\_\_\_ Easter eggs in the group below.



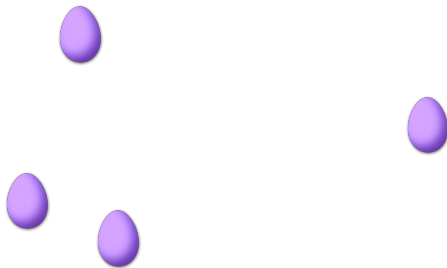
3. There are \_\_\_\_\_ Easter eggs in the group below.



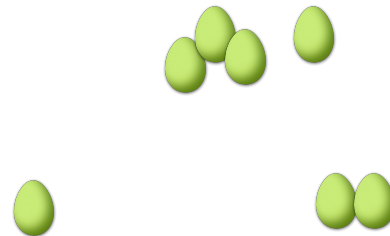
4. There are \_\_\_\_\_ Easter eggs in the group below.



5. There are \_\_\_\_\_ Easter eggs in the group below.




6. There are \_\_\_\_\_ Easter eggs in the group below.




# COUNTING EASTER EGGS (A) ANSWERS

Count how many Easter eggs there are in each group.


1. There are 8 Easter eggs in the group below.



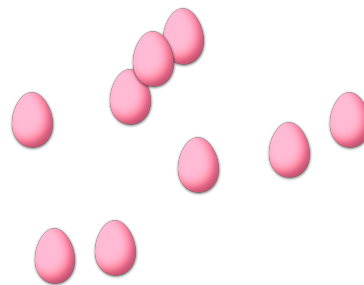
2. There are 6 Easter eggs in the group below.




3. There are 6 Easter eggs in the group below.



4. There are 9 Easter eggs in the group below.



5. There are 4 Easter eggs in the group below.



6. There are 7 Easter eggs in the group below.

