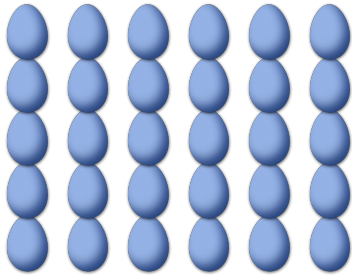



COUNTING EASTER EGGS (F)

Count how many Easter eggs there are in each group.


1. There are _____ Easter eggs in the group below.




2. There are _____ Easter eggs in the group below.




3. There are _____ Easter eggs in the group below.



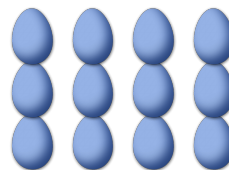
4. There are _____ Easter eggs in the group below.



5. There are _____ Easter eggs in the group below.



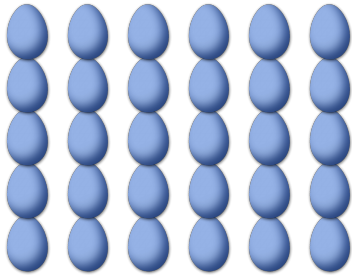
6. There are _____ Easter eggs in the group below.




COUNTING EASTER EGGS (F) ANSWERS

Count how many Easter eggs there are in each group.


1. There are 30 Easter eggs in the group below.




2. There are 12 Easter eggs in the group below.




3. There are 15 Easter eggs in the group below.



4. There are 42 Easter eggs in the group below.



5. There are 20 Easter eggs in the group below.



6. There are 12 Easter eggs in the group below.

