



# COUNTING EASTER EGGS 10

Count how many Easter eggs there are in each group.


1. There are \_\_\_\_\_ Easter eggs in the group below.




2. There are \_\_\_\_\_ Easter eggs in the group below.




3. There are \_\_\_\_\_ Easter eggs in the group below.



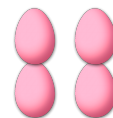
4. There are \_\_\_\_\_ Easter eggs in the group below.



5. There are \_\_\_\_\_ Easter eggs in the group below.




6. There are \_\_\_\_\_ Easter eggs in the group below.




# COUNTING EASTER EGGS (D) ANSWERS

Count how many Easter eggs there are in each group.


1. There are 24 Easter eggs in the group below.




2. There are 36 Easter eggs in the group below.




3. There are 18 Easter eggs in the group below.



4. There are 21 Easter eggs in the group below.



5. There are 25 Easter eggs in the group below.



6. There are 4 Easter eggs in the group below.

