



ELVES NUMBER PATTERNS (I)

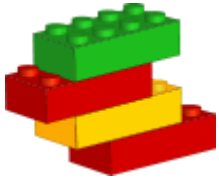


Elves make the same toy the same number of times in a day. They keep a running total of the number of toys they've made. Continue each pattern to show the totals for the next three days.




85, 168, 251, 334, _____, _____, _____.

Number of toys per day: _____



73, 123, 173, 223, _____, _____, _____.

Number of toys per day: _____



32, 94, 156, 218, _____, _____, _____.

Number of toys per day: _____

59, 89, 119, 149, _____, _____, _____.

Number of toys per day: _____

1, 76, 151, 226, _____, _____, _____.

Number of toys per day: _____

56, 103, 150, 197, _____, _____, _____.

Number of toys per day: _____



136, 166, 196, 226, _____, _____, _____.

Number of toys per day: _____





ELVES NUMBER PATTERNS (I) ANSWERS



Elves make the same toy the same number of times in a day. They keep a running total of the number of toys they've made. Continue each pattern to show the totals for the next three days.



85, 168, 251, 334,

Number of toys per day:

417, 500, 583

83




73, 123, 173, 223,

Number of toys per day:

273, 323, 373

50



32, 94, 156, 218,

Number of toys per day:

280, 342, 404

62

59, 89, 119, 149,

Number of toys per day:

179, 209, 239

30

1, 76, 151, 226,

Number of toys per day:

301, 376, 451

75

56, 103, 150, 197,

Number of toys per day:

244, 291, 338

47



136, 166, 196, 226,

Number of toys per day:

256, 286, 316

30

