



# ELVES NUMBER PATTERNS (H)

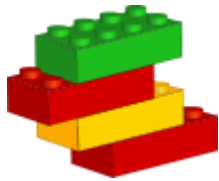


Elves make the same toy the same number of times in a day. They keep a running total of the number of toys they've made. Continue each pattern to show the totals for the next three days.




70, 78, 86, 94, \_\_\_\_\_, \_\_\_\_\_, \_\_\_\_\_.

Number of toys per day: \_\_\_\_\_



55, 62, 69, 76, \_\_\_\_\_, \_\_\_\_\_, \_\_\_\_\_.

Number of toys per day: \_\_\_\_\_



57, 59, 61, 63, \_\_\_\_\_, \_\_\_\_\_, \_\_\_\_\_.

Number of toys per day: \_\_\_\_\_

25, 32, 39, 46, \_\_\_\_\_, \_\_\_\_\_, \_\_\_\_\_.

Number of toys per day: \_\_\_\_\_

10, 15, 20, 25, \_\_\_\_\_, \_\_\_\_\_, \_\_\_\_\_.

Number of toys per day: \_\_\_\_\_

65, 71, 77, 83, \_\_\_\_\_, \_\_\_\_\_, \_\_\_\_\_.

Number of toys per day: \_\_\_\_\_



64, 70, 76, 82, \_\_\_\_\_, \_\_\_\_\_, \_\_\_\_\_.

Number of toys per day: \_\_\_\_\_





# ELVES NUMBER PATTERNS (H)

## ANSWERS



Elves make the same toy the same number of times in a day. They keep a running total of the number of toys they've made. Continue each pattern to show the totals for the next three days.



70, 78, 86, 94,

Number of toys per day:

102, 110, 118

8



55, 62, 69, 76,

Number of toys per day:

83, 90, 97


7

57, 59, 61, 63,

Number of toys per day:

65, 67, 69

2



25, 32, 39, 46,

Number of toys per day:

53, 60, 67

7

10, 15, 20, 25,

Number of toys per day:

30, 35, 40

5

65, 71, 77, 83,

Number of toys per day:

89, 95, 101

6



64, 70, 76, 82,

Number of toys per day:

88, 94, 100

6

