



# ELVES NUMBER PATTERNS (1)

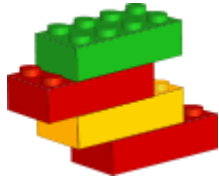


Elves make the same toy the same number of times in a day. They keep a running total of the number of toys they've made. Continue each pattern to show the totals for the next three days.




65, 72, 79, 86, \_\_\_\_\_, \_\_\_\_\_, \_\_\_\_\_.

Number of toys per day: \_\_\_\_\_



72, 78, 84, 90, \_\_\_\_\_, \_\_\_\_\_, \_\_\_\_\_.

Number of toys per day: \_\_\_\_\_



64, 66, 68, 70, \_\_\_\_\_, \_\_\_\_\_, \_\_\_\_\_.

Number of toys per day: \_\_\_\_\_

59, 67, 75, 83, \_\_\_\_\_, \_\_\_\_\_, \_\_\_\_\_.

Number of toys per day: \_\_\_\_\_

72, 73, 74, 75, \_\_\_\_\_, \_\_\_\_\_, \_\_\_\_\_.

Number of toys per day: \_\_\_\_\_

38, 41, 44, 47, \_\_\_\_\_, \_\_\_\_\_, \_\_\_\_\_.

Number of toys per day: \_\_\_\_\_



37, 42, 47, 52, \_\_\_\_\_, \_\_\_\_\_, \_\_\_\_\_.

Number of toys per day: \_\_\_\_\_





# ELVES NUMBER PATTERNS (D) ANSWERS



Elves make the same toy the same number of times in a day. They keep a running total of the number of toys they've made. Continue each pattern to show the totals for the next three days.



65, 72, 79, 86,

Number of toys per day:

93, 100, 107

7



72, 78, 84, 90,

Number of toys per day:

96, 102, 108


6

64, 66, 68, 70,

Number of toys per day:

72, 74, 76

2



59, 67, 75, 83,

Number of toys per day:

91, 99, 107

8

72, 73, 74, 75,

Number of toys per day:

76, 77, 78

1

38, 41, 44, 47,

Number of toys per day:

50, 53, 56

3



37, 42, 47, 52,

Number of toys per day:

57, 62, 67

5

