





# SHAKE THE PRESENT (J)


Simplify each fraction and figure out what is in each box.


1.  $\frac{12}{40} =$  


6.  $\frac{8}{56} =$  


2.  $\frac{10}{40} =$  


7.  $\frac{30}{36} =$  


3.  $\frac{7}{14} =$  

8.  $\frac{20}{40} =$  

4.  $\frac{16}{32} =$  

9.  $\frac{6}{33} =$  

5.  $\frac{4}{12} =$  

10.  $\frac{3}{12} =$  

MERRY CHRISTMAS FROM MATH-DRILLS.COM!