





SHAKE THE PRESENTS (€)


Simplify each fraction and figure out what is in each box.


1. $\frac{42}{54} =$ 


6. $\frac{21}{36} =$ 


2. $\frac{10}{15} =$ 


7. $\frac{14}{21} =$ 


3. $\frac{4}{16} =$ 

8. $\frac{14}{35} =$ 

4. $\frac{12}{42} =$ 

9. $\frac{36}{54} =$ 

5. $\frac{24}{32} =$ 

10. $\frac{99}{108} =$ 

MERRY CHRISTMAS FROM MATH-DRILLS.COM!