

# Counting Christmas Objects (C)

Name: \_\_\_\_\_

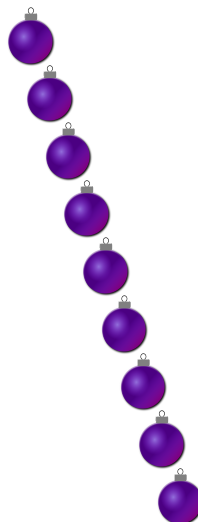
Date: \_\_\_\_\_

Count how many objects there are in each group.

1. There are \_\_\_\_\_ presents in the group below.



2. There are \_\_\_\_\_ baubles in the group below.



3. There are \_\_\_\_\_ bows in the group below.



4. There are \_\_\_\_\_ Christmas trees in the group below.



# Counting Christmas Objects (C) Answers

Name: \_\_\_\_\_

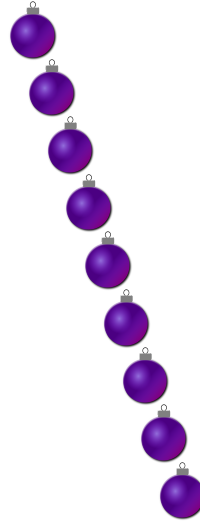
Date: \_\_\_\_\_

Count how many objects there are in each group.


1. There are 3 presents in the group below.



2. There are 9 baubles in the group below.



3. There are 7 bows in the group below.



4. There are 4 Christmas trees in the group below.

