

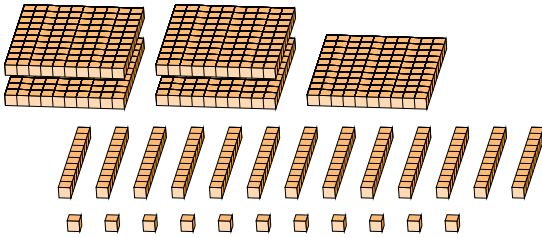
# Regrouping Base Ten Blocks (E)

Name: \_\_\_\_\_

Date: \_\_\_\_\_

What number is shown in each group of base ten blocks?

1.




hundreds tens ones

→  
regroup

<input type="text"/>	<input type="text"/>	<input type="text"/>
----------------------	----------------------	----------------------

2.



hundreds tens ones

→  
regroup

<input type="text"/>	<input type="text"/>	<input type="text"/>
----------------------	----------------------	----------------------

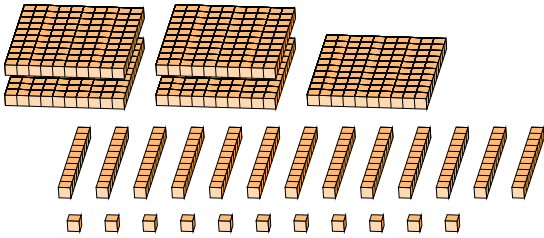
# Regrouping Base Ten Blocks (E) Answers

Name: \_\_\_\_\_

Date: \_\_\_\_\_

What number is shown in each group of base ten blocks?

1.




5	13	11
hundreds	tens	ones

→  
 regroup

6	4	1
---	---	---

2.



5	11	26
hundreds	tens	ones

→  
 regroup

6	3	6
---	---	---