

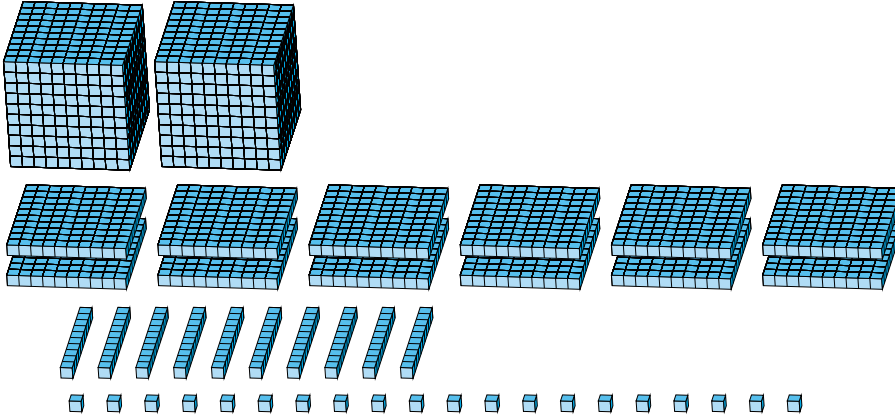
Regrouping Base Ten Blocks (A)

Name: _____

Date: _____

What number is shown in each group of base ten blocks?

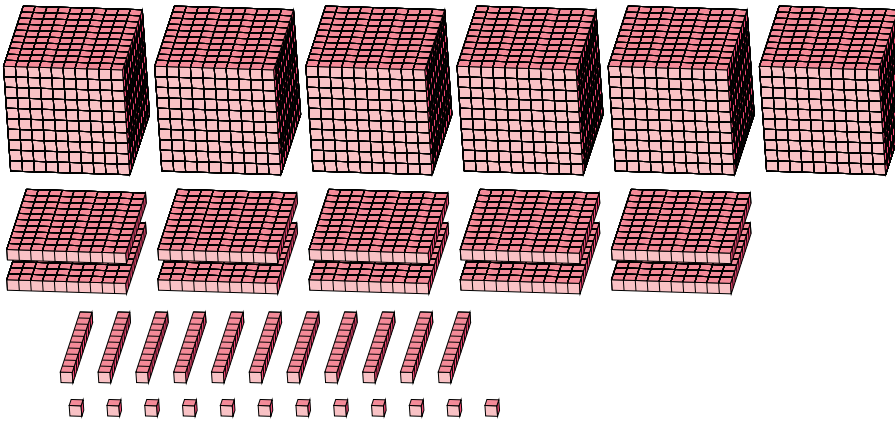
1.



Expanded Form

Standard Form

2.



Expanded Form

Standard Form

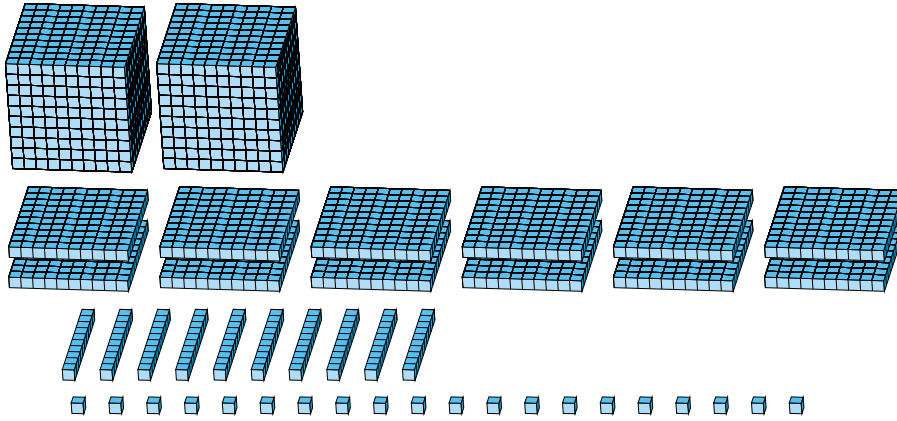
Regrouping Base Ten Blocks (A) Answers

Name: _____

Date: _____

What number is shown in each group of base ten blocks?

1.



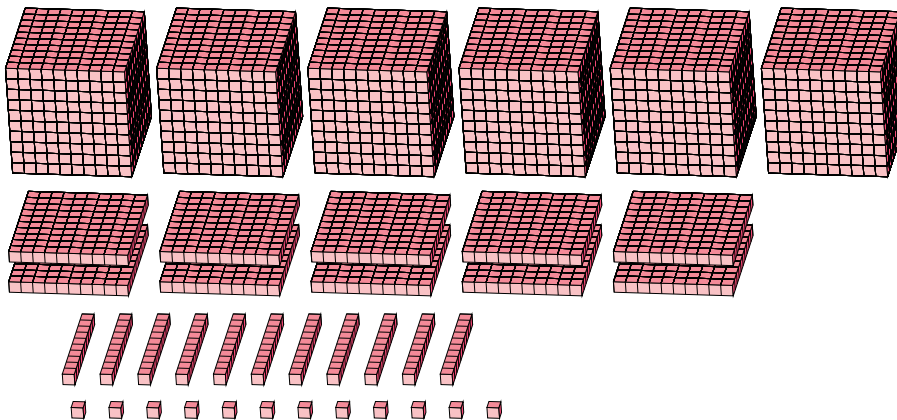
Expanded Form

Standard Form

$$\begin{aligned}
 &(2 \times 1000) + (12 \times 100) + (10 \times 10) + (20 \times 1) \\
 &(3 \times 1000) + (3 \times 100) + (2 \times 10) + (0 \times 1) \\
 &3000 + 300 + 20 + 0
 \end{aligned}$$

3320

2.



Expanded Form

Standard Form

$$\begin{aligned}
 &(6 \times 1000) + (10 \times 100) + (11 \times 10) + (12 \times 1) \\
 &(7 \times 1000) + (1 \times 100) + (2 \times 10) + (2 \times 1) \\
 &7000 + 100 + 20 + 2
 \end{aligned}$$

7122

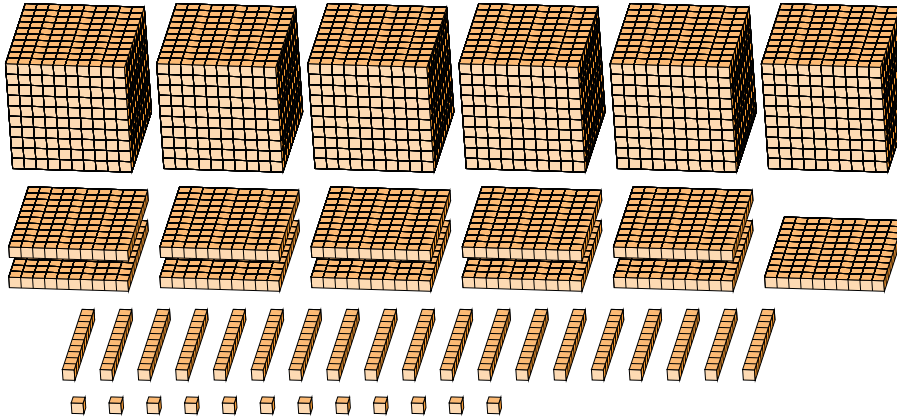
Regrouping Base Ten Blocks (B)

Name: _____

Date: _____

What number is shown in each group of base ten blocks?

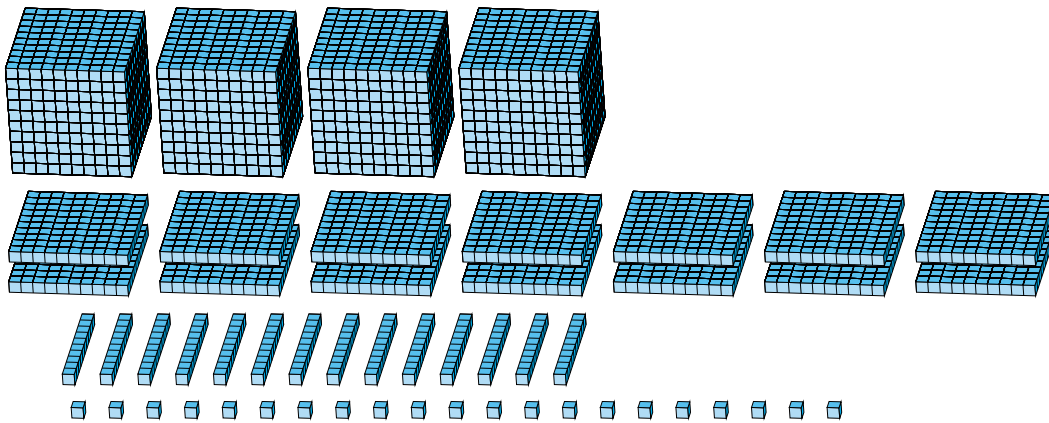
1.



Expanded Form

Standard Form

2.



Expanded Form

Standard Form

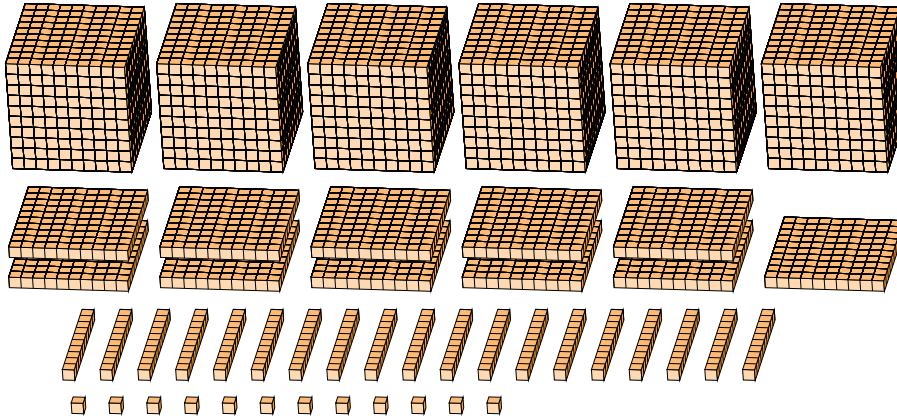
Regrouping Base Ten Blocks (B) Answers

Name: _____

Date: _____

What number is shown in each group of base ten blocks?

1.



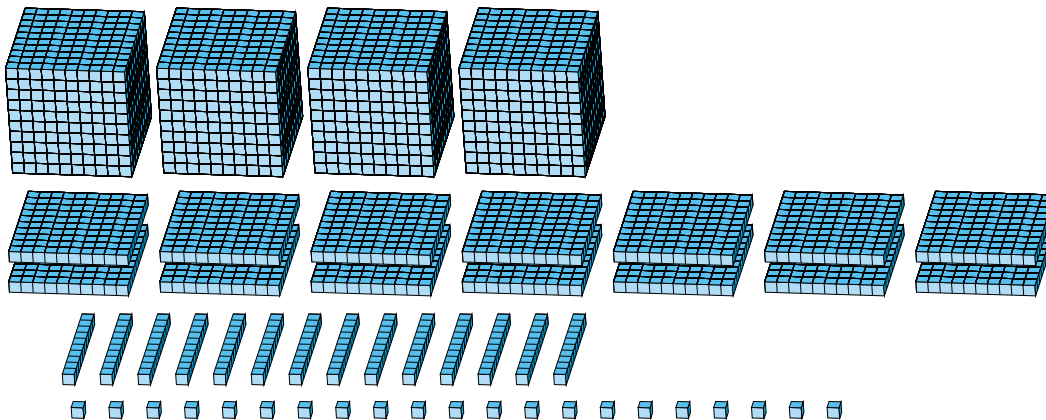
Expanded Form

Standard Form

$$\begin{aligned}
 &(6 \times 1000) + (11 \times 100) + (19 \times 10) + (12 \times 1) \\
 &(7 \times 1000) + (3 \times 100) + (0 \times 10) + (2 \times 1) \\
 &7000 + 300 + 0 + 2
 \end{aligned}$$

7302

2.



Expanded Form

Standard Form

$$\begin{aligned}
 &(4 \times 1000) + (14 \times 100) + (14 \times 10) + (21 \times 1) \\
 &(5 \times 1000) + (5 \times 100) + (6 \times 10) + (1 \times 1) \\
 &5000 + 500 + 60 + 1
 \end{aligned}$$

5561

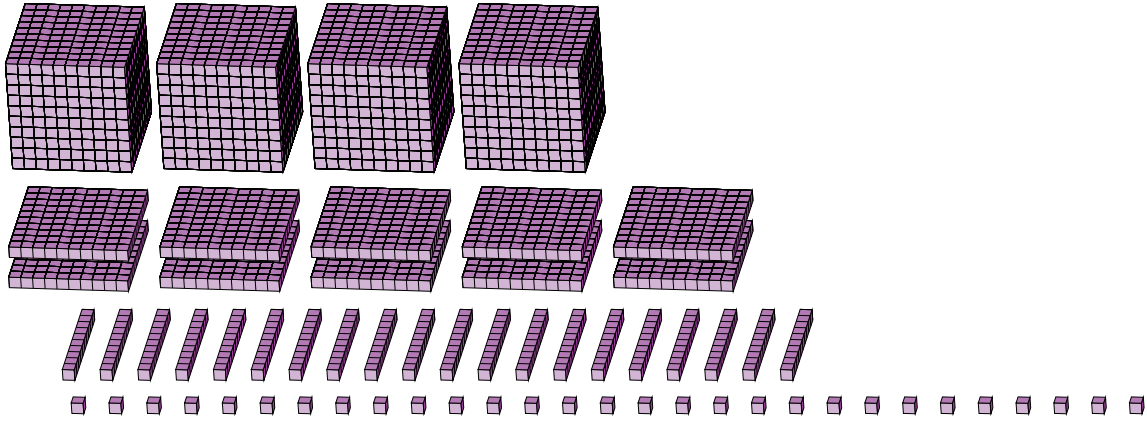
Regrouping Base Ten Blocks (C)

Name: _____

Date: _____

What number is shown in each group of base ten blocks?

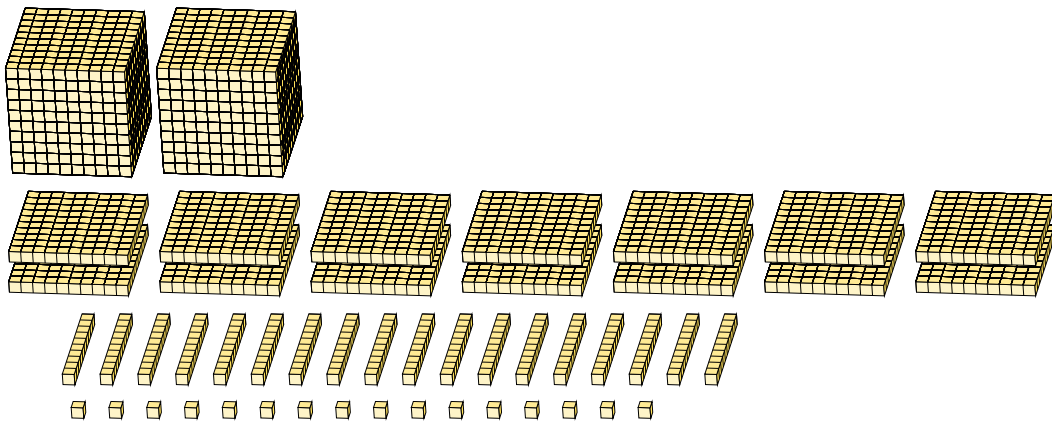
1.



Expanded Form

Standard Form

2.



Expanded Form

Standard Form

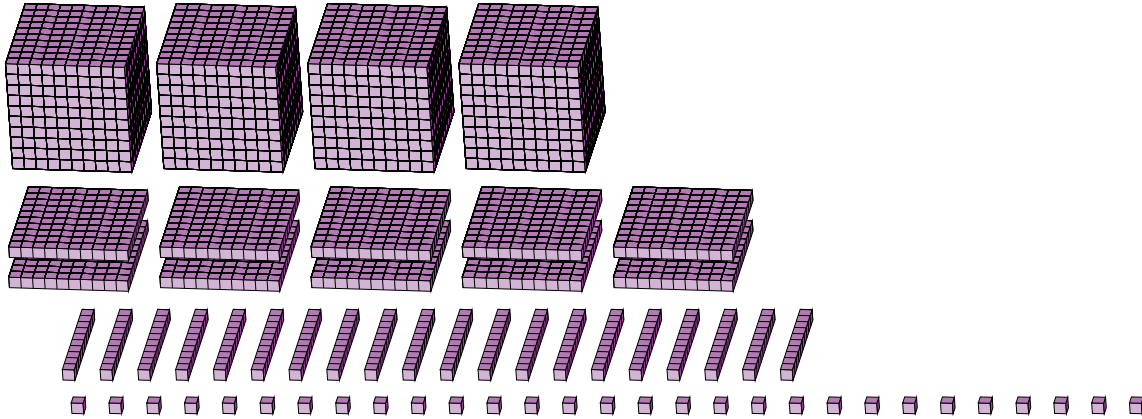
Regrouping Base Ten Blocks (C) Answers

Name: _____

Date: _____

What number is shown in each group of base ten blocks?

1.



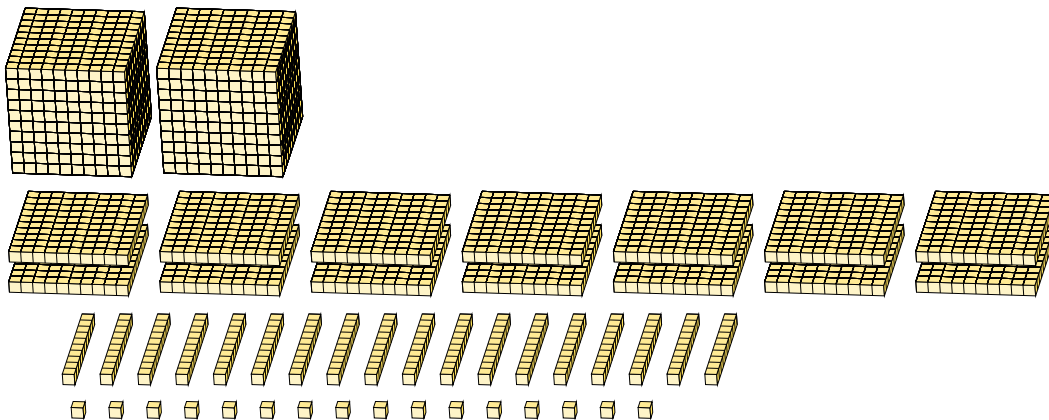
Expanded Form

Standard Form

$$\begin{aligned}
 &(4 \times 1000) + (10 \times 100) + (20 \times 10) + (29 \times 1) \\
 &(5 \times 1000) + (2 \times 100) + (2 \times 10) + (9 \times 1) \\
 &5000 + 200 + 20 + 9
 \end{aligned}$$

5229

2.



Expanded Form

Standard Form

$$\begin{aligned}
 &(2 \times 1000) + (14 \times 100) + (18 \times 10) + (16 \times 1) \\
 &(3 \times 1000) + (5 \times 100) + (9 \times 10) + (6 \times 1) \\
 &3000 + 500 + 90 + 6
 \end{aligned}$$

3596

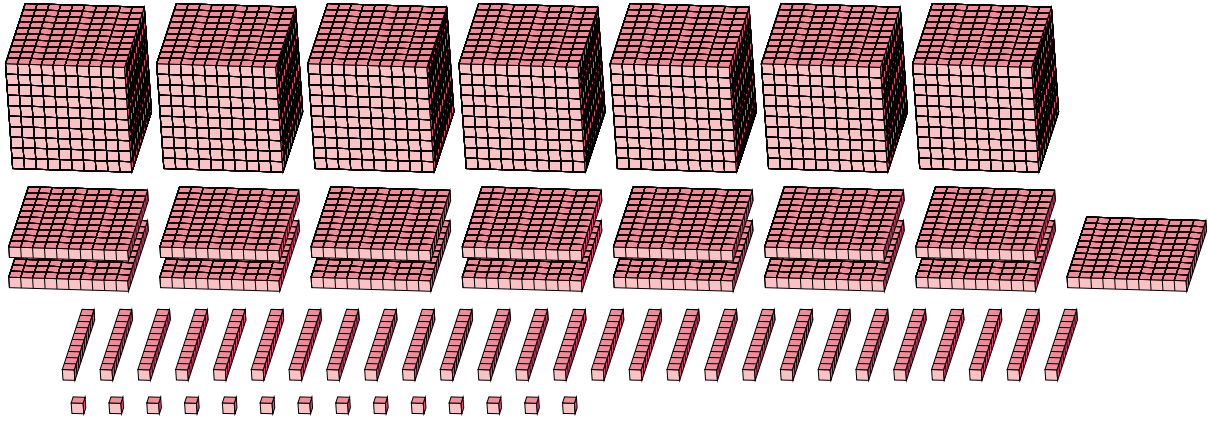
Regrouping Base Ten Blocks (D)

Name: _____

Date: _____

What number is shown in each group of base ten blocks?

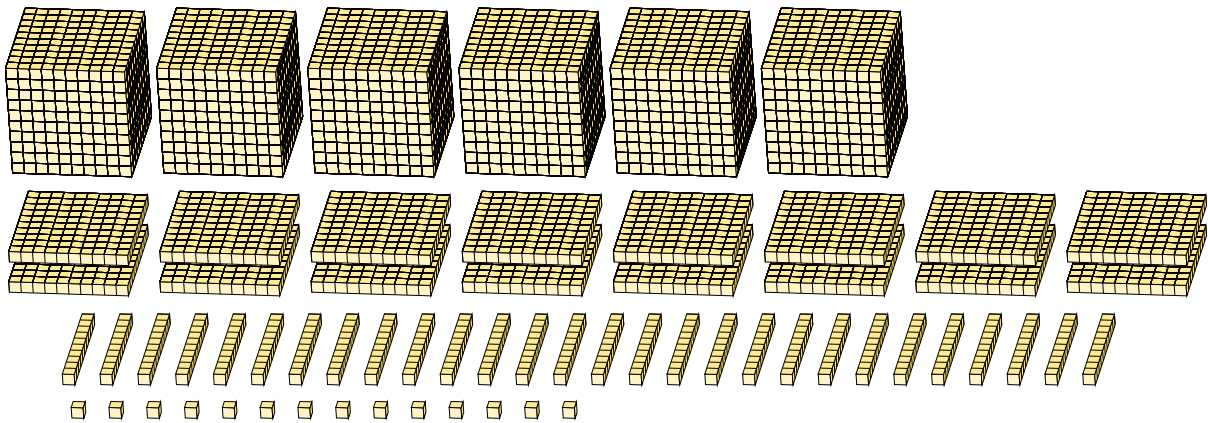
1.



Expanded Form

Standard Form

2.



Expanded Form

Standard Form

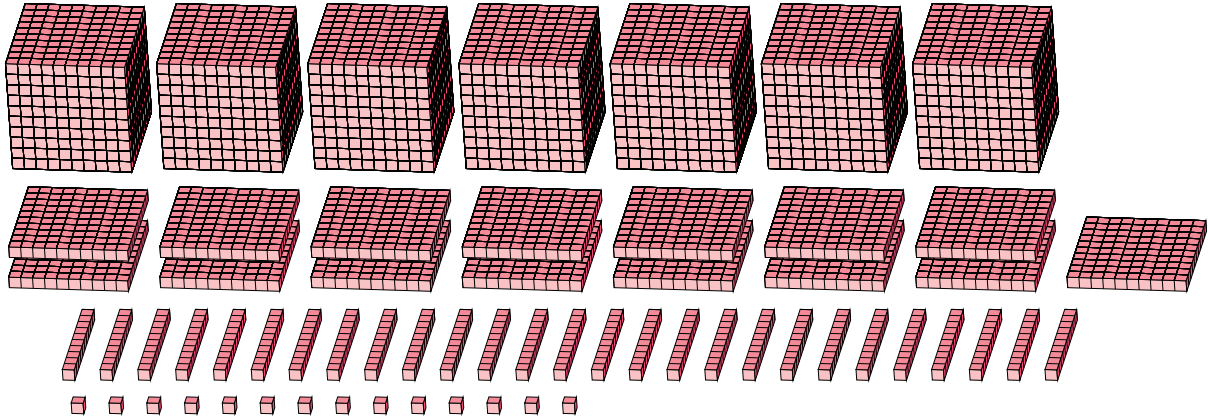
Regrouping Base Ten Blocks (D) Answers

Name: _____

Date: _____

What number is shown in each group of base ten blocks?

1.



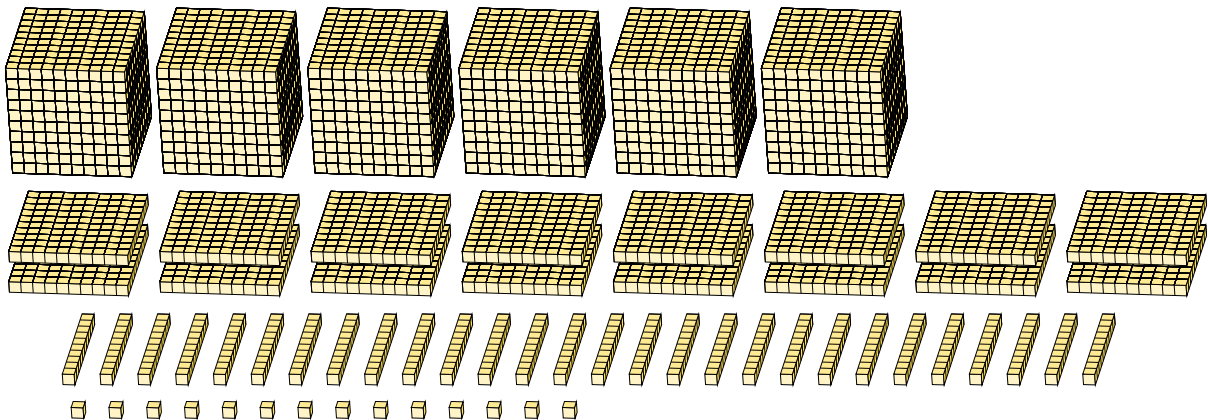
Expanded Form

Standard Form

$$\begin{aligned}
 &(7 \times 1000) + (15 \times 100) + (27 \times 10) + (14 \times 1) \\
 &(8 \times 1000) + (7 \times 100) + (8 \times 10) + (4 \times 1) \\
 &8000 + 700 + 80 + 4
 \end{aligned}$$

8784

2.



Expanded Form

Standard Form

$$\begin{aligned}
 &(6 \times 1000) + (16 \times 100) + (28 \times 10) + (14 \times 1) \\
 &(7 \times 1000) + (8 \times 100) + (9 \times 10) + (4 \times 1) \\
 &7000 + 800 + 90 + 4
 \end{aligned}$$

7894

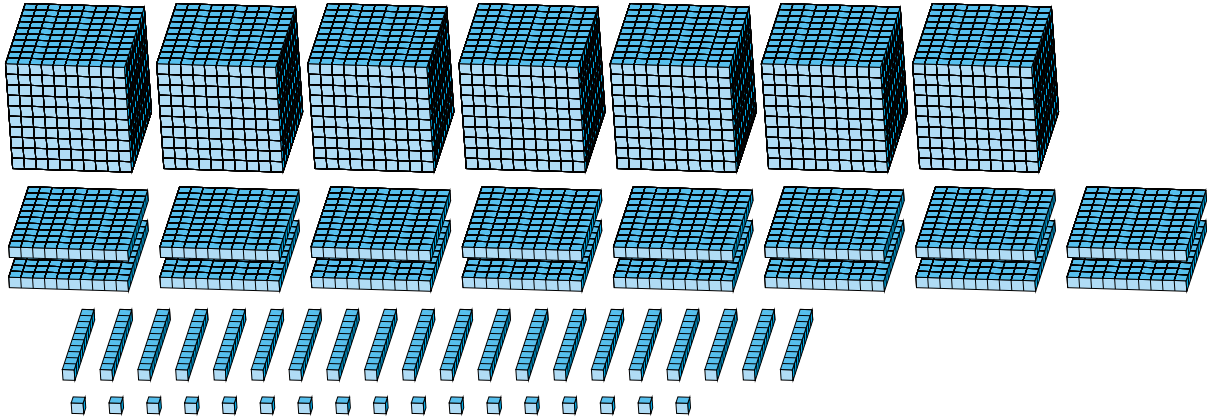
Regrouping Base Ten Blocks (E)

Name: _____

Date: _____

What number is shown in each group of base ten blocks?

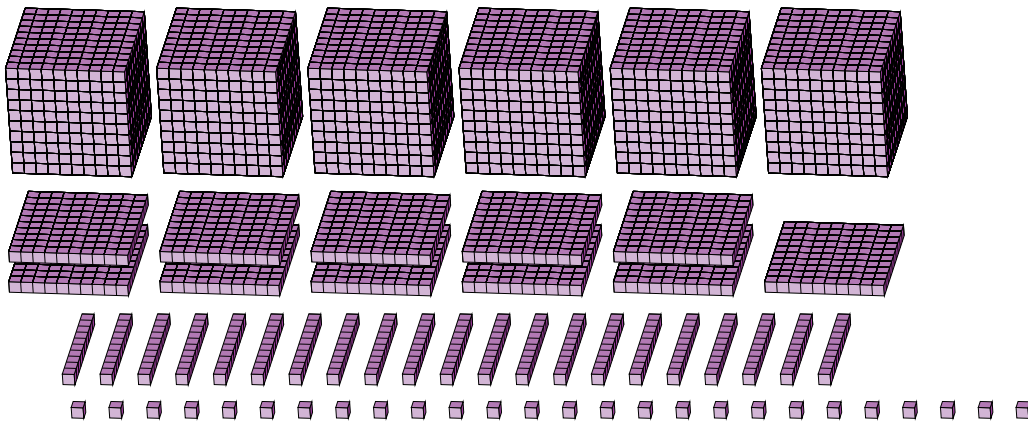
1.



Expanded Form

Standard Form

2.



Expanded Form

Standard Form

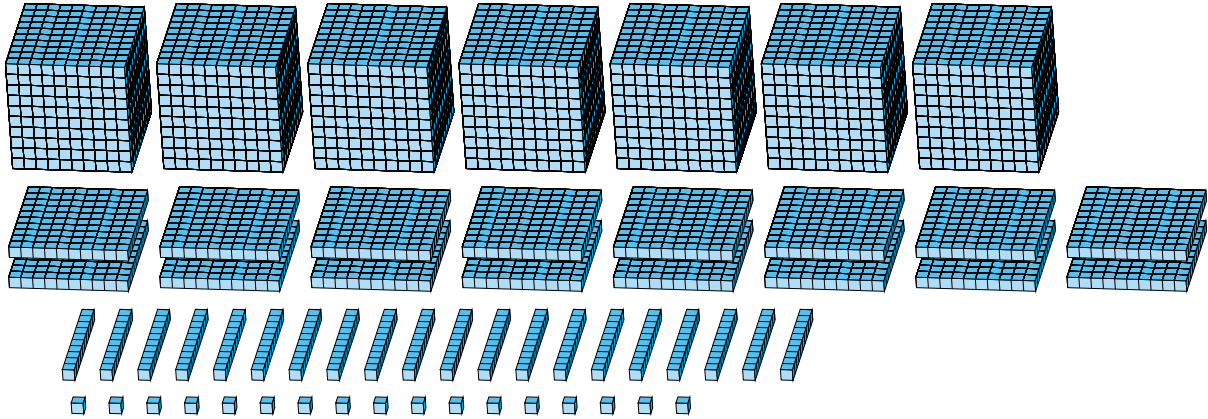
Regrouping Base Ten Blocks (E) Answers

Name: _____

Date: _____

What number is shown in each group of base ten blocks?

1.



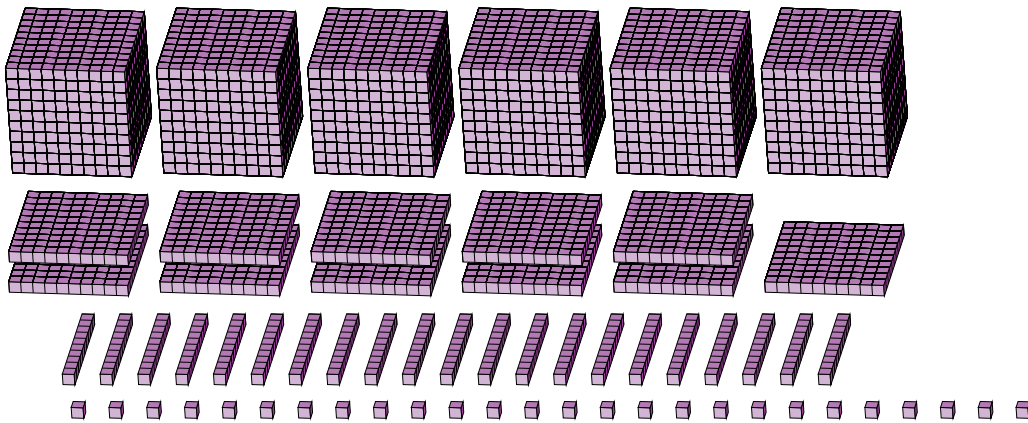
Expanded Form

Standard Form

$$\begin{aligned}
 &(7 \times 1000) + (16 \times 100) + (20 \times 10) + (17 \times 1) \\
 &(8 \times 1000) + (8 \times 100) + (1 \times 10) + (7 \times 1) \\
 &8000 + 800 + 10 + 7
 \end{aligned}$$

8817

2.



Expanded Form

Standard Form

$$\begin{aligned}
 &(6 \times 1000) + (11 \times 100) + (21 \times 10) + (26 \times 1) \\
 &(7 \times 1000) + (3 \times 100) + (3 \times 10) + (6 \times 1) \\
 &7000 + 300 + 30 + 6
 \end{aligned}$$

7336

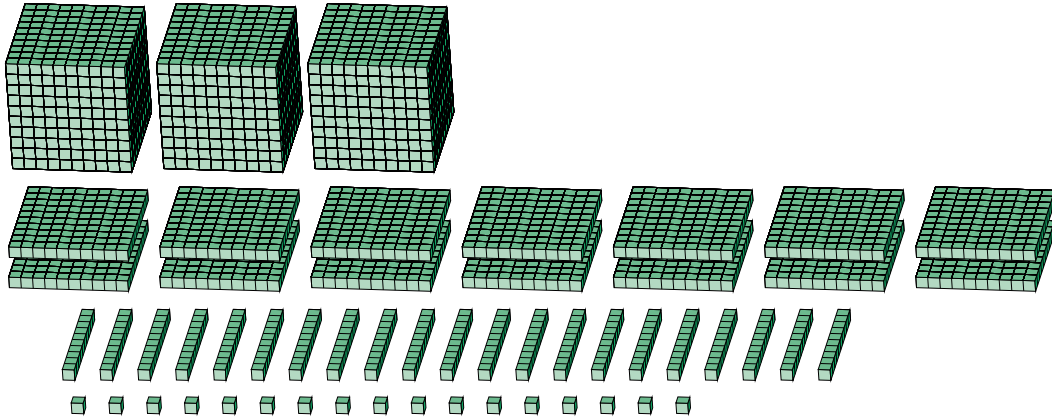
Regrouping Base Ten Blocks (F)

Name: _____

Date: _____

What number is shown in each group of base ten blocks?

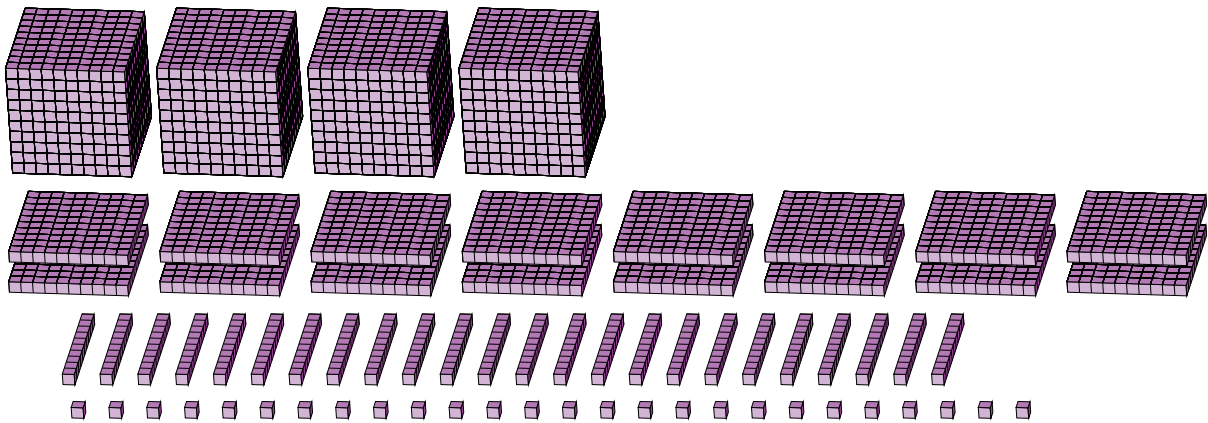
1.



Expanded Form

Standard Form

2.



Expanded Form

Standard Form

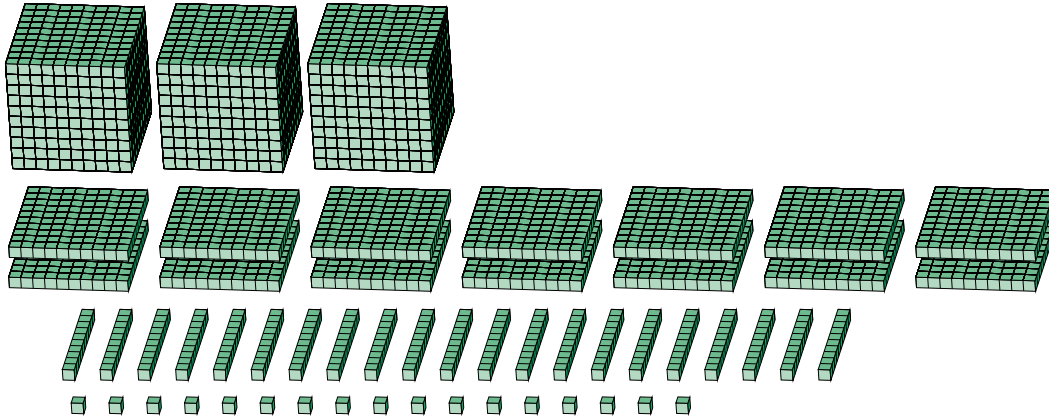
Regrouping Base Ten Blocks (F) Answers

Name: _____

Date: _____

What number is shown in each group of base ten blocks?

1.



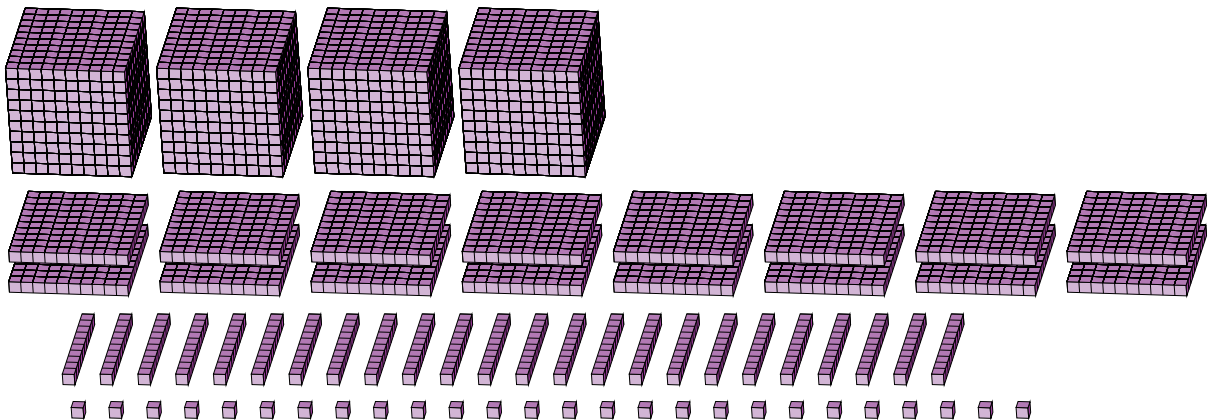
Expanded Form

Standard Form

$$\begin{aligned}
 &(3 \times 1000) + (14 \times 100) + (21 \times 10) + (17 \times 1) \\
 &(4 \times 1000) + (6 \times 100) + (2 \times 10) + (7 \times 1) \\
 &4000 + 600 + 20 + 7
 \end{aligned}$$

4627

2.



Expanded Form

Standard Form

$$\begin{aligned}
 &(4 \times 1000) + (16 \times 100) + (24 \times 10) + (26 \times 1) \\
 &(5 \times 1000) + (8 \times 100) + (6 \times 10) + (6 \times 1) \\
 &5000 + 800 + 60 + 6
 \end{aligned}$$

5866

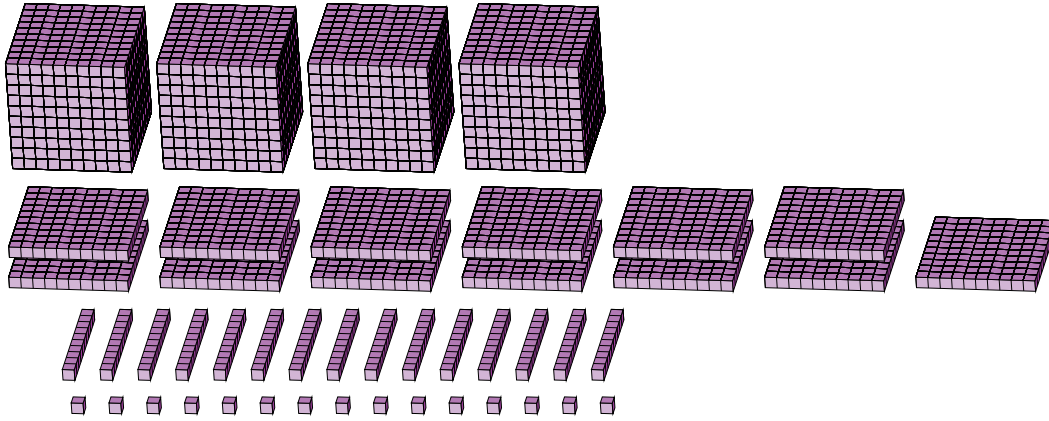
Regrouping Base Ten Blocks (G)

Name: _____

Date: _____

What number is shown in each group of base ten blocks?

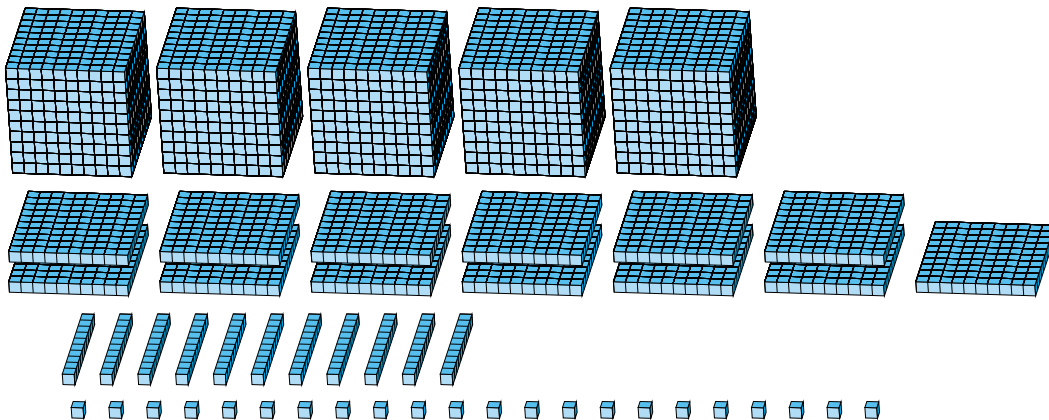
1.



Expanded Form

Standard Form

2.



Expanded Form

Standard Form

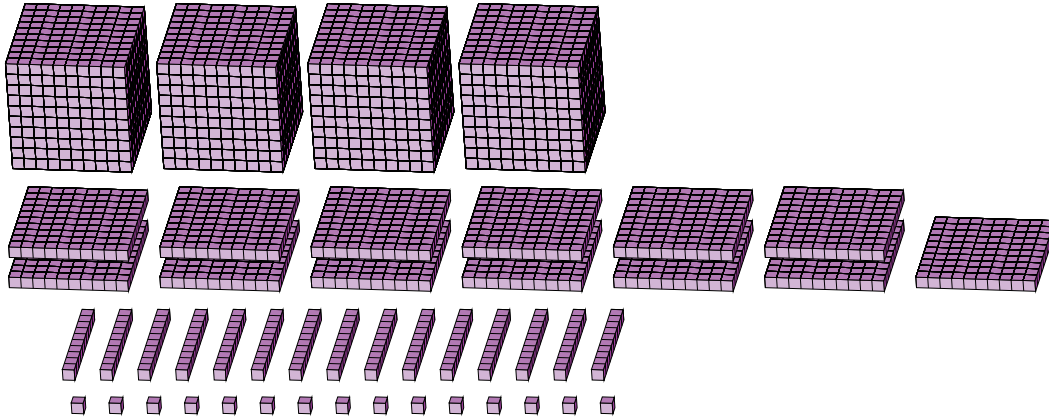
Regrouping Base Ten Blocks (G) Answers

Name: _____

Date: _____

What number is shown in each group of base ten blocks?

1.



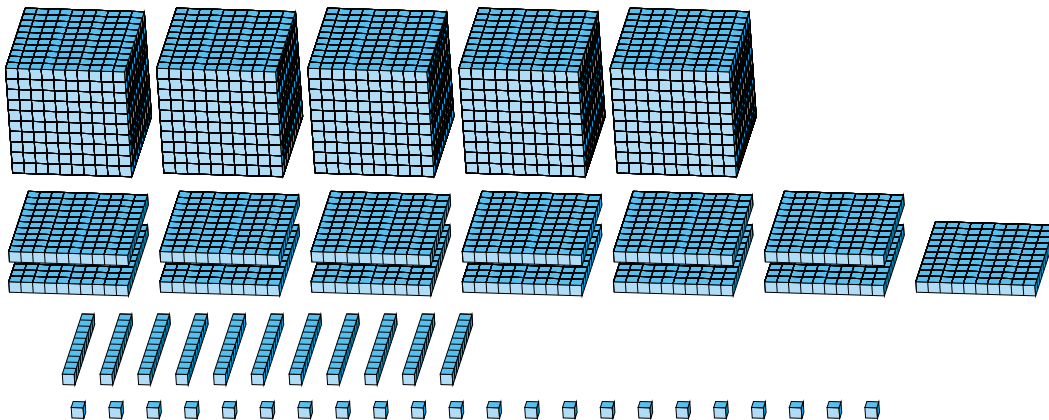
Expanded Form

Standard Form

$$\begin{aligned}
 &(4 \times 1000) + (13 \times 100) + (15 \times 10) + (15 \times 1) \\
 &(5 \times 1000) + (4 \times 100) + (6 \times 10) + (5 \times 1) \\
 &5000 + 400 + 60 + 5
 \end{aligned}$$

5465

2.



Expanded Form

Standard Form

$$\begin{aligned}
 &(5 \times 1000) + (13 \times 100) + (11 \times 10) + (22 \times 1) \\
 &(6 \times 1000) + (4 \times 100) + (3 \times 10) + (2 \times 1) \\
 &6000 + 400 + 30 + 2
 \end{aligned}$$

6432

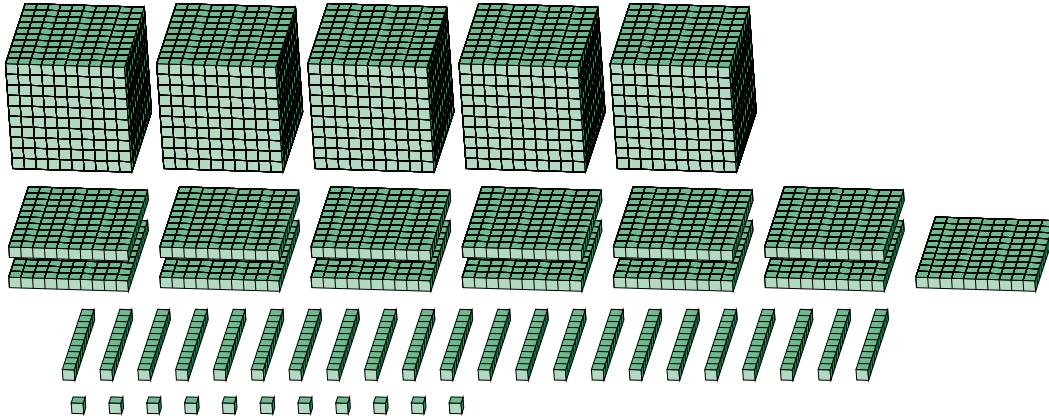
Regrouping Base Ten Blocks (H)

Name: _____

Date: _____

What number is shown in each group of base ten blocks?

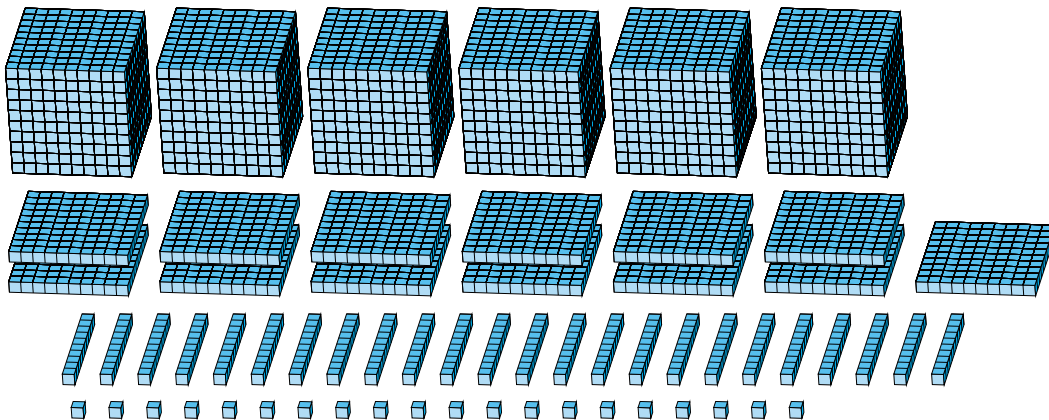
1.



Expanded Form

Standard Form

2.



Expanded Form

Standard Form

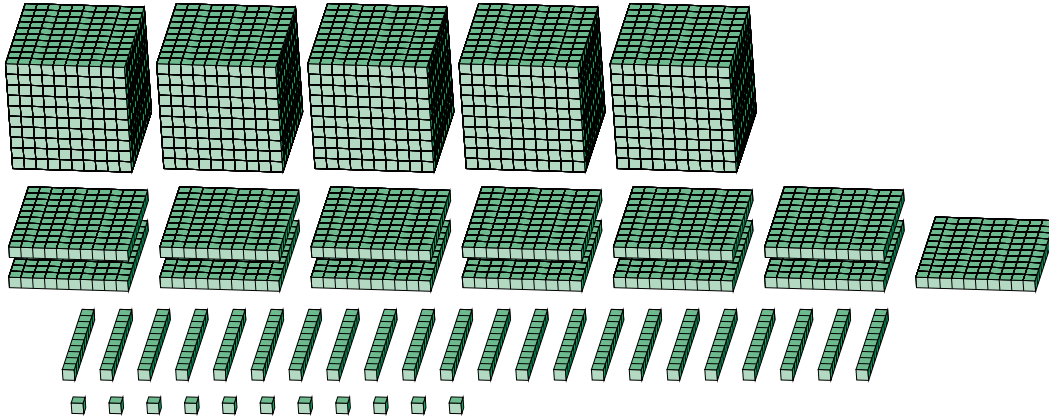
Regrouping Base Ten Blocks (H) Answers

Name: _____

Date: _____

What number is shown in each group of base ten blocks?

1.



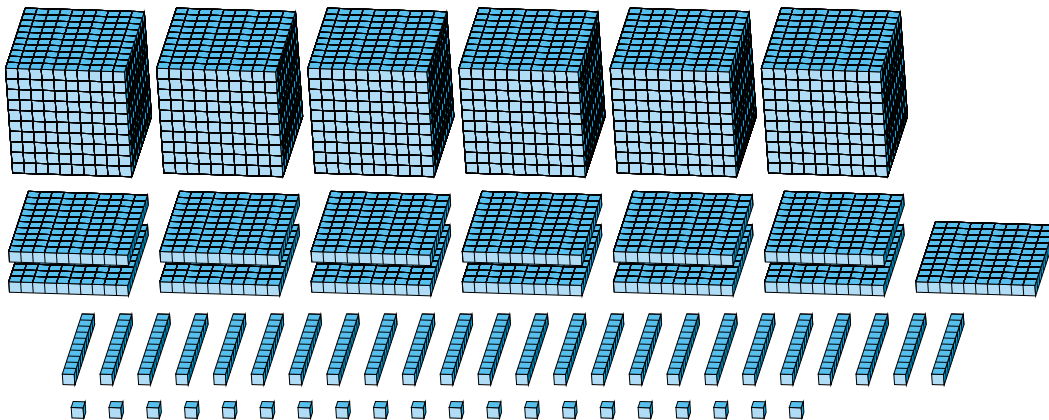
Expanded Form

Standard Form

$$\begin{aligned}
 &(5 \times 1000) + (13 \times 100) + (22 \times 10) + (11 \times 1) \\
 &(6 \times 1000) + (5 \times 100) + (3 \times 10) + (1 \times 1) \\
 &6000 + 500 + 30 + 1
 \end{aligned}$$

6531

2.



Expanded Form

Standard Form

$$\begin{aligned}
 &(6 \times 1000) + (13 \times 100) + (24 \times 10) + (20 \times 1) \\
 &(7 \times 1000) + (5 \times 100) + (6 \times 10) + (0 \times 1) \\
 &7000 + 500 + 60 + 0
 \end{aligned}$$

7560

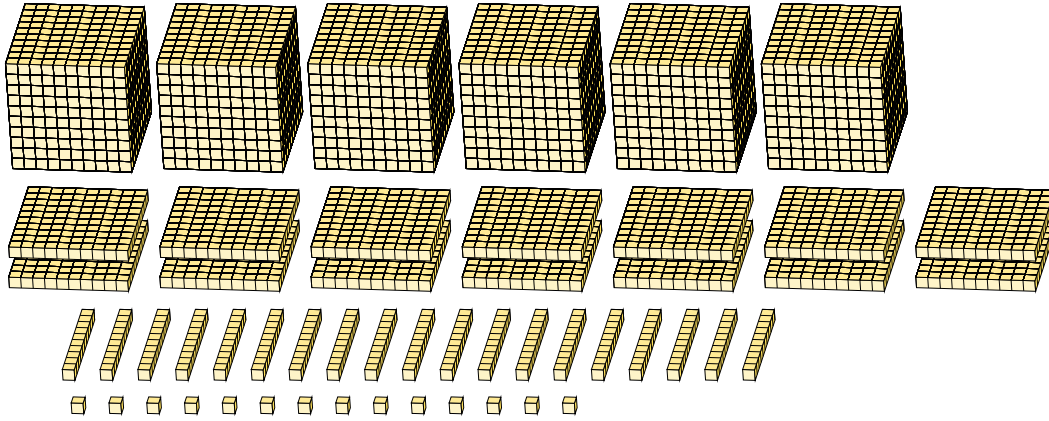
Regrouping Base Ten Blocks (I)

Name: _____

Date: _____

What number is shown in each group of base ten blocks?

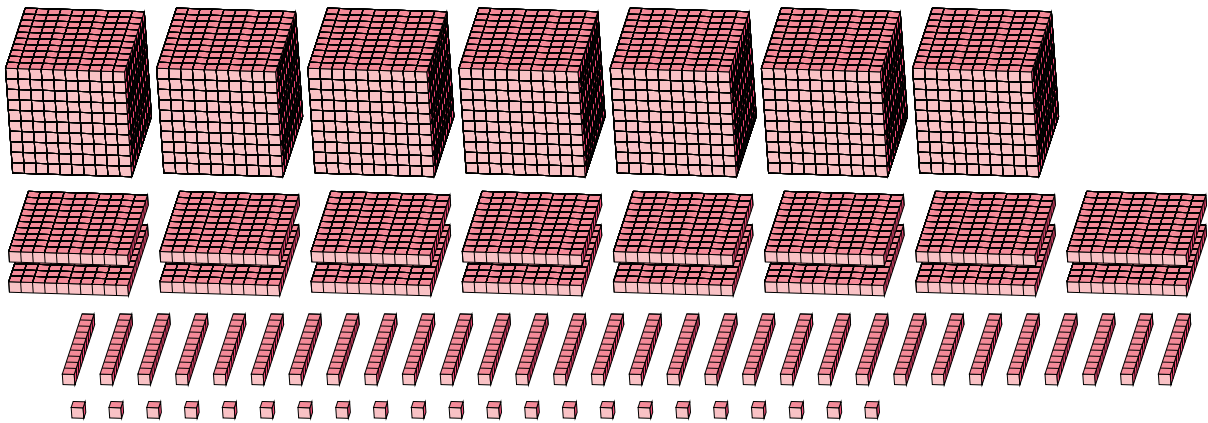
1.



Expanded Form

Standard Form

2.



Expanded Form

Standard Form

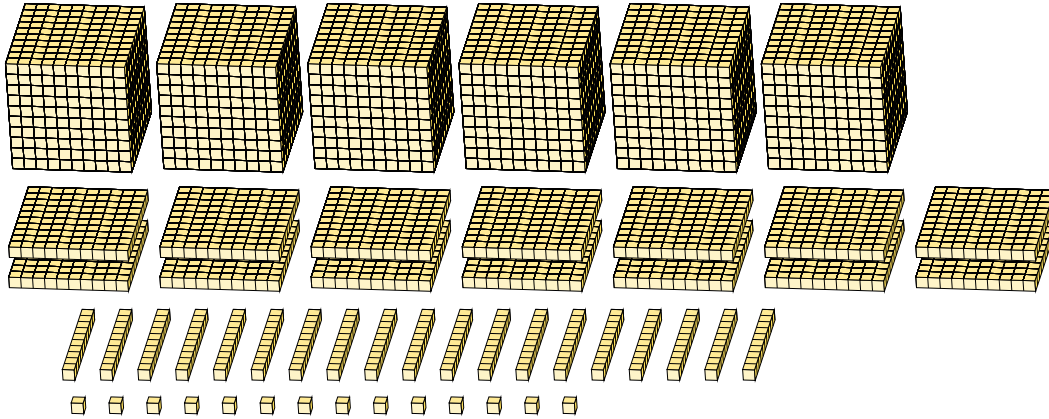
Regrouping Base Ten Blocks (I) Answers

Name: _____

Date: _____

What number is shown in each group of base ten blocks?

1.



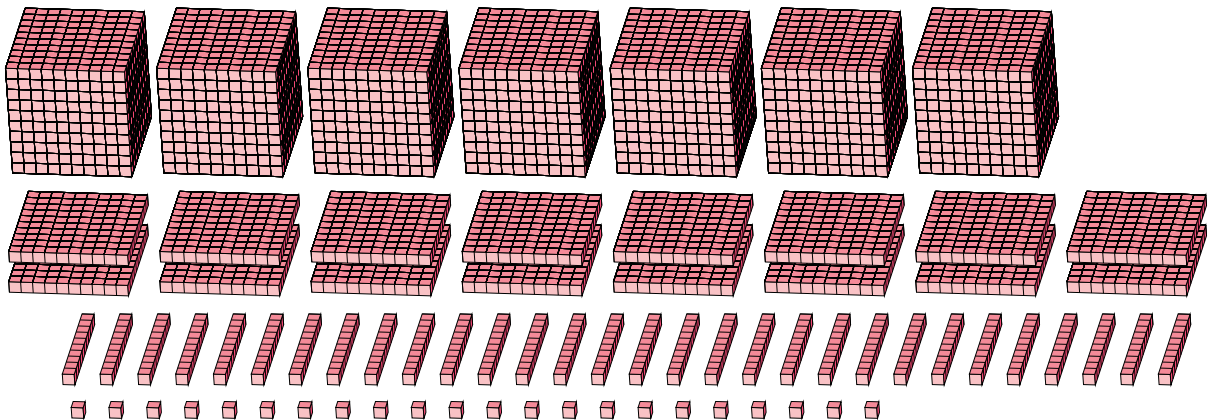
Expanded Form

Standard Form

$$\begin{aligned}
 &(6 \times 1000) + (14 \times 100) + (19 \times 10) + (14 \times 1) \\
 &(7 \times 1000) + (6 \times 100) + (0 \times 10) + (4 \times 1) \\
 &7000 + 600 + 0 + 4
 \end{aligned}$$

7604

2.



Expanded Form

Standard Form

$$\begin{aligned}
 &(7 \times 1000) + (16 \times 100) + (30 \times 10) + (22 \times 1) \\
 &(8 \times 1000) + (9 \times 100) + (2 \times 10) + (2 \times 1) \\
 &8000 + 900 + 20 + 2
 \end{aligned}$$

8922

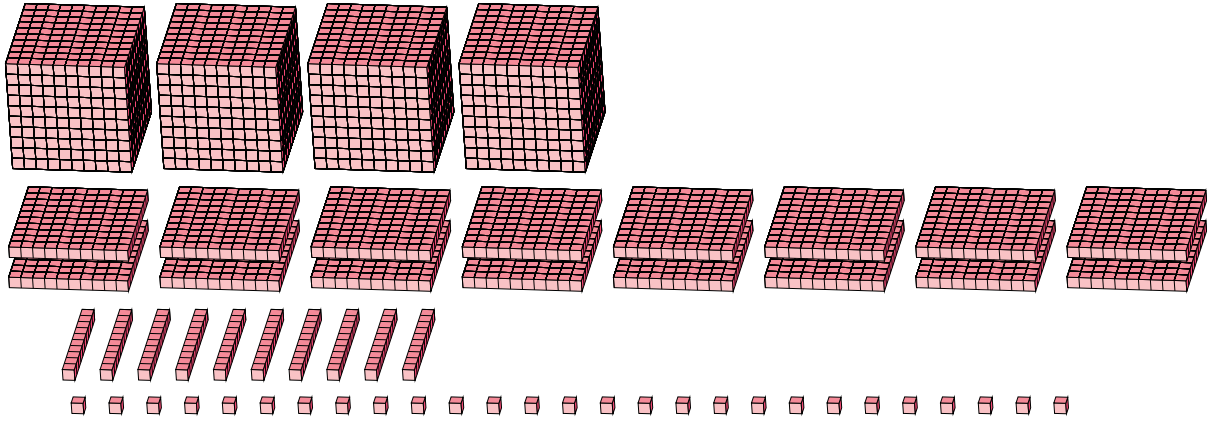
Regrouping Base Ten Blocks (J)

Name: _____

Date: _____

What number is shown in each group of base ten blocks?

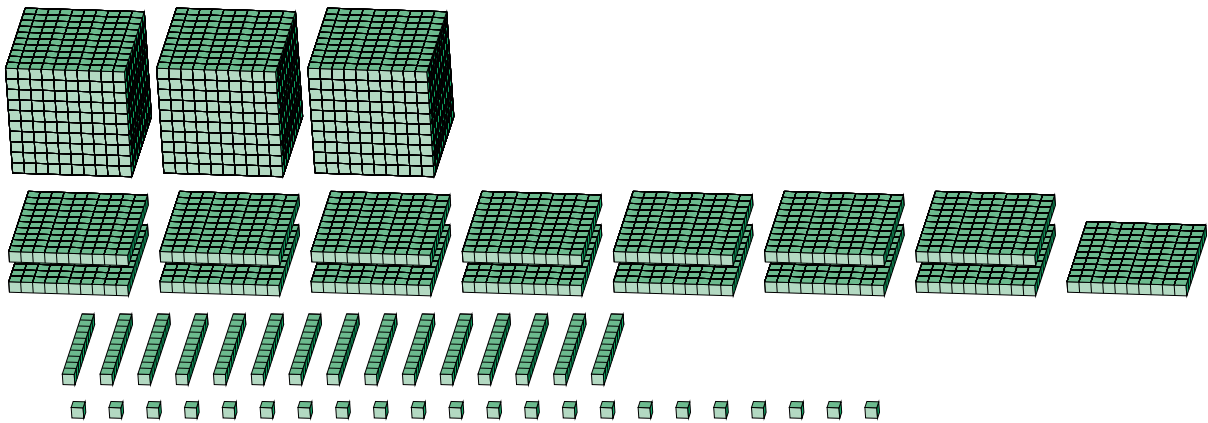
1.



Expanded Form

Standard Form

2.



Expanded Form

Standard Form

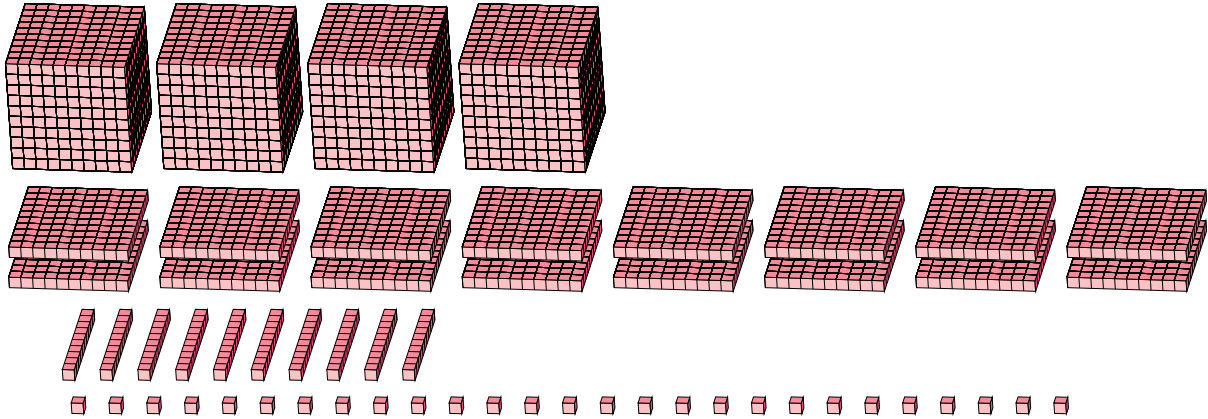
Regrouping Base Ten Blocks (J) Answers

Name: _____

Date: _____

What number is shown in each group of base ten blocks?

1.



Expanded Form

Standard Form

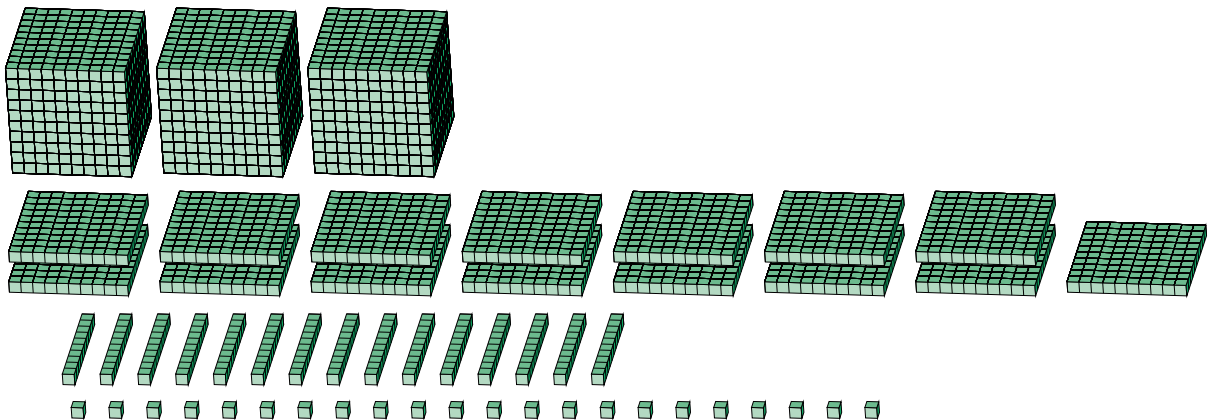
$$(4 \times 1000) + (16 \times 100) + (10 \times 10) + (27 \times 1)$$

$$(5 \times 1000) + (7 \times 100) + (2 \times 10) + (7 \times 1)$$

$$5000 + 700 + 20 + 7$$

5727

2.



Expanded Form

Standard Form

$$(3 \times 1000) + (15 \times 100) + (15 \times 10) + (22 \times 1)$$

$$(4 \times 1000) + (6 \times 100) + (7 \times 10) + (2 \times 1)$$

$$4000 + 600 + 70 + 2$$

4672