

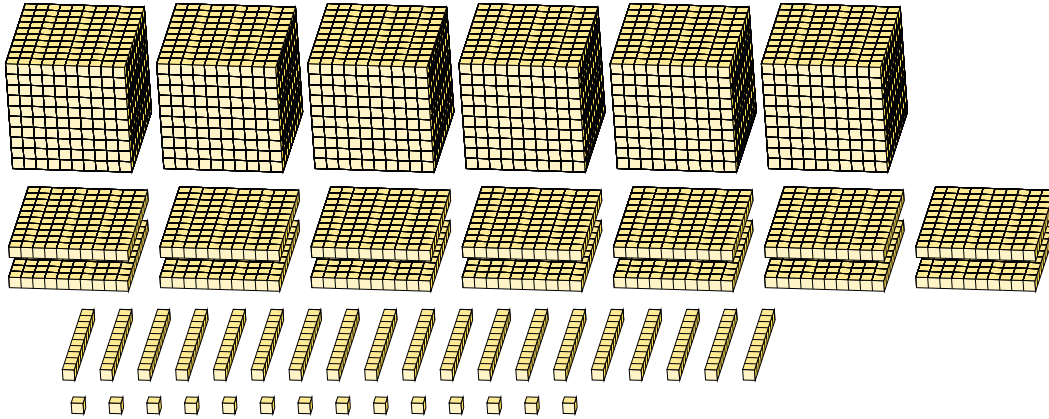
# Regrouping Base Ten Blocks (I)

Name: \_\_\_\_\_

Date: \_\_\_\_\_

What number is shown in each group of base ten blocks?

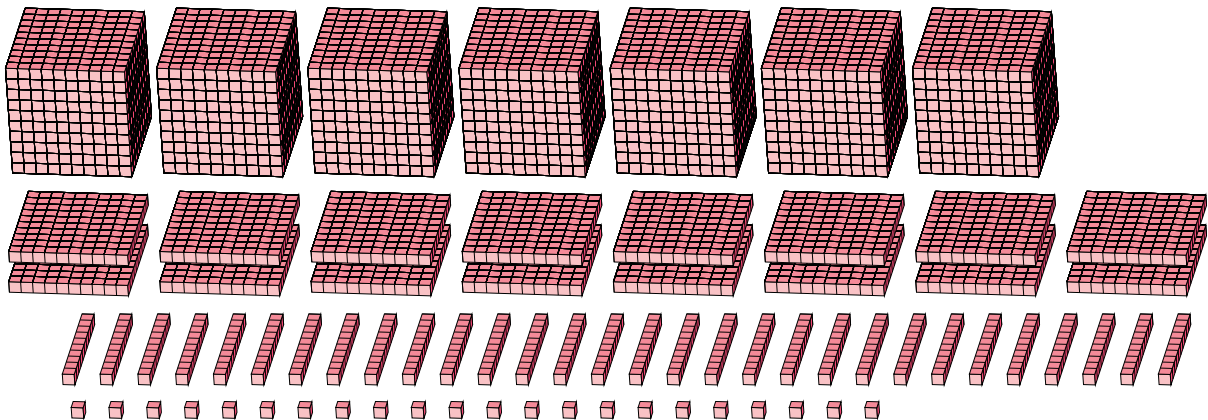
1.



Expanded Form

Standard Form

2.



Expanded Form

Standard Form

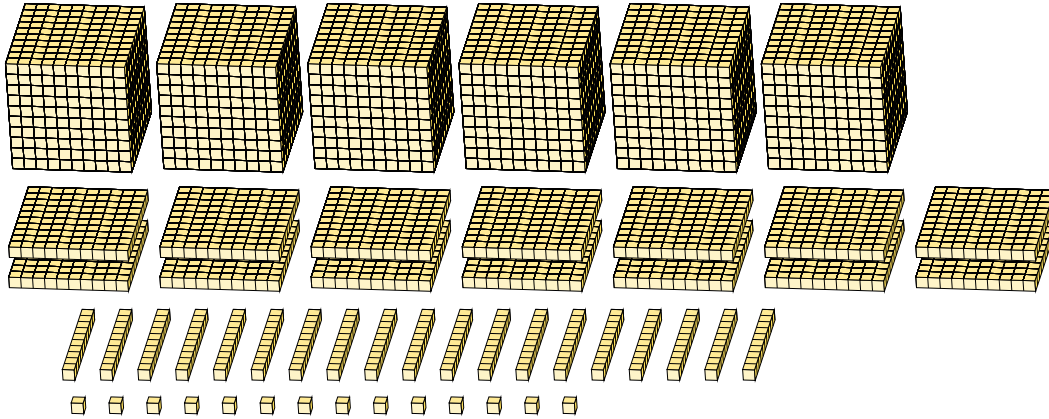
# Regrouping Base Ten Blocks (I) Answers

Name: \_\_\_\_\_

Date: \_\_\_\_\_

What number is shown in each group of base ten blocks?

1.



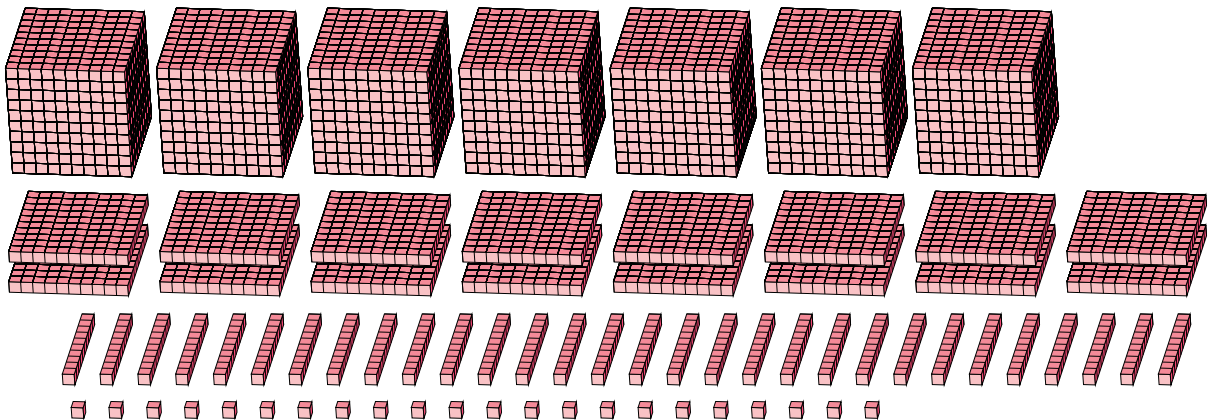
Expanded Form

Standard Form

$$\begin{aligned}
 &(6 \times 1000) + (14 \times 100) + (19 \times 10) + (14 \times 1) \\
 &(7 \times 1000) + (6 \times 100) + (0 \times 10) + (4 \times 1) \\
 &7000 + 600 + 0 + 4
 \end{aligned}$$

7604

2.



Expanded Form

Standard Form

$$\begin{aligned}
 &(7 \times 1000) + (16 \times 100) + (30 \times 10) + (22 \times 1) \\
 &(8 \times 1000) + (9 \times 100) + (2 \times 10) + (2 \times 1) \\
 &8000 + 900 + 20 + 2
 \end{aligned}$$

8922