

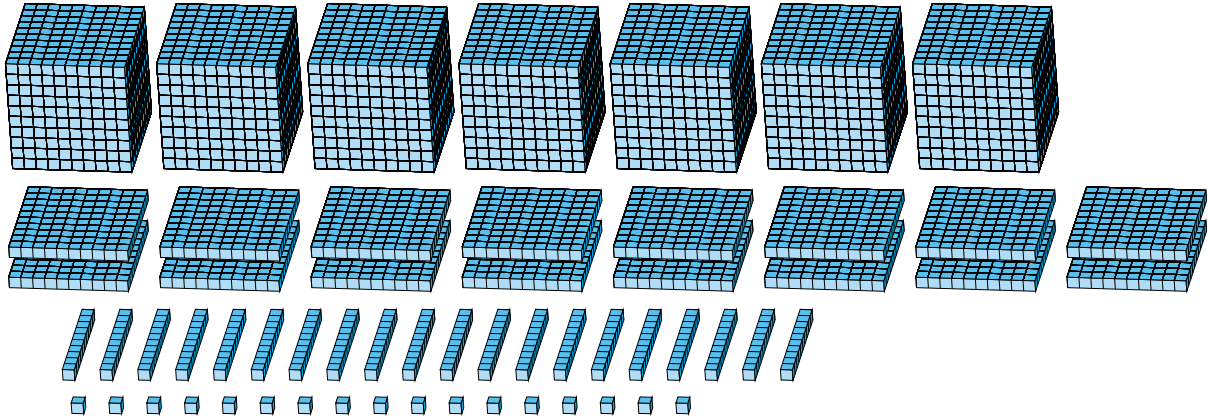
Regrouping Base Ten Blocks (E)

Name: _____

Date: _____

What number is shown in each group of base ten blocks?

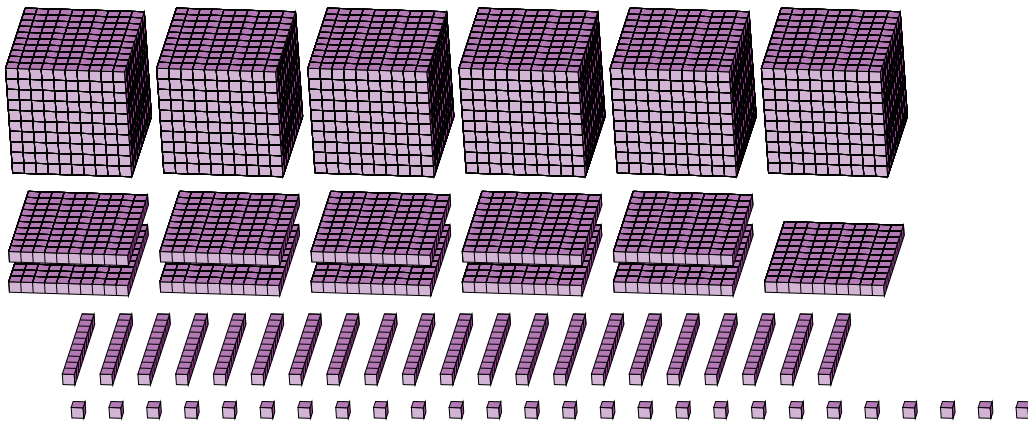
1.



Expanded Form

Standard Form

2.



Expanded Form

Standard Form

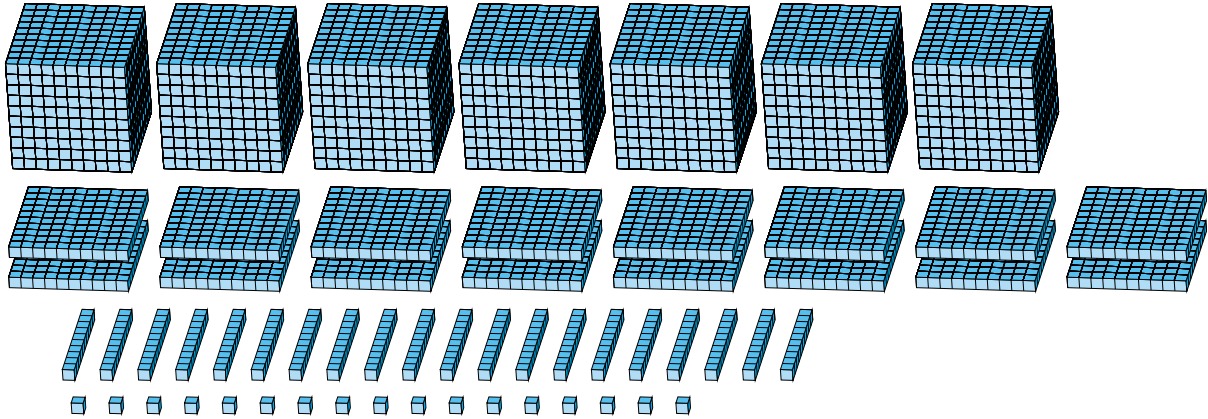
Regrouping Base Ten Blocks (E) Answers

Name: _____

Date: _____

What number is shown in each group of base ten blocks?

1.



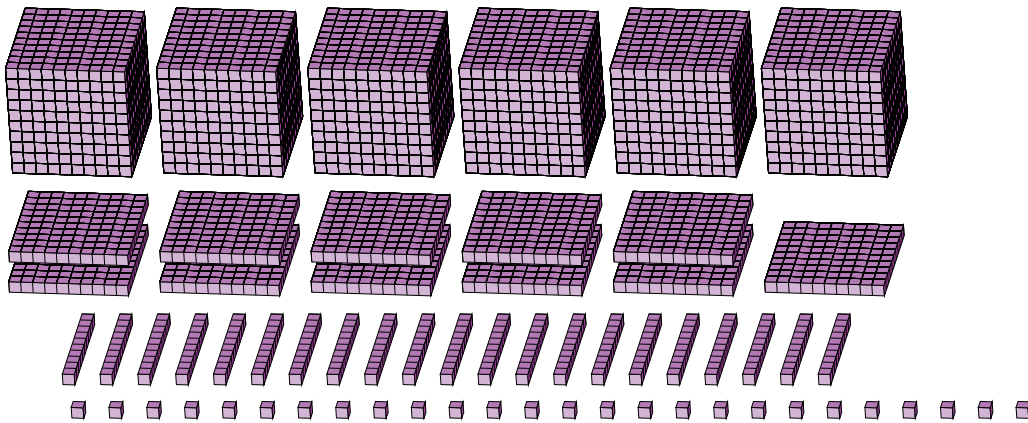
Expanded Form

Standard Form

$$\begin{aligned}
 &(7 \times 1000) + (16 \times 100) + (20 \times 10) + (17 \times 1) \\
 &(8 \times 1000) + (8 \times 100) + (1 \times 10) + (7 \times 1) \\
 &8000 + 800 + 10 + 7
 \end{aligned}$$

8817

2.



Expanded Form

Standard Form

$$\begin{aligned}
 &(6 \times 1000) + (11 \times 100) + (21 \times 10) + (26 \times 1) \\
 &(7 \times 1000) + (3 \times 100) + (3 \times 10) + (6 \times 1) \\
 &7000 + 300 + 30 + 6
 \end{aligned}$$

7336