

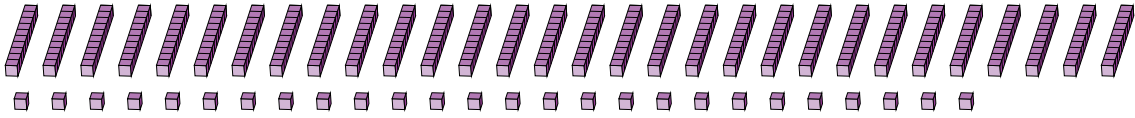
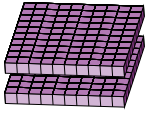
Regrouping Base Ten Blocks (D)

Name: _____

Date: _____

What number is shown in each group of base ten blocks?

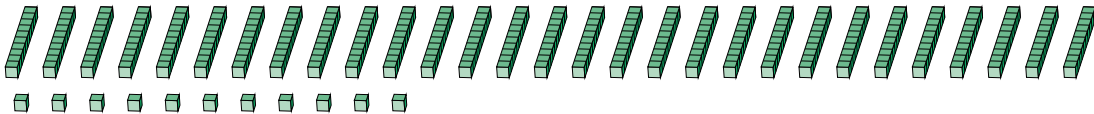
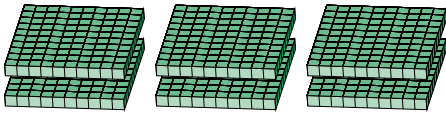
1.



Expanded Form

Standard Form

2.



Expanded Form

Standard Form

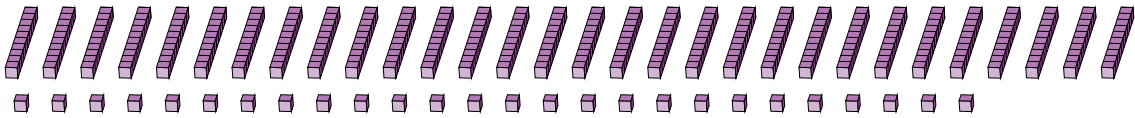
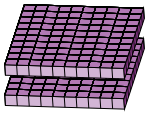
Regrouping Base Ten Blocks (D) Answers

Name: _____

Date: _____

What number is shown in each group of base ten blocks?

1.



Expanded Form

Standard Form

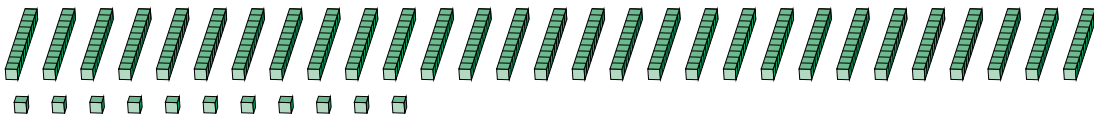
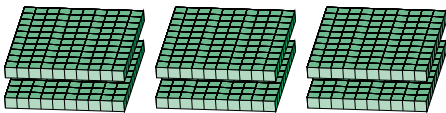
$$(2 \times 100) + (30 \times 10) + (26 \times 1)$$

$$(5 \times 100) + (2 \times 10) + (6 \times 1)$$

$$500 + 20 + 6$$

526

2.



Expanded Form

Standard Form

$$(6 \times 100) + (29 \times 10) + (11 \times 1)$$

$$(9 \times 100) + (0 \times 10) + (1 \times 1)$$

$$900 + 0 + 1$$

901