

Representing Numbers (E)

What number is shown in each group of base ten blocks?



100



10



1

Representing Numbers (E) Answers

What number is shown in each group of base ten blocks?



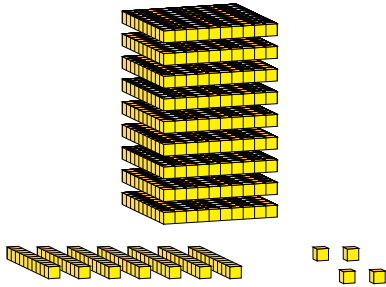
100



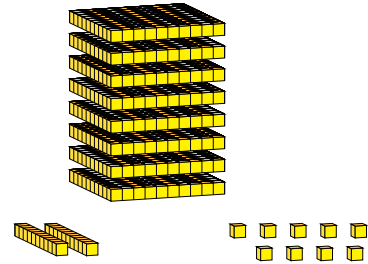
10



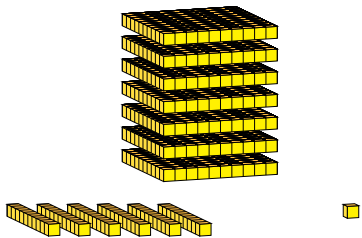
1



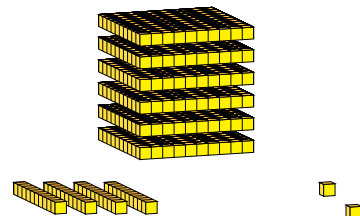
974



829



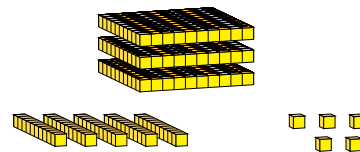
761



642



100



355