

Representing Numbers (D)

What number is shown in each group of base ten blocks?



100



10



1

Representing Numbers (D) Answers

What number is shown in each group of base ten blocks?



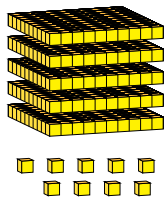
100



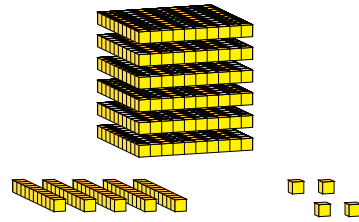
10



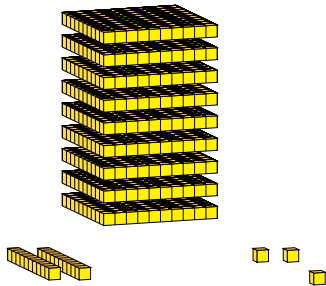
1



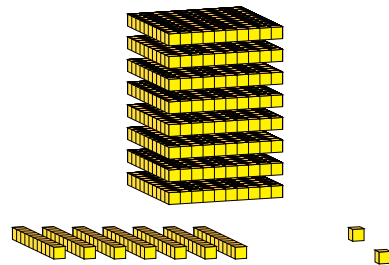
509



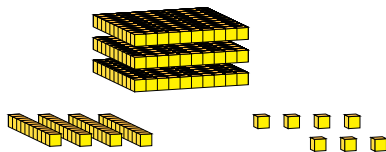
654



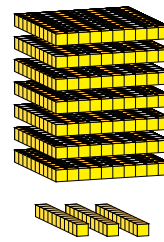
923



872



347



730