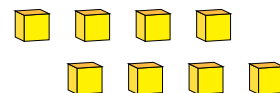
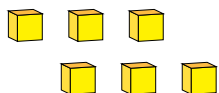
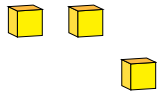
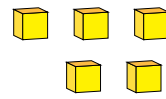
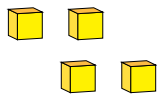


Representing Numbers (A)

What number is shown in each group of base ten blocks?



1

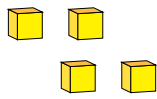


Representing Numbers (A) Answers

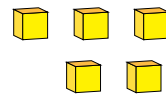
What number is shown in each group of base ten blocks?



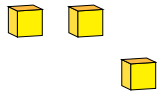
1



4



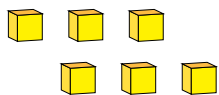
5



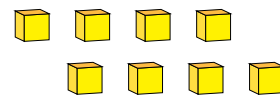
3



1



6



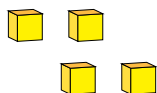
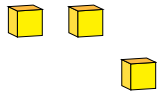
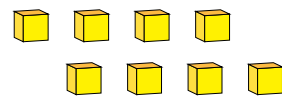
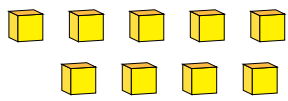
8

Representing Numbers (B)

What number is shown in each group of base ten blocks?



1

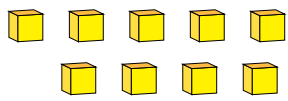


Representing Numbers (B) Answers

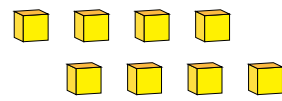
What number is shown in each group of base ten blocks?



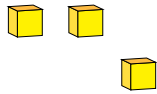
1



9



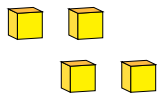
8



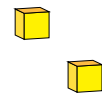
3



1



4



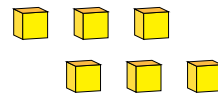
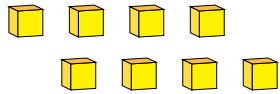
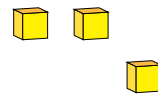
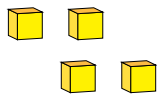
2

Representing Numbers (C)

What number is shown in each group of base ten blocks?



1

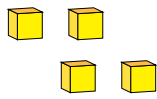


Representing Numbers (C) Answers

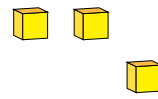
What number is shown in each group of base ten blocks?



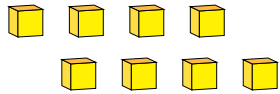
1



4



3



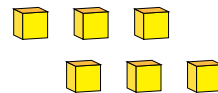
8



2



1



6

Representing Numbers (D)

What number is shown in each group of base ten blocks?



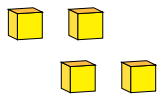
1

Representing Numbers (D) Answers

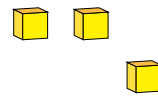
What number is shown in each group of base ten blocks?



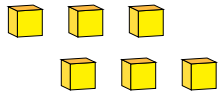
1



4



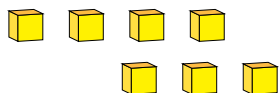
3



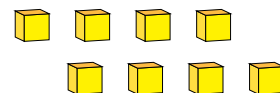
6



1



7



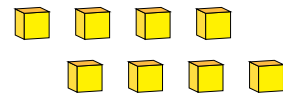
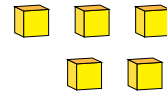
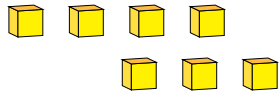
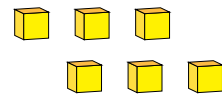
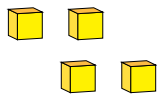
8

Representing Numbers (E)

What number is shown in each group of base ten blocks?



1

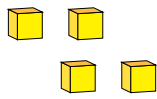


Representing Numbers (E) Answers

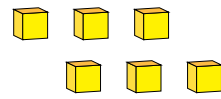
What number is shown in each group of base ten blocks?



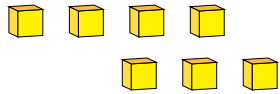
1



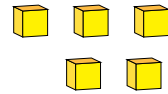
4



6



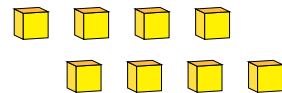
7



5



1



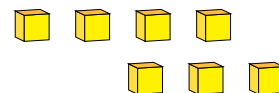
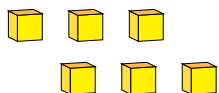
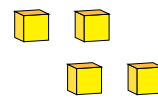
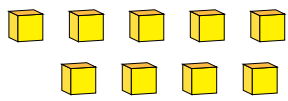
8

Representing Numbers (F)

What number is shown in each group of base ten blocks?



1

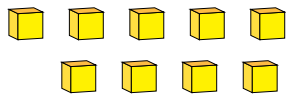


Representing Numbers (F) Answers

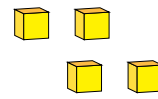
What number is shown in each group of base ten blocks?



1



9



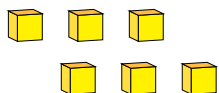
4



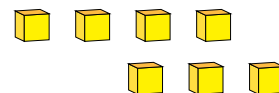
2



1



6



7

Representing Numbers (G)

What number is shown in each group of base ten blocks?



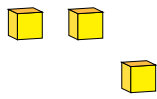
1

Representing Numbers (G) Answers

What number is shown in each group of base ten blocks?



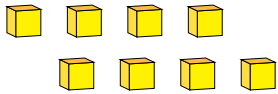
1



3



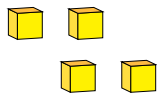
2



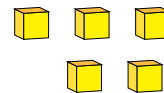
8



1



4



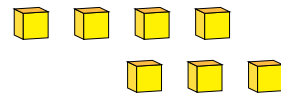
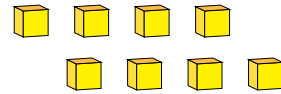
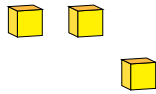
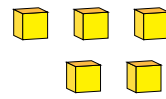
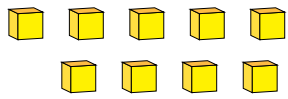
5

Representing Numbers (H)

What number is shown in each group of base ten blocks?



1

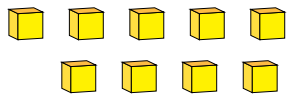


Representing Numbers (H) Answers

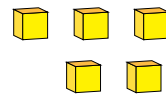
What number is shown in each group of base ten blocks?



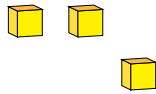
1



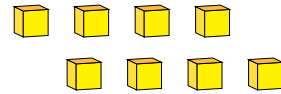
9



5



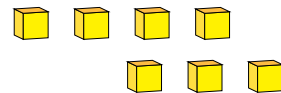
3



8



1



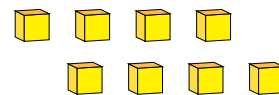
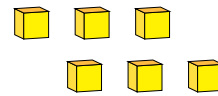
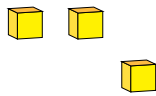
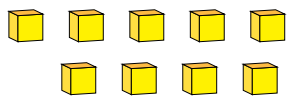
7

Representing Numbers (I)

What number is shown in each group of base ten blocks?



1

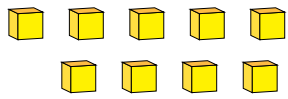


Representing Numbers (I) Answers

What number is shown in each group of base ten blocks?



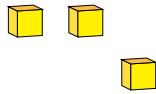
1



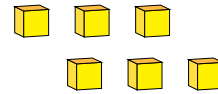
9



2



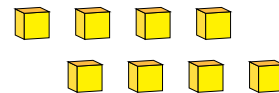
3



6



1



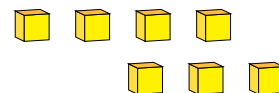
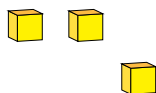
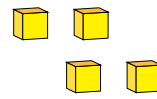
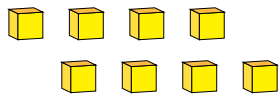
8

Representing Numbers (J)

What number is shown in each group of base ten blocks?



1

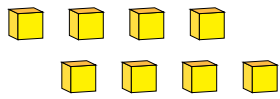


Representing Numbers (J) Answers

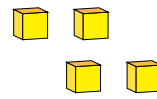
What number is shown in each group of base ten blocks?



1



8



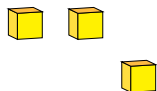
4



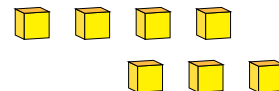
1



2



3



7