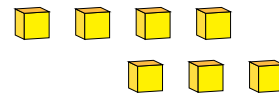
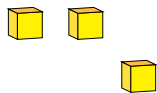
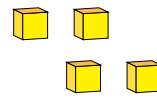
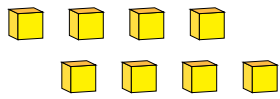


Representing Numbers (J)

What number is shown in each group of base ten blocks?



1

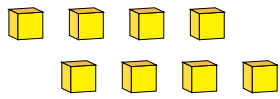


Representing Numbers (J) Answers

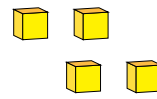
What number is shown in each group of base ten blocks?



1



8



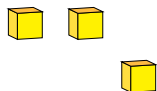
4



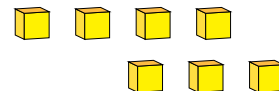
1



2



3



7