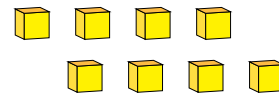
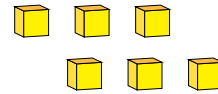
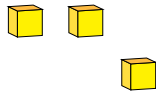
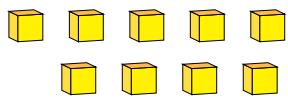


# Representing Numbers (I)

What number is shown in each group of base ten blocks?



1

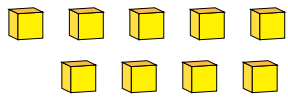


# Representing Numbers (I) Answers

What number is shown in each group of base ten blocks?



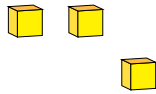
1



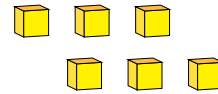
9



2



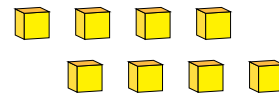
3



6



1



8